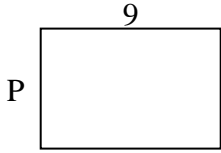


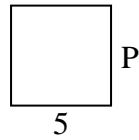


Berechne den Wert von 'P'.

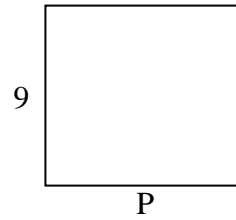
1) Fläche =  $54 \text{ u}^2$



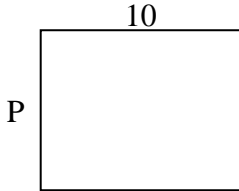
2) Fläche =  $25 \text{ u}^2$



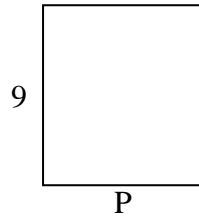
3) Fläche =  $90 \text{ u}^2$



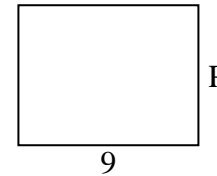
4) Fläche =  $80 \text{ u}^2$



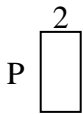
5) Fläche =  $72 \text{ u}^2$



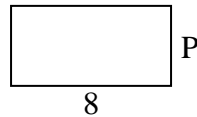
6) Fläche =  $63 \text{ u}^2$



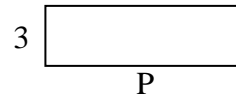
7) Fläche =  $8 \text{ u}^2$



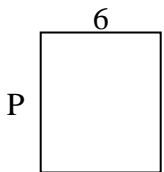
8) Fläche =  $32 \text{ u}^2$



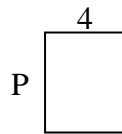
9) Fläche =  $30 \text{ u}^2$



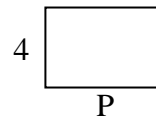
10) Fläche =  $42 \text{ u}^2$



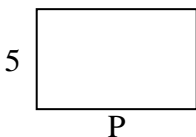
11) Fläche =  $20 \text{ u}^2$



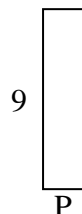
12) Fläche =  $24 \text{ u}^2$



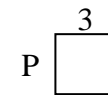
13) Fläche =  $40 \text{ u}^2$



14) Fläche =  $18 \text{ u}^2$



15) Fläche =  $9 \text{ u}^2$

Antworten

1. \_\_\_\_\_

2. \_\_\_\_\_

3. \_\_\_\_\_

4. \_\_\_\_\_

5. \_\_\_\_\_

6. \_\_\_\_\_

7. \_\_\_\_\_

8. \_\_\_\_\_

9. \_\_\_\_\_

10. \_\_\_\_\_

11. \_\_\_\_\_

12. \_\_\_\_\_

13. \_\_\_\_\_

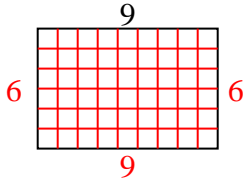
14. \_\_\_\_\_

15. \_\_\_\_\_

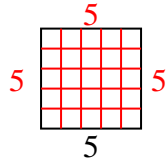


Berechne den Wert von 'P'.

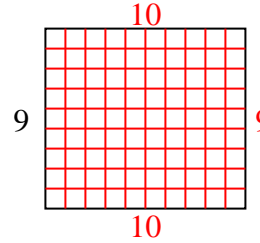
1) Fläche =  $54 \text{ u}^2$



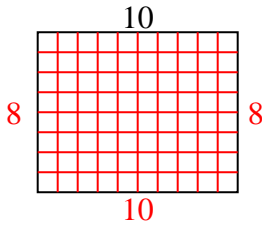
2) Fläche =  $25 \text{ u}^2$



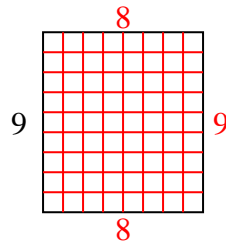
3) Fläche =  $90 \text{ u}^2$



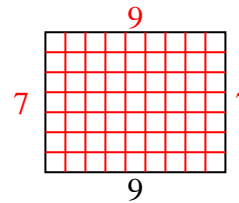
4) Fläche =  $80 \text{ u}^2$



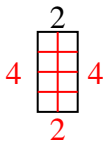
5) Fläche =  $72 \text{ u}^2$



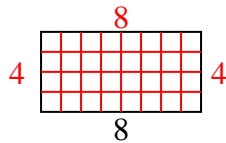
6) Fläche =  $63 \text{ u}^2$



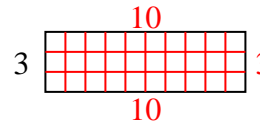
7) Fläche =  $8 \text{ u}^2$



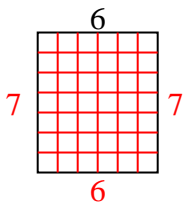
8) Fläche =  $32 \text{ u}^2$



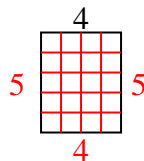
9) Fläche =  $30 \text{ u}^2$



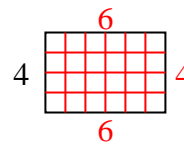
10) Fläche =  $42 \text{ u}^2$



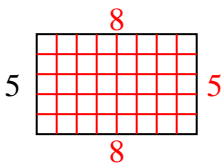
11) Fläche =  $20 \text{ u}^2$



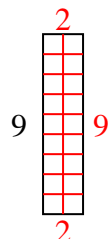
12) Fläche =  $24 \text{ u}^2$



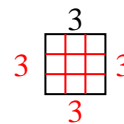
13) Fläche =  $40 \text{ u}^2$



14) Fläche =  $18 \text{ u}^2$



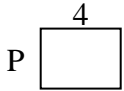
15) Fläche =  $9 \text{ u}^2$

Antworten1. 62. 53. 104. 85. 86. 77. 48. 49. 1010. 711. 512. 613. 814. 215. 3

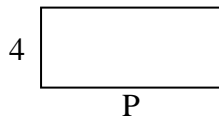


Berechne den Wert von 'P'.

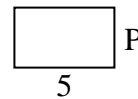
1) Fläche =  $12 \text{ u}^2$



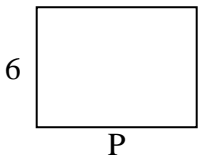
2) Fläche =  $36 \text{ u}^2$



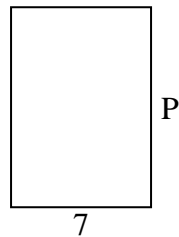
3) Fläche =  $15 \text{ u}^2$



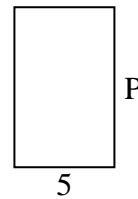
4) Fläche =  $48 \text{ u}^2$



5) Fläche =  $70 \text{ u}^2$



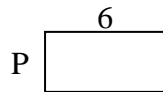
6) Fläche =  $40 \text{ u}^2$



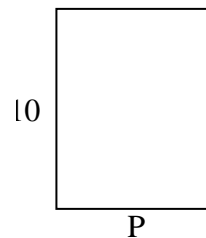
7) Fläche =  $6 \text{ u}^2$




8) Fläche =  $18 \text{ u}^2$



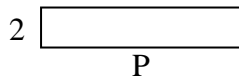
9) Fläche =  $80 \text{ u}^2$



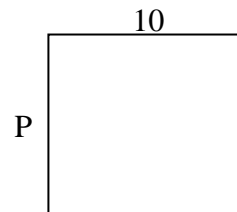
10) Fläche =  $12 \text{ u}^2$



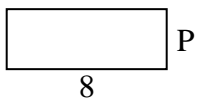
11) Fläche =  $20 \text{ u}^2$




12) Fläche =  $90 \text{ u}^2$



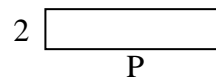
13) Fläche =  $24 \text{ u}^2$



14) Fläche =  $28 \text{ u}^2$



15) Fläche =  $18 \text{ u}^2$

Antworten

1. \_\_\_\_\_

2. \_\_\_\_\_

3. \_\_\_\_\_

4. \_\_\_\_\_

5. \_\_\_\_\_

6. \_\_\_\_\_

7. \_\_\_\_\_

8. \_\_\_\_\_

9. \_\_\_\_\_

10. \_\_\_\_\_

11. \_\_\_\_\_

12. \_\_\_\_\_

13. \_\_\_\_\_

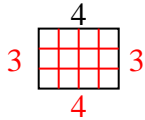
14. \_\_\_\_\_

15. \_\_\_\_\_

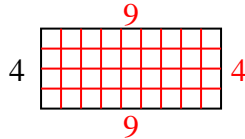


Berechne den Wert von 'P'.

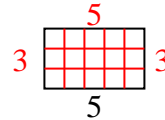
1) Fläche =  $12 \text{ u}^2$



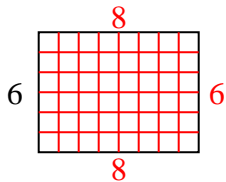
2) Fläche =  $36 \text{ u}^2$



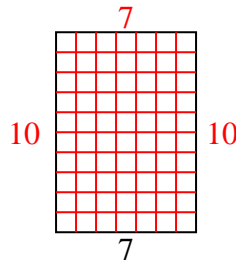
3) Fläche =  $15 \text{ u}^2$



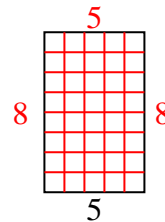
4) Fläche =  $48 \text{ u}^2$



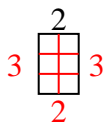
5) Fläche =  $70 \text{ u}^2$



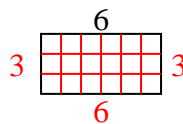
6) Fläche =  $40 \text{ u}^2$



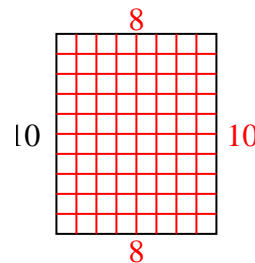
7) Fläche =  $6 \text{ u}^2$



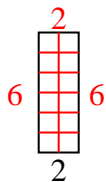
8) Fläche =  $18 \text{ u}^2$



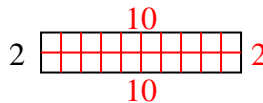
9) Fläche =  $80 \text{ u}^2$



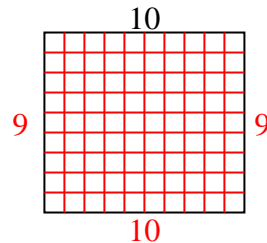
10) Fläche =  $12 \text{ u}^2$



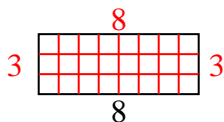
11) Fläche =  $20 \text{ u}^2$



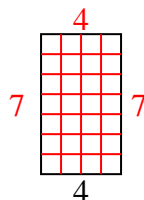
12) Fläche =  $90 \text{ u}^2$



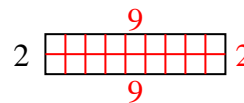
13) Fläche =  $24 \text{ u}^2$



14) Fläche =  $28 \text{ u}^2$



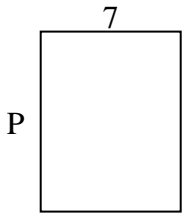
15) Fläche =  $18 \text{ u}^2$

**Antworten**1. 32. 93. 34. 85. 106. 87. 38. 39. 810. 611. 1012. 913. 314. 715. 9

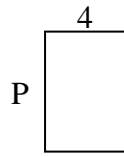


Berechne den Wert von 'P'.

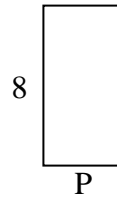
1) Fläche =  $63 \text{ u}^2$



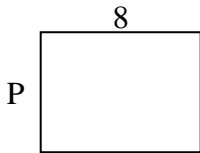
2) Fläche =  $24 \text{ u}^2$



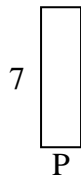
3) Fläche =  $32 \text{ u}^2$



4) Fläche =  $48 \text{ u}^2$




5) Fläche =  $14 \text{ u}^2$



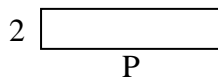
6) Fläche =  $4 \text{ u}^2$



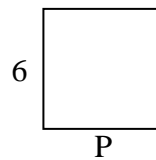
7) Fläche =  $60 \text{ u}^2$



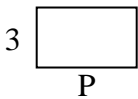
8) Fläche =  $18 \text{ u}^2$



9) Fläche =  $36 \text{ u}^2$



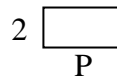
10) Fläche =  $15 \text{ u}^2$



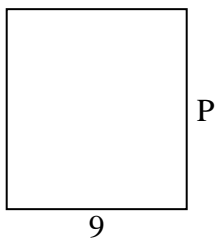
11) Fläche =  $45 \text{ u}^2$



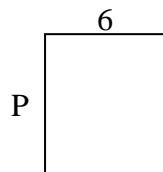
12) Fläche =  $8 \text{ u}^2$



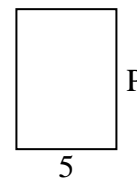
13) Fläche =  $90 \text{ u}^2$



14) Fläche =  $42 \text{ u}^2$



15) Fläche =  $35 \text{ u}^2$

Antworten

1. \_\_\_\_\_

2. \_\_\_\_\_

3. \_\_\_\_\_

4. \_\_\_\_\_

5. \_\_\_\_\_

6. \_\_\_\_\_

7. \_\_\_\_\_

8. \_\_\_\_\_

9. \_\_\_\_\_

10. \_\_\_\_\_

11. \_\_\_\_\_

12. \_\_\_\_\_

13. \_\_\_\_\_

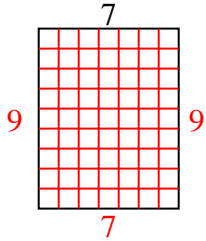
14. \_\_\_\_\_

15. \_\_\_\_\_

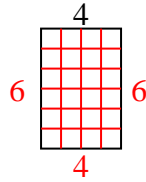


Berechne den Wert von 'P'.

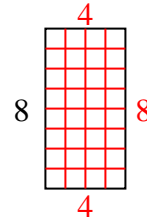
1) Fläche =  $63 \text{ u}^2$



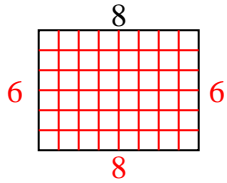
2) Fläche =  $24 \text{ u}^2$



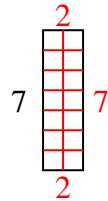
3) Fläche =  $32 \text{ u}^2$



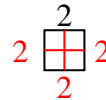
4) Fläche =  $48 \text{ u}^2$



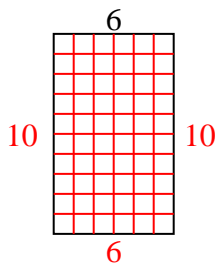
5) Fläche =  $14 \text{ u}^2$



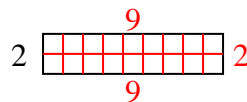
6) Fläche =  $4 \text{ u}^2$



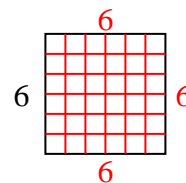
7) Fläche =  $60 \text{ u}^2$



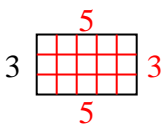
8) Fläche =  $18 \text{ u}^2$



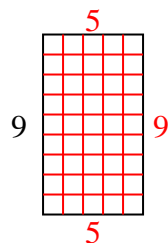
9) Fläche =  $36 \text{ u}^2$



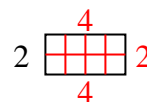
10) Fläche =  $15 \text{ u}^2$



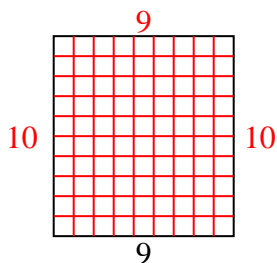
11) Fläche =  $45 \text{ u}^2$



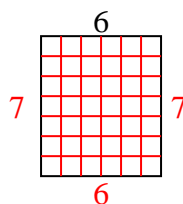
12) Fläche =  $8 \text{ u}^2$



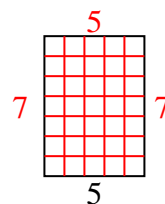
13) Fläche =  $90 \text{ u}^2$



14) Fläche =  $42 \text{ u}^2$



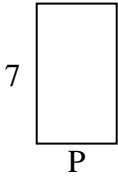
15) Fläche =  $35 \text{ u}^2$

Antworten1. 92. 63. 44. 65. 26. 27. 108. 99. 610. 511. 512. 413. 1014. 715. 7

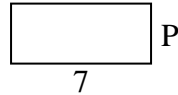


Berechne den Wert von 'P'.

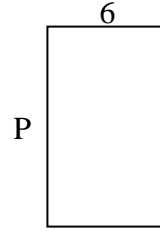
1) Fläche =  $28 \text{ u}^2$



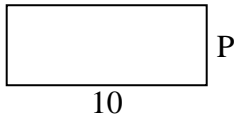
2) Fläche =  $21 \text{ u}^2$



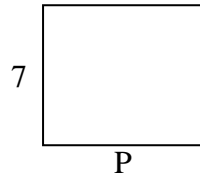
3) Fläche =  $60 \text{ u}^2$




4) Fläche =  $40 \text{ u}^2$



5) Fläche =  $56 \text{ u}^2$



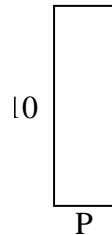
6) Fläche =  $16 \text{ u}^2$



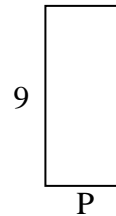
7) Fläche =  $4 \text{ u}^2$



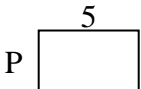
8) Fläche =  $30 \text{ u}^2$



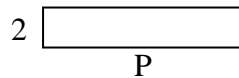
9) Fläche =  $36 \text{ u}^2$



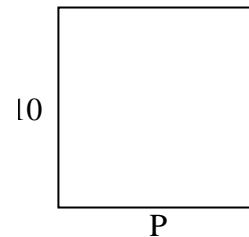
10) Fläche =  $15 \text{ u}^2$



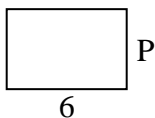
11) Fläche =  $20 \text{ u}^2$



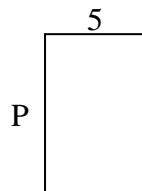
12) Fläche =  $100 \text{ u}^2$



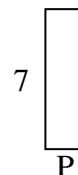
13) Fläche =  $24 \text{ u}^2$



14) Fläche =  $40 \text{ u}^2$



15) Fläche =  $14 \text{ u}^2$

Antworten

1. \_\_\_\_\_

2. \_\_\_\_\_

3. \_\_\_\_\_

4. \_\_\_\_\_

5. \_\_\_\_\_

6. \_\_\_\_\_

7. \_\_\_\_\_

8. \_\_\_\_\_

9. \_\_\_\_\_

10. \_\_\_\_\_

11. \_\_\_\_\_

12. \_\_\_\_\_

13. \_\_\_\_\_

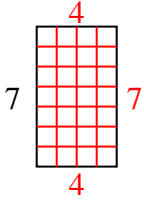
14. \_\_\_\_\_

15. \_\_\_\_\_

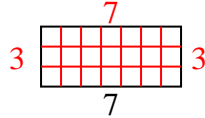


Berechne den Wert von 'P'.

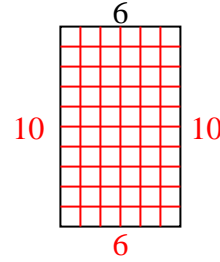
1) Fläche =  $28 \text{ u}^2$



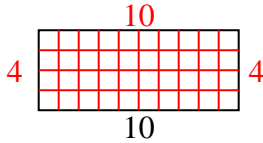
2) Fläche =  $21 \text{ u}^2$



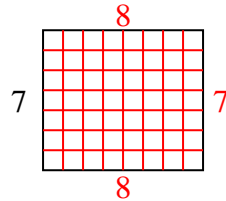
3) Fläche =  $60 \text{ u}^2$



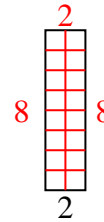
4) Fläche =  $40 \text{ u}^2$



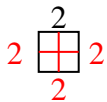
5) Fläche =  $56 \text{ u}^2$



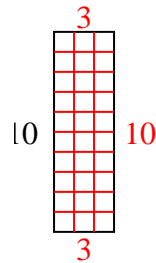
6) Fläche =  $16 \text{ u}^2$



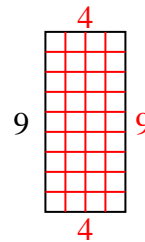
7) Fläche =  $4 \text{ u}^2$



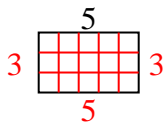
8) Fläche =  $30 \text{ u}^2$



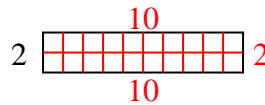
9) Fläche =  $36 \text{ u}^2$



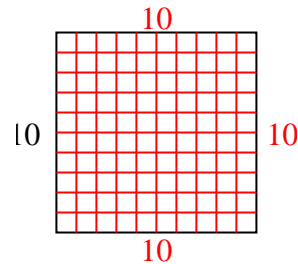
10) Fläche =  $15 \text{ u}^2$



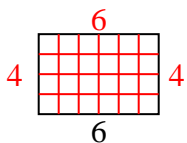
11) Fläche =  $20 \text{ u}^2$



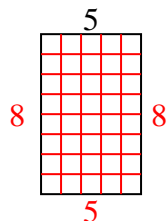
12) Fläche =  $100 \text{ u}^2$



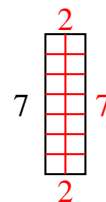
13) Fläche =  $24 \text{ u}^2$



14) Fläche =  $40 \text{ u}^2$



15) Fläche =  $14 \text{ u}^2$

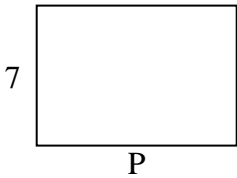
Antworten1. 42. 33. 104. 45. 86. 87. 28. 39. 410. 311. 1012. 1013. 414. 815. 2



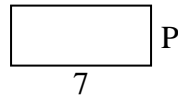


Berechne den Wert von 'P'.

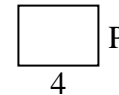
1) Fläche =  $70 \text{ u}^2$



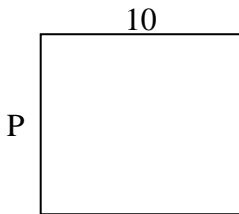
2) Fläche =  $21 \text{ u}^2$



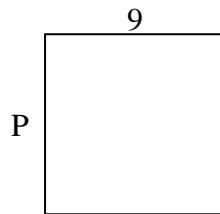
3) Fläche =  $12 \text{ u}^2$



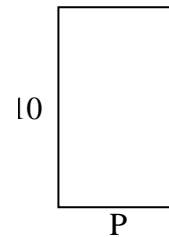
4) Fläche =  $90 \text{ u}^2$



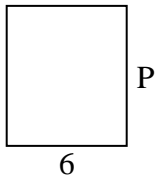
5) Fläche =  $81 \text{ u}^2$



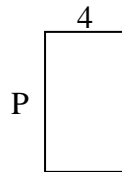
6) Fläche =  $60 \text{ u}^2$



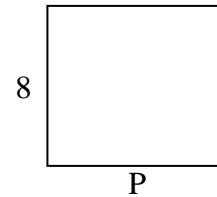
7) Fläche =  $42 \text{ u}^2$



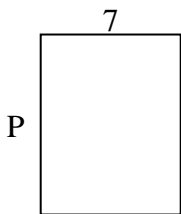
8) Fläche =  $28 \text{ u}^2$



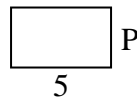
9) Fläche =  $72 \text{ u}^2$



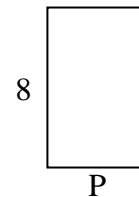
10) Fläche =  $63 \text{ u}^2$



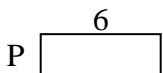
11) Fläche =  $15 \text{ u}^2$



12) Fläche =  $40 \text{ u}^2$



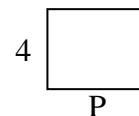
13) Fläche =  $12 \text{ u}^2$



14) Fläche =  $6 \text{ u}^2$



15) Fläche =  $20 \text{ u}^2$

Antworten

1. \_\_\_\_\_

2. \_\_\_\_\_

3. \_\_\_\_\_

4. \_\_\_\_\_

5. \_\_\_\_\_

6. \_\_\_\_\_

7. \_\_\_\_\_

8. \_\_\_\_\_

9. \_\_\_\_\_

10. \_\_\_\_\_

11. \_\_\_\_\_

12. \_\_\_\_\_

13. \_\_\_\_\_

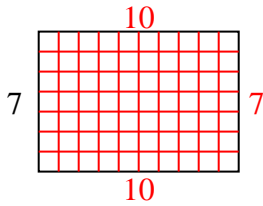
14. \_\_\_\_\_

15. \_\_\_\_\_

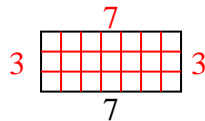


Berechne den Wert von 'P'.

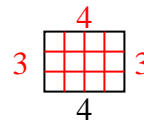
1) Fläche =  $70 \text{ u}^2$



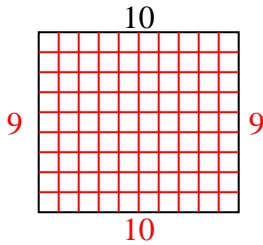
2) Fläche =  $21 \text{ u}^2$



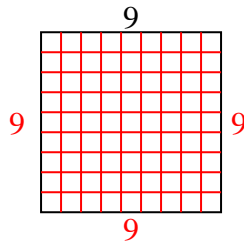
3) Fläche =  $12 \text{ u}^2$



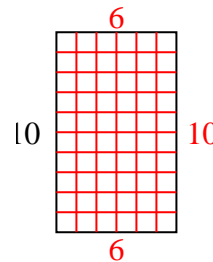
4) Fläche =  $90 \text{ u}^2$



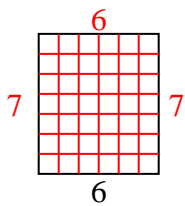
5) Fläche =  $81 \text{ u}^2$



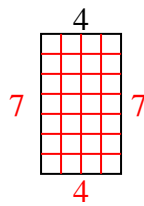
6) Fläche =  $60 \text{ u}^2$



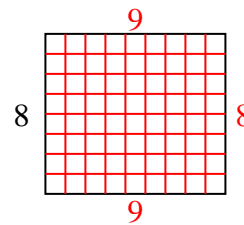
7) Fläche =  $42 \text{ u}^2$



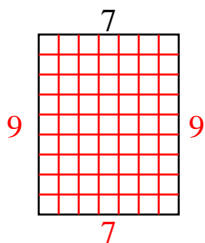
8) Fläche =  $28 \text{ u}^2$



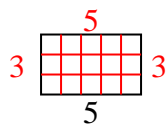
9) Fläche =  $72 \text{ u}^2$



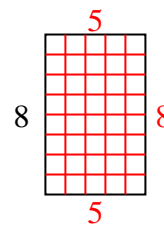
10) Fläche =  $63 \text{ u}^2$



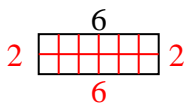
11) Fläche =  $15 \text{ u}^2$



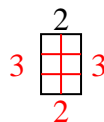
12) Fläche =  $40 \text{ u}^2$



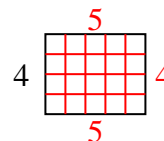
13) Fläche =  $12 \text{ u}^2$

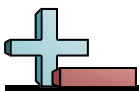


14) Fläche =  $6 \text{ u}^2$



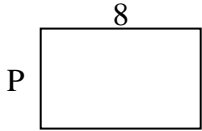
15) Fläche =  $20 \text{ u}^2$

Antworten1. 102. 33. 34. 95. 96. 67. 78. 79. 910. 911. 312. 513. 214. 315. 5




Berechne den Wert von 'P'.

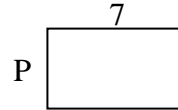
1) Fläche =  $40 \text{ u}^2$



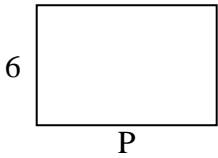
2) Fläche =  $50 \text{ u}^2$



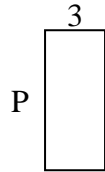
3) Fläche =  $28 \text{ u}^2$



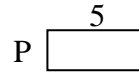
4) Fläche =  $54 \text{ u}^2$



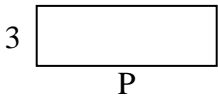
5) Fläche =  $21 \text{ u}^2$



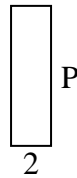
6) Fläche =  $10 \text{ u}^2$



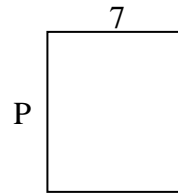
7) Fläche =  $27 \text{ u}^2$



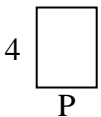
8) Fläche =  $14 \text{ u}^2$



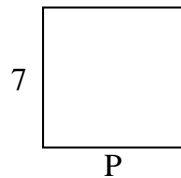
9) Fläche =  $56 \text{ u}^2$



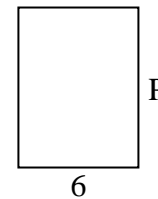
10) Fläche =  $12 \text{ u}^2$



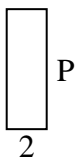
11) Fläche =  $49 \text{ u}^2$



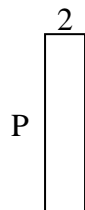
12) Fläche =  $48 \text{ u}^2$



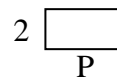
13) Fläche =  $12 \text{ u}^2$



14) Fläche =  $18 \text{ u}^2$



15) Fläche =  $8 \text{ u}^2$

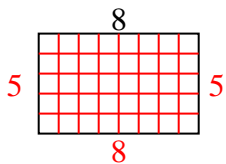
Antworten

1. \_\_\_\_\_
2. \_\_\_\_\_
3. \_\_\_\_\_
4. \_\_\_\_\_
5. \_\_\_\_\_
6. \_\_\_\_\_
7. \_\_\_\_\_
8. \_\_\_\_\_
9. \_\_\_\_\_
10. \_\_\_\_\_
11. \_\_\_\_\_
12. \_\_\_\_\_
13. \_\_\_\_\_
14. \_\_\_\_\_
15. \_\_\_\_\_

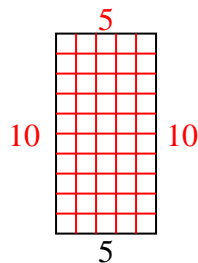


Berechne den Wert von 'P'.

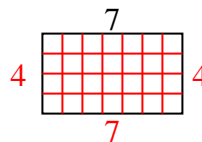
1) Fläche =  $40 \text{ u}^2$



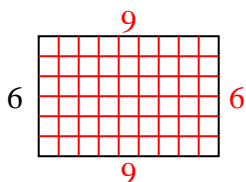
2) Fläche =  $50 \text{ u}^2$



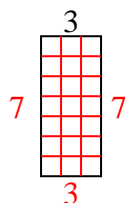
3) Fläche =  $28 \text{ u}^2$



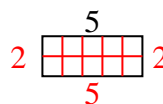
4) Fläche =  $54 \text{ u}^2$



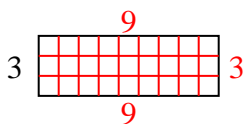
5) Fläche =  $21 \text{ u}^2$



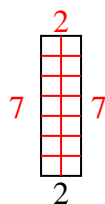
6) Fläche =  $10 \text{ u}^2$



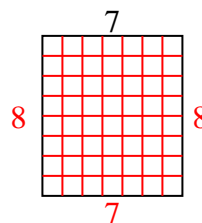
7) Fläche =  $27 \text{ u}^2$



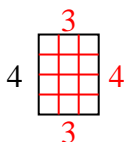
8) Fläche =  $14 \text{ u}^2$



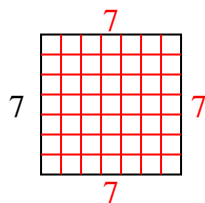
9) Fläche =  $56 \text{ u}^2$



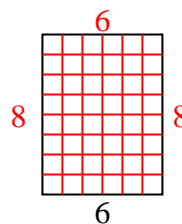
10) Fläche =  $12 \text{ u}^2$



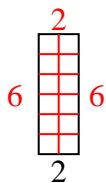
11) Fläche =  $49 \text{ u}^2$



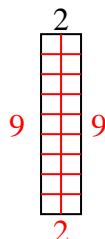
12) Fläche =  $48 \text{ u}^2$



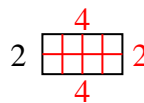
13) Fläche =  $12 \text{ u}^2$



14) Fläche =  $18 \text{ u}^2$



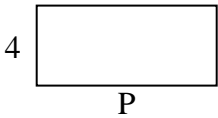
15) Fläche =  $8 \text{ u}^2$

**Antworten**1. 52. 103. 44. 95. 76. 27. 98. 79. 810. 311. 712. 813. 614. 915. 4




Berechne den Wert von 'P'.

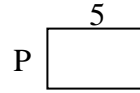
1) Fläche =  $36 \text{ u}^2$



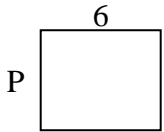
2) Fläche =  $24 \text{ u}^2$



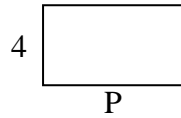
3) Fläche =  $15 \text{ u}^2$




4) Fläche =  $30 \text{ u}^2$



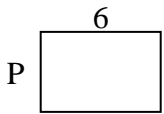
5) Fläche =  $28 \text{ u}^2$



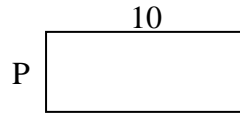
6) Fläche =  $45 \text{ u}^2$



7) Fläche =  $24 \text{ u}^2$



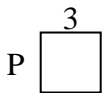
8) Fläche =  $40 \text{ u}^2$



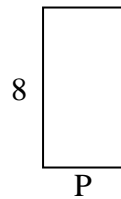
9) Fläche =  $4 \text{ u}^2$



10) Fläche =  $9 \text{ u}^2$



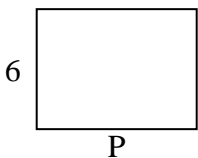
11) Fläche =  $32 \text{ u}^2$



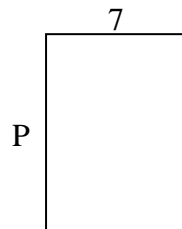
12) Fläche =  $54 \text{ u}^2$



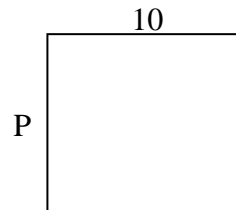
13) Fläche =  $48 \text{ u}^2$



14) Fläche =  $70 \text{ u}^2$



15) Fläche =  $90 \text{ u}^2$

Antworten

1. \_\_\_\_\_

2. \_\_\_\_\_

3. \_\_\_\_\_

4. \_\_\_\_\_

5. \_\_\_\_\_

6. \_\_\_\_\_

7. \_\_\_\_\_

8. \_\_\_\_\_

9. \_\_\_\_\_

10. \_\_\_\_\_

11. \_\_\_\_\_

12. \_\_\_\_\_

13. \_\_\_\_\_

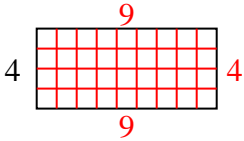
14. \_\_\_\_\_

15. \_\_\_\_\_

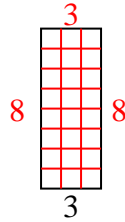


Berechne den Wert von 'P'.

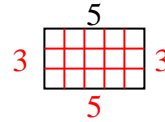
1) Fläche =  $36 \text{ u}^2$



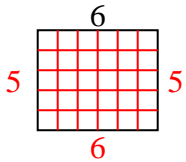
2) Fläche =  $24 \text{ u}^2$



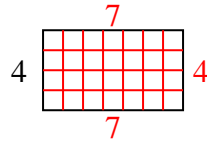
3) Fläche =  $15 \text{ u}^2$



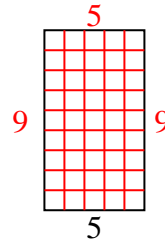
4) Fläche =  $30 \text{ u}^2$



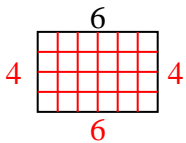
5) Fläche =  $28 \text{ u}^2$



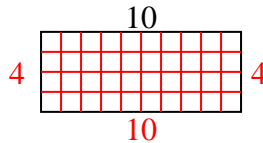
6) Fläche =  $45 \text{ u}^2$



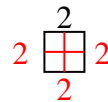
7) Fläche =  $24 \text{ u}^2$



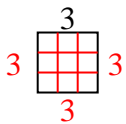
8) Fläche =  $40 \text{ u}^2$



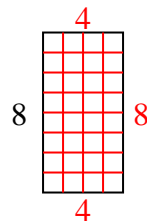
9) Fläche =  $4 \text{ u}^2$



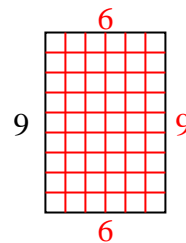
10) Fläche =  $9 \text{ u}^2$



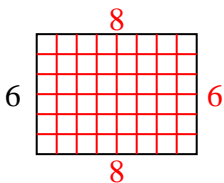
11) Fläche =  $32 \text{ u}^2$



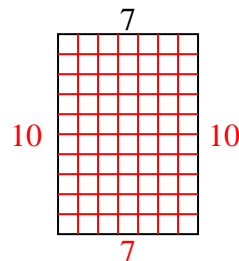
12) Fläche =  $54 \text{ u}^2$



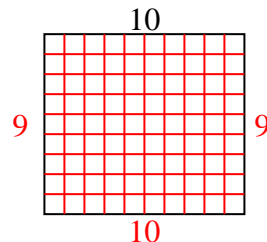
13) Fläche =  $48 \text{ u}^2$

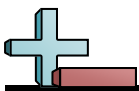


14) Fläche =  $70 \text{ u}^2$




15) Fläche =  $90 \text{ u}^2$

**Antworten**1. 92. 83. 34. 55. 76. 97. 48. 49. 210. 311. 412. 613. 814. 1015. 9

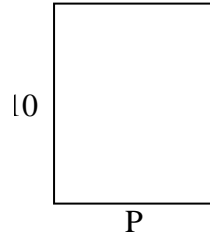


Berechne den Wert von 'P'.

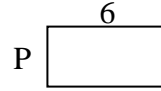
1) Fläche =  $12 \text{ u}^2$



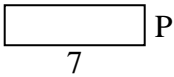
2) Fläche =  $80 \text{ u}^2$



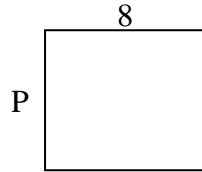
3) Fläche =  $18 \text{ u}^2$



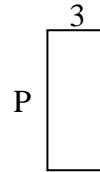
4) Fläche =  $14 \text{ u}^2$



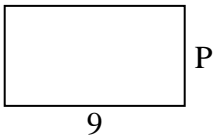
5) Fläche =  $56 \text{ u}^2$



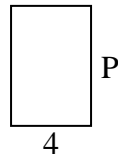
6) Fläche =  $21 \text{ u}^2$



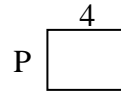
7) Fläche =  $45 \text{ u}^2$



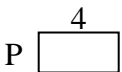
8) Fläche =  $24 \text{ u}^2$



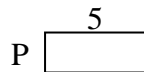
9) Fläche =  $12 \text{ u}^2$



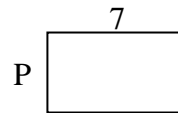
10) Fläche =  $8 \text{ u}^2$



11) Fläche =  $10 \text{ u}^2$



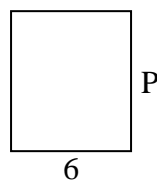
12) Fläche =  $28 \text{ u}^2$



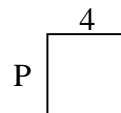
13) Fläche =  $6 \text{ u}^2$



14) Fläche =  $42 \text{ u}^2$



15) Fläche =  $16 \text{ u}^2$

Antworten

1. \_\_\_\_\_

2. \_\_\_\_\_

3. \_\_\_\_\_

4. \_\_\_\_\_

5. \_\_\_\_\_

6. \_\_\_\_\_

7. \_\_\_\_\_

8. \_\_\_\_\_

9. \_\_\_\_\_

10. \_\_\_\_\_

11. \_\_\_\_\_

12. \_\_\_\_\_

13. \_\_\_\_\_

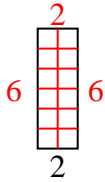
14. \_\_\_\_\_

15. \_\_\_\_\_

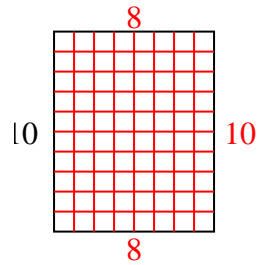


Berechne den Wert von 'P'.

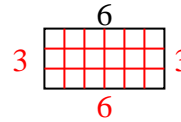
1) Fläche =  $12 \text{ u}^2$



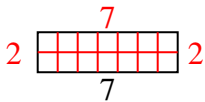
2) Fläche =  $80 \text{ u}^2$



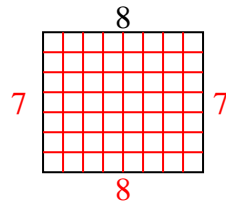
3) Fläche =  $18 \text{ u}^2$



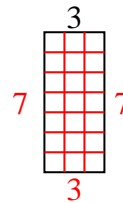
4) Fläche =  $14 \text{ u}^2$



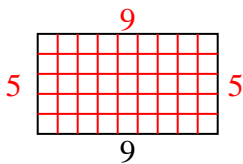
5) Fläche =  $56 \text{ u}^2$



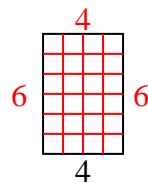
6) Fläche =  $21 \text{ u}^2$



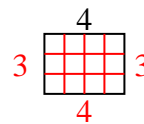
7) Fläche =  $45 \text{ u}^2$



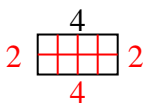
8) Fläche =  $24 \text{ u}^2$



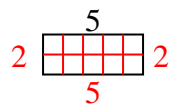
9) Fläche =  $12 \text{ u}^2$



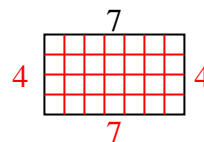
10) Fläche =  $8 \text{ u}^2$



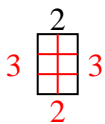
11) Fläche =  $10 \text{ u}^2$



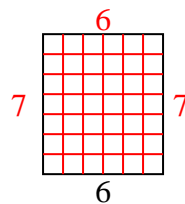
12) Fläche =  $28 \text{ u}^2$



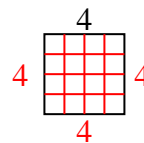
13) Fläche =  $6 \text{ u}^2$



14) Fläche =  $42 \text{ u}^2$



15) Fläche =  $16 \text{ u}^2$

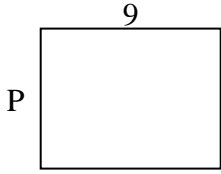
**Antworten**1. 62. 83. 34. 25. 76. 77. 58. 69. 310. 211. 212. 413. 314. 715. 4



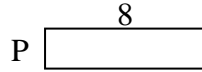


Berechne den Wert von 'P'.

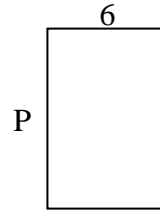
1) Fläche =  $63 \text{ u}^2$



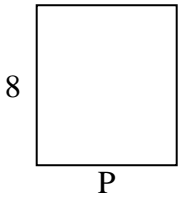
2) Fläche =  $16 \text{ u}^2$



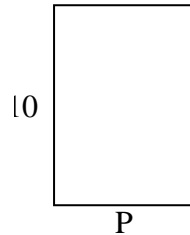
3) Fläche =  $54 \text{ u}^2$



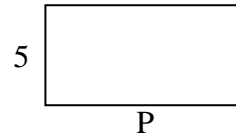
4) Fläche =  $56 \text{ u}^2$




5) Fläche =  $70 \text{ u}^2$



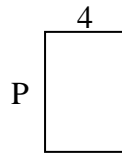
6) Fläche =  $50 \text{ u}^2$



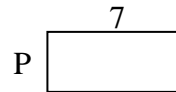
7) Fläche =  $32 \text{ u}^2$



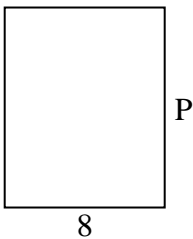
8) Fläche =  $24 \text{ u}^2$



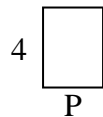
9) Fläche =  $21 \text{ u}^2$



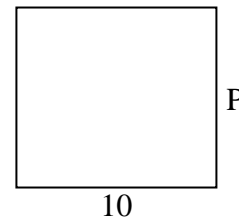
10) Fläche =  $80 \text{ u}^2$




11) Fläche =  $12 \text{ u}^2$



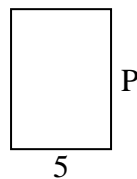
12) Fläche =  $90 \text{ u}^2$




13) Fläche =  $30 \text{ u}^2$



14) Fläche =  $35 \text{ u}^2$



15) Fläche =  $27 \text{ u}^2$

Antworten

1. \_\_\_\_\_

2. \_\_\_\_\_

3. \_\_\_\_\_

4. \_\_\_\_\_

5. \_\_\_\_\_

6. \_\_\_\_\_

7. \_\_\_\_\_

8. \_\_\_\_\_

9. \_\_\_\_\_

10. \_\_\_\_\_

11. \_\_\_\_\_

12. \_\_\_\_\_

13. \_\_\_\_\_

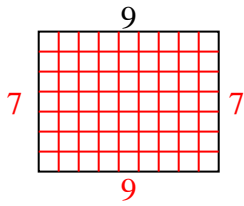
14. \_\_\_\_\_

15. \_\_\_\_\_

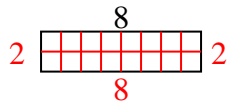


Berechne den Wert von 'P'.

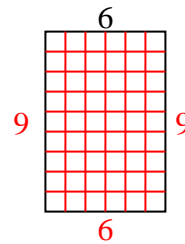
1) Fläche =  $63 \text{ u}^2$



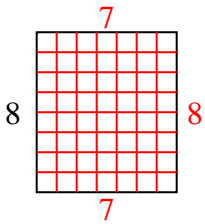
2) Fläche =  $16 \text{ u}^2$



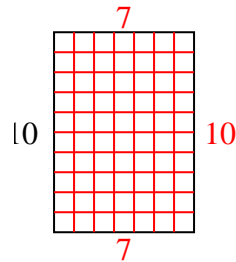
3) Fläche =  $54 \text{ u}^2$



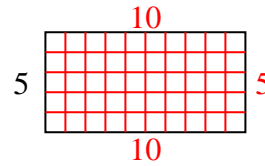
4) Fläche =  $56 \text{ u}^2$



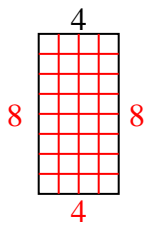
5) Fläche =  $70 \text{ u}^2$



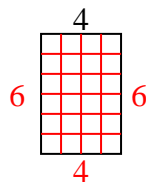
6) Fläche =  $50 \text{ u}^2$



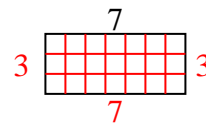
7) Fläche =  $32 \text{ u}^2$



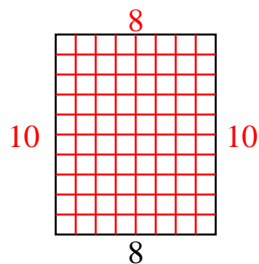
8) Fläche =  $24 \text{ u}^2$



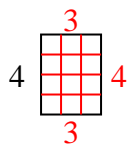
9) Fläche =  $21 \text{ u}^2$



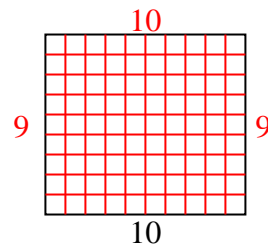
10) Fläche =  $80 \text{ u}^2$



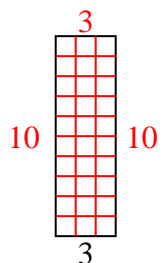
11) Fläche =  $12 \text{ u}^2$



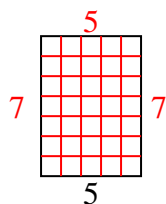
12) Fläche =  $90 \text{ u}^2$



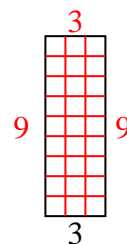
13) Fläche =  $30 \text{ u}^2$



14) Fläche =  $35 \text{ u}^2$



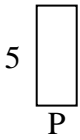
15) Fläche =  $27 \text{ u}^2$

**Antworten**1. 72. 23. 94. 75. 76. 107. 88. 69. 310. 1011. 312. 913. 1014. 715. 9

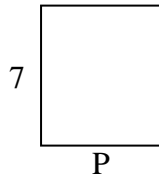


Berechne den Wert von 'P'.

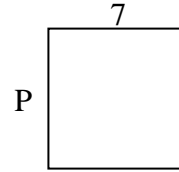
1) Fläche =  $10 \text{ u}^2$



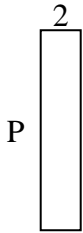
2) Fläche =  $42 \text{ u}^2$



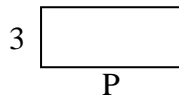
3) Fläche =  $49 \text{ u}^2$



4) Fläche =  $20 \text{ u}^2$



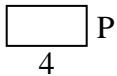
5) Fläche =  $21 \text{ u}^2$



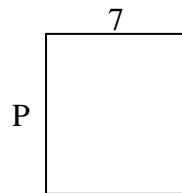
6) Fläche =  $4 \text{ u}^2$



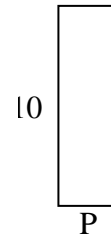
7) Fläche =  $8 \text{ u}^2$




8) Fläche =  $56 \text{ u}^2$



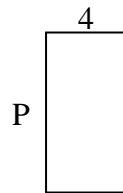
9) Fläche =  $30 \text{ u}^2$



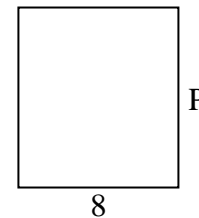
10) Fläche =  $18 \text{ u}^2$



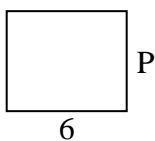
11) Fläche =  $32 \text{ u}^2$



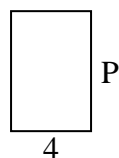
12) Fläche =  $72 \text{ u}^2$



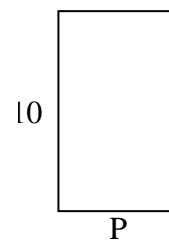
13) Fläche =  $30 \text{ u}^2$



14) Fläche =  $24 \text{ u}^2$



15) Fläche =  $60 \text{ u}^2$

Antworten

1. \_\_\_\_\_

2. \_\_\_\_\_

3. \_\_\_\_\_

4. \_\_\_\_\_

5. \_\_\_\_\_

6. \_\_\_\_\_

7. \_\_\_\_\_

8. \_\_\_\_\_

9. \_\_\_\_\_

10. \_\_\_\_\_

11. \_\_\_\_\_

12. \_\_\_\_\_

13. \_\_\_\_\_

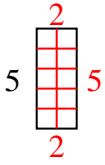
14. \_\_\_\_\_

15. \_\_\_\_\_

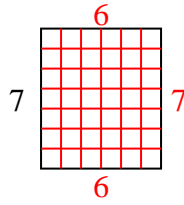


Berechne den Wert von 'P'.

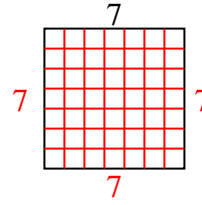
1) Fläche =  $10 \text{ u}^2$



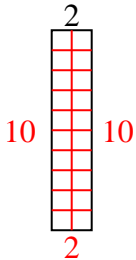
2) Fläche =  $42 \text{ u}^2$



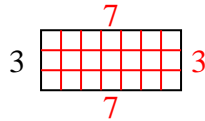
3) Fläche =  $49 \text{ u}^2$



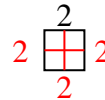
4) Fläche =  $20 \text{ u}^2$



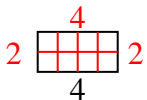
5) Fläche =  $21 \text{ u}^2$



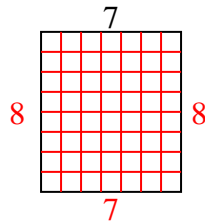
6) Fläche =  $4 \text{ u}^2$



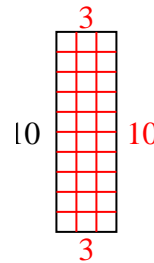
7) Fläche =  $8 \text{ u}^2$



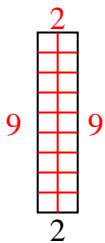
8) Fläche =  $56 \text{ u}^2$



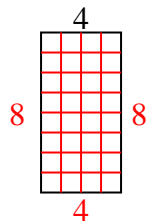
9) Fläche =  $30 \text{ u}^2$



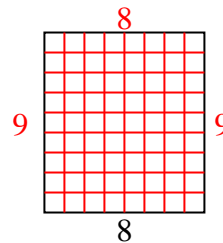
10) Fläche =  $18 \text{ u}^2$



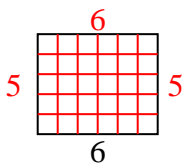
11) Fläche =  $32 \text{ u}^2$



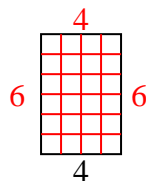
12) Fläche =  $72 \text{ u}^2$



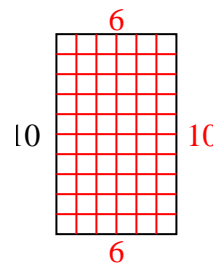
13) Fläche =  $30 \text{ u}^2$



14) Fläche =  $24 \text{ u}^2$



15) Fläche =  $60 \text{ u}^2$

Antworten1. 22. 63. 74. 105. 76. 27. 28. 89. 310. 911. 812. 913. 514. 615. 6