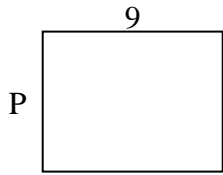





Berechne den Wert von 'P'.

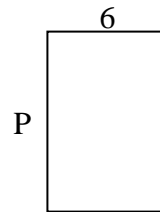
1) Fläche = 63 u^2



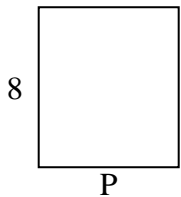
2) Fläche = 16 u^2



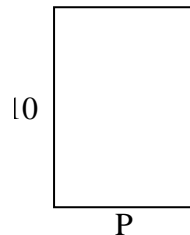
3) Fläche = 54 u^2



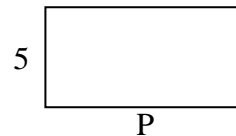
4) Fläche = 56 u^2



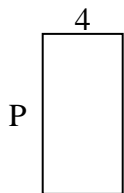
5) Fläche = 70 u^2



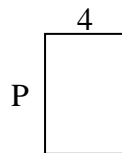
6) Fläche = 50 u^2



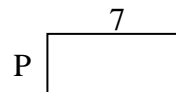
7) Fläche = 32 u^2



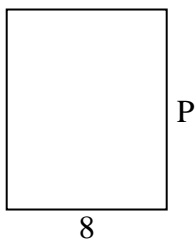
8) Fläche = 24 u^2



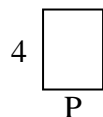
9) Fläche = 21 u^2



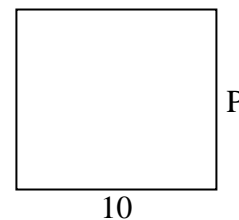
10) Fläche = 80 u^2




11) Fläche = 12 u^2



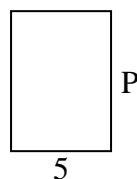
12) Fläche = 90 u^2




13) Fläche = 30 u^2



14) Fläche = 35 u^2



15) Fläche = 27 u^2

Antworten

1. _____

2. _____

3. _____

4. _____

5. _____

6. _____

7. _____

8. _____

9. _____

10. _____

11. _____

12. _____

13. _____

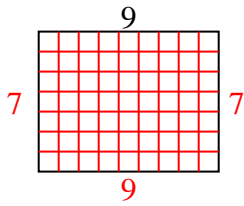
14. _____

15. _____

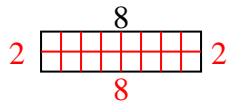


Berechne den Wert von 'P'.

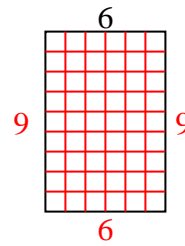
1) Fläche = 63 u^2



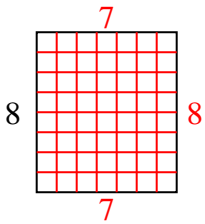
2) Fläche = 16 u^2



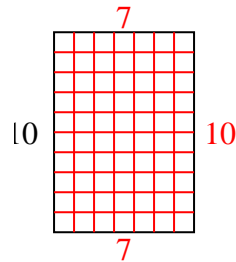
3) Fläche = 54 u^2



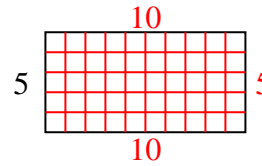
4) Fläche = 56 u^2



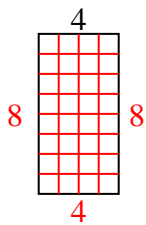
5) Fläche = 70 u^2



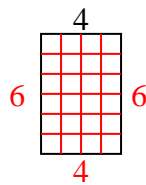
6) Fläche = 50 u^2



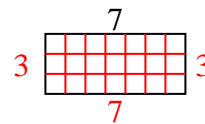
7) Fläche = 32 u^2



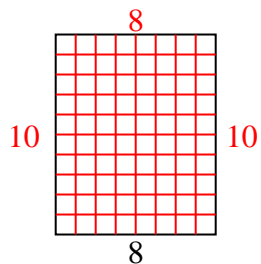
8) Fläche = 24 u^2



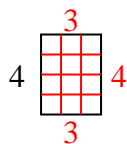
9) Fläche = 21 u^2



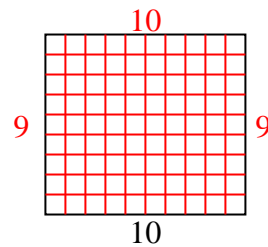
10) Fläche = 80 u^2



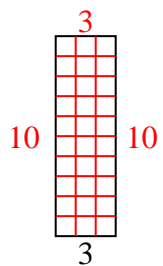
11) Fläche = 12 u^2



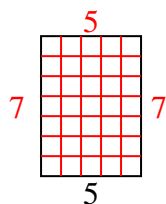
12) Fläche = 90 u^2



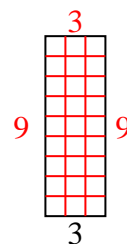
13) Fläche = 30 u^2



14) Fläche = 35 u^2



15) Fläche = 27 u^2

Antworten1. 72. 23. 94. 75. 76. 107. 88. 69. 310. 1011. 312. 913. 1014. 715. 9