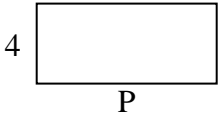





Berechne den Wert von 'P'.

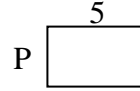
1) Fläche = 36 u^2



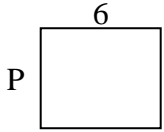
2) Fläche = 24 u^2



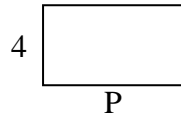
3) Fläche = 15 u^2




4) Fläche = 30 u^2



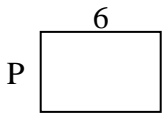
5) Fläche = 28 u^2



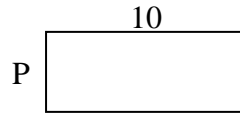
6) Fläche = 45 u^2



7) Fläche = 24 u^2



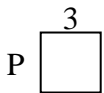
8) Fläche = 40 u^2



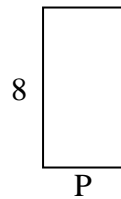
9) Fläche = 4 u^2



10) Fläche = 9 u^2



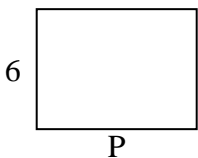
11) Fläche = 32 u^2



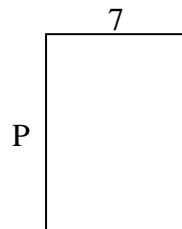
12) Fläche = 54 u^2



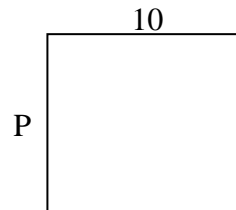
13) Fläche = 48 u^2



14) Fläche = 70 u^2



15) Fläche = 90 u^2

Antworten

1. _____

2. _____

3. _____

4. _____

5. _____

6. _____

7. _____

8. _____

9. _____

10. _____

11. _____

12. _____

13. _____

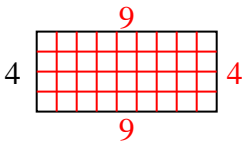
14. _____

15. _____

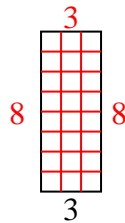


Berechne den Wert von 'P'.

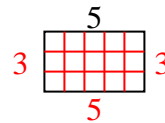
1) Fläche = 36 u^2



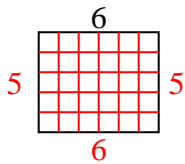
2) Fläche = 24 u^2



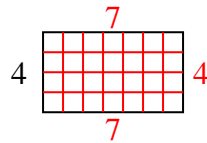
3) Fläche = 15 u^2



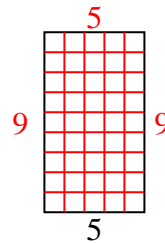
4) Fläche = 30 u^2



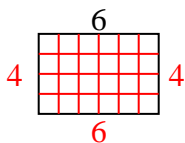
5) Fläche = 28 u^2



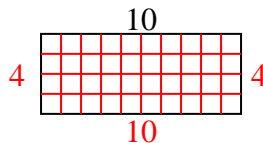
6) Fläche = 45 u^2



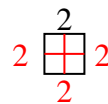
7) Fläche = 24 u^2



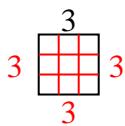
8) Fläche = 40 u^2



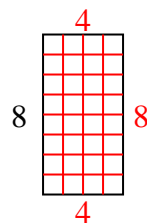
9) Fläche = 4 u^2



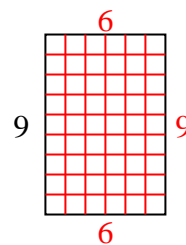
10) Fläche = 9 u^2



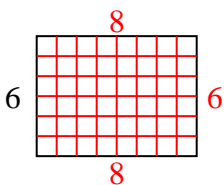
11) Fläche = 32 u^2



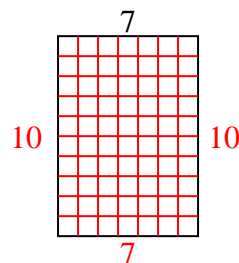
12) Fläche = 54 u^2



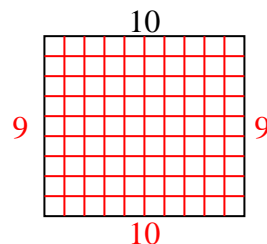
13) Fläche = 48 u^2



14) Fläche = 70 u^2



15) Fläche = 90 u^2

**Antworten**1. 92. 83. 34. 55. 76. 97. 48. 49. 210. 311. 412. 613. 814. 1015. 9