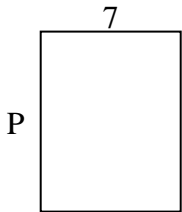


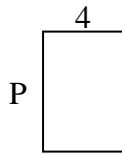


Berechne den Wert von 'P'.

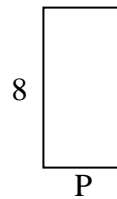
1) Fläche =  $63 \text{ u}^2$



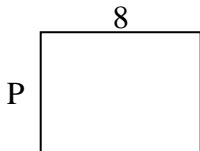
2) Fläche =  $24 \text{ u}^2$



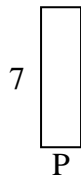
3) Fläche =  $32 \text{ u}^2$



4) Fläche =  $48 \text{ u}^2$




5) Fläche =  $14 \text{ u}^2$



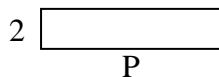
6) Fläche =  $4 \text{ u}^2$



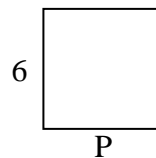
7) Fläche =  $60 \text{ u}^2$



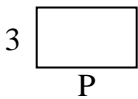
8) Fläche =  $18 \text{ u}^2$




9) Fläche =  $36 \text{ u}^2$



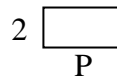
10) Fläche =  $15 \text{ u}^2$



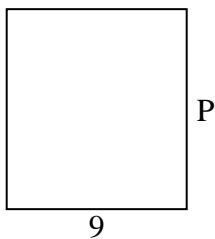
11) Fläche =  $45 \text{ u}^2$



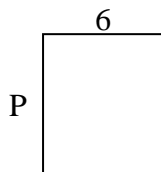
12) Fläche =  $8 \text{ u}^2$



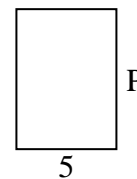
13) Fläche =  $90 \text{ u}^2$



14) Fläche =  $42 \text{ u}^2$



15) Fläche =  $35 \text{ u}^2$

Antworten

1. \_\_\_\_\_

2. \_\_\_\_\_

3. \_\_\_\_\_

4. \_\_\_\_\_

5. \_\_\_\_\_

6. \_\_\_\_\_

7. \_\_\_\_\_

8. \_\_\_\_\_

9. \_\_\_\_\_

10. \_\_\_\_\_

11. \_\_\_\_\_

12. \_\_\_\_\_

13. \_\_\_\_\_

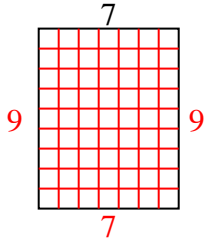
14. \_\_\_\_\_

15. \_\_\_\_\_

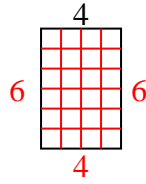


Berechne den Wert von 'P'.

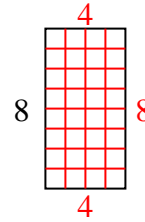
1) Fläche =  $63 \text{ u}^2$



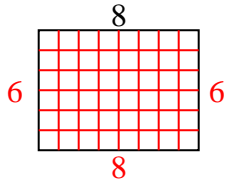
2) Fläche =  $24 \text{ u}^2$



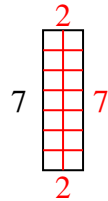
3) Fläche =  $32 \text{ u}^2$



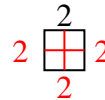
4) Fläche =  $48 \text{ u}^2$



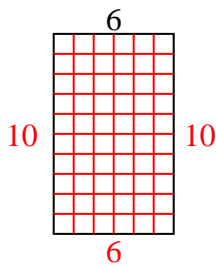
5) Fläche =  $14 \text{ u}^2$



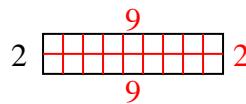
6) Fläche =  $4 \text{ u}^2$



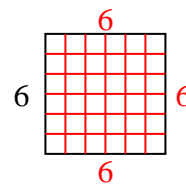
7) Fläche =  $60 \text{ u}^2$



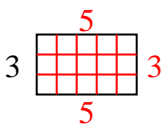
8) Fläche =  $18 \text{ u}^2$



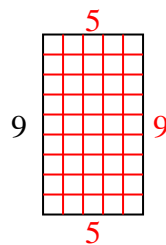
9) Fläche =  $36 \text{ u}^2$



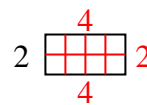
10) Fläche =  $15 \text{ u}^2$



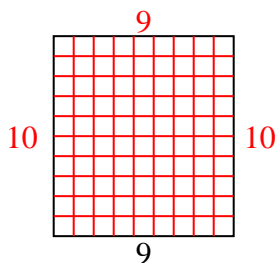
11) Fläche =  $45 \text{ u}^2$



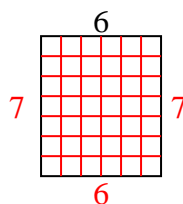
12) Fläche =  $8 \text{ u}^2$



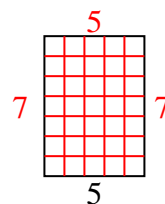
13) Fläche =  $90 \text{ u}^2$



14) Fläche =  $42 \text{ u}^2$



15) Fläche =  $35 \text{ u}^2$

**Antworten**1. 92. 63. 44. 65. 26. 27. 108. 99. 610. 511. 512. 413. 1014. 715. 7