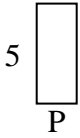


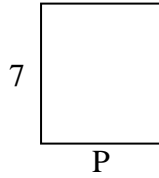


Berechne den Wert von 'P'.

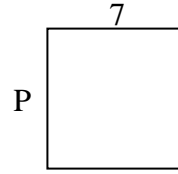
1) Fläche =  $10 \text{ u}^2$



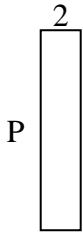
2) Fläche =  $42 \text{ u}^2$



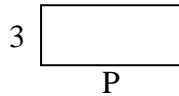
3) Fläche =  $49 \text{ u}^2$



4) Fläche =  $20 \text{ u}^2$



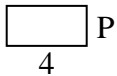
5) Fläche =  $21 \text{ u}^2$



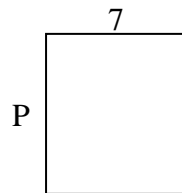
6) Fläche =  $4 \text{ u}^2$



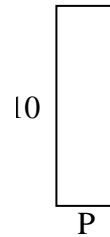
7) Fläche =  $8 \text{ u}^2$




8) Fläche =  $56 \text{ u}^2$



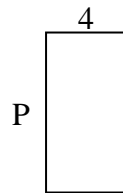
9) Fläche =  $30 \text{ u}^2$



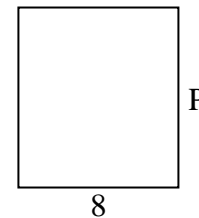
10) Fläche =  $18 \text{ u}^2$



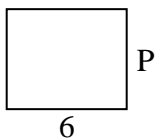
11) Fläche =  $32 \text{ u}^2$



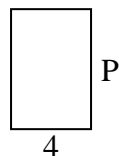
12) Fläche =  $72 \text{ u}^2$



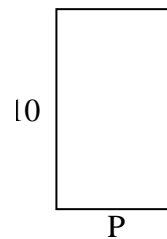
13) Fläche =  $30 \text{ u}^2$



14) Fläche =  $24 \text{ u}^2$



15) Fläche =  $60 \text{ u}^2$

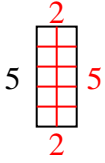
Antworten

1. \_\_\_\_\_
2. \_\_\_\_\_
3. \_\_\_\_\_
4. \_\_\_\_\_
5. \_\_\_\_\_
6. \_\_\_\_\_
7. \_\_\_\_\_
8. \_\_\_\_\_
9. \_\_\_\_\_
10. \_\_\_\_\_
11. \_\_\_\_\_
12. \_\_\_\_\_
13. \_\_\_\_\_
14. \_\_\_\_\_
15. \_\_\_\_\_

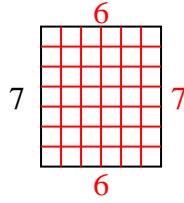


Berechne den Wert von 'P'.

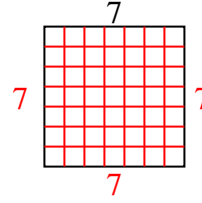
1) Fläche =  $10 \text{ u}^2$



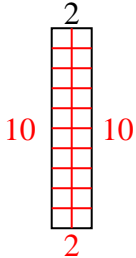
2) Fläche =  $42 \text{ u}^2$



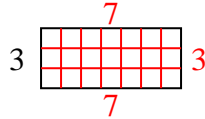
3) Fläche =  $49 \text{ u}^2$



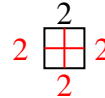
4) Fläche =  $20 \text{ u}^2$



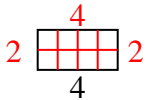
5) Fläche =  $21 \text{ u}^2$



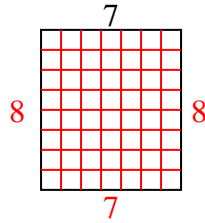
6) Fläche =  $4 \text{ u}^2$



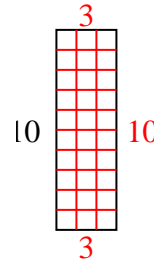
7) Fläche =  $8 \text{ u}^2$



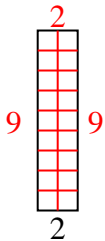
8) Fläche =  $56 \text{ u}^2$



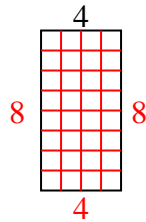
9) Fläche =  $30 \text{ u}^2$



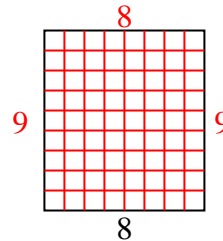
10) Fläche =  $18 \text{ u}^2$



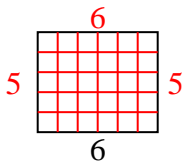
11) Fläche =  $32 \text{ u}^2$



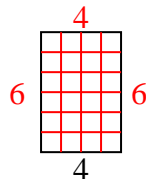
12) Fläche =  $72 \text{ u}^2$



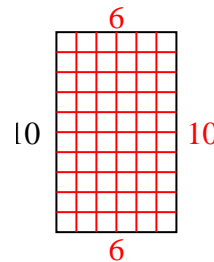
13) Fläche =  $30 \text{ u}^2$



14) Fläche =  $24 \text{ u}^2$



15) Fläche =  $60 \text{ u}^2$

Antworten1. 22. 63. 74. 105. 76. 27. 28. 89. 310. 911. 812. 913. 514. 615. 6