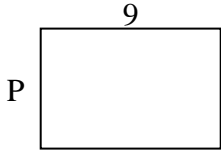


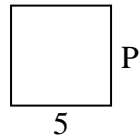


Berechne den Wert von 'P'.

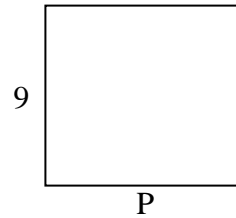
1) Fläche =  $54 \text{ u}^2$



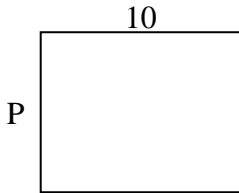
2) Fläche =  $25 \text{ u}^2$



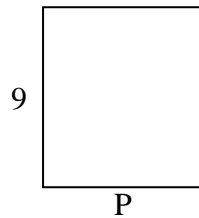
3) Fläche =  $90 \text{ u}^2$



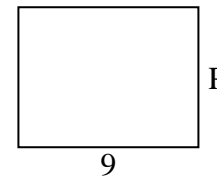
4) Fläche =  $80 \text{ u}^2$



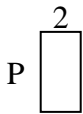
5) Fläche =  $72 \text{ u}^2$



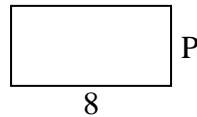
6) Fläche =  $63 \text{ u}^2$



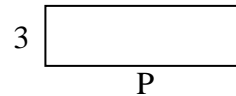
7) Fläche =  $8 \text{ u}^2$



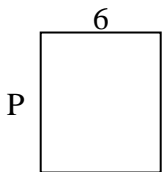
8) Fläche =  $32 \text{ u}^2$



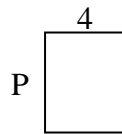
9) Fläche =  $30 \text{ u}^2$



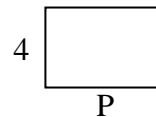
10) Fläche =  $42 \text{ u}^2$



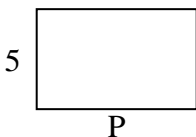
11) Fläche =  $20 \text{ u}^2$



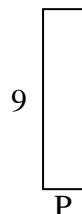
12) Fläche =  $24 \text{ u}^2$



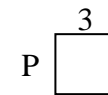
13) Fläche =  $40 \text{ u}^2$



14) Fläche =  $18 \text{ u}^2$



15) Fläche =  $9 \text{ u}^2$

Antworten

1. \_\_\_\_\_

2. \_\_\_\_\_

3. \_\_\_\_\_

4. \_\_\_\_\_

5. \_\_\_\_\_

6. \_\_\_\_\_

7. \_\_\_\_\_

8. \_\_\_\_\_

9. \_\_\_\_\_

10. \_\_\_\_\_

11. \_\_\_\_\_

12. \_\_\_\_\_

13. \_\_\_\_\_

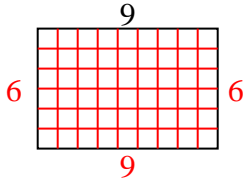
14. \_\_\_\_\_

15. \_\_\_\_\_

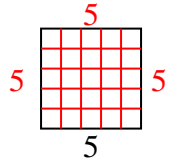


Berechne den Wert von 'P'.

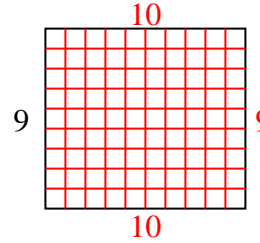
1) Fläche =  $54 \text{ u}^2$



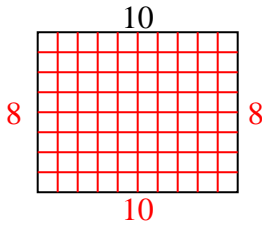
2) Fläche =  $25 \text{ u}^2$



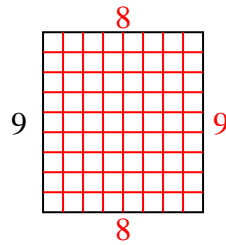
3) Fläche =  $90 \text{ u}^2$



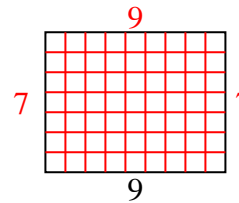
4) Fläche =  $80 \text{ u}^2$



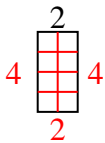
5) Fläche =  $72 \text{ u}^2$



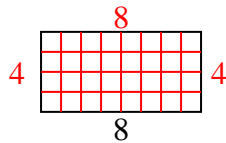
6) Fläche =  $63 \text{ u}^2$



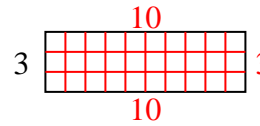
7) Fläche =  $8 \text{ u}^2$



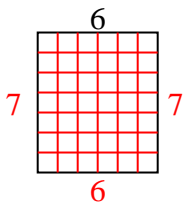
8) Fläche =  $32 \text{ u}^2$



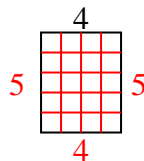
9) Fläche =  $30 \text{ u}^2$



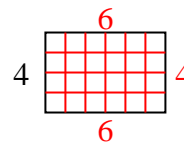
10) Fläche =  $42 \text{ u}^2$



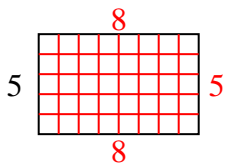
11) Fläche =  $20 \text{ u}^2$



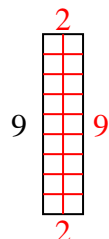
12) Fläche =  $24 \text{ u}^2$



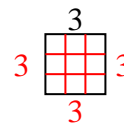
13) Fläche =  $40 \text{ u}^2$



14) Fläche =  $18 \text{ u}^2$



15) Fläche =  $9 \text{ u}^2$

Antworten1. 62. 53. 104. 85. 86. 77. 48. 49. 1010. 711. 512. 613. 814. 215. 3