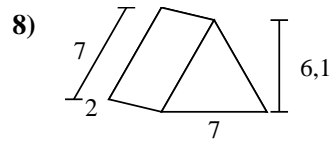
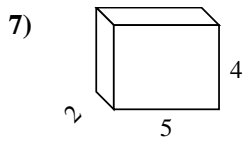
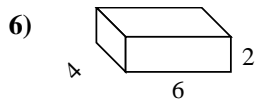
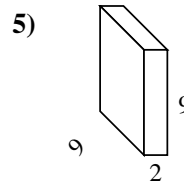
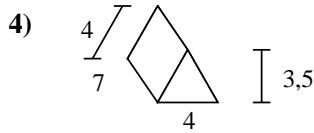
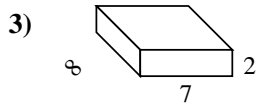
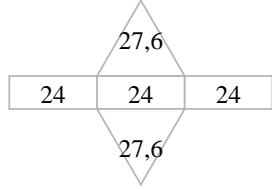
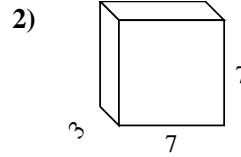
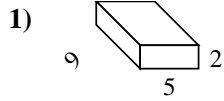
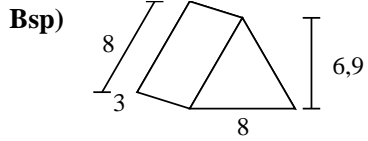




Berechne die Oberfläche jeder Figur.



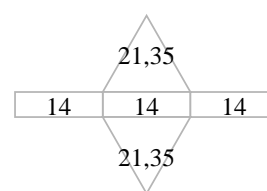
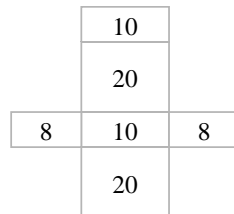
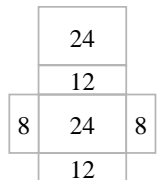
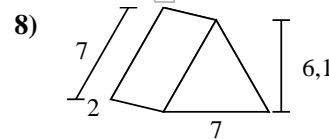
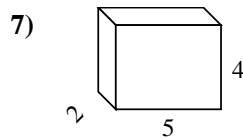
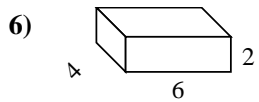
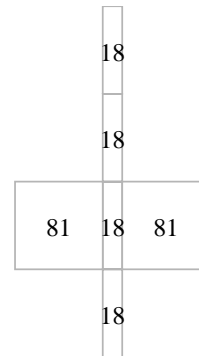
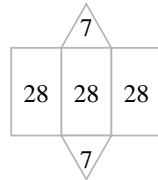
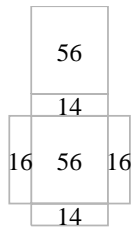
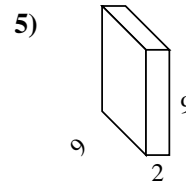
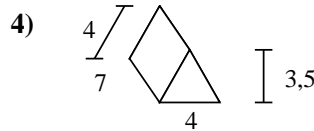
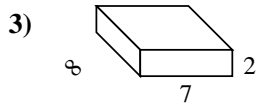
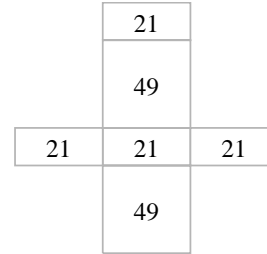
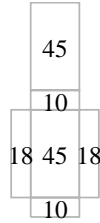
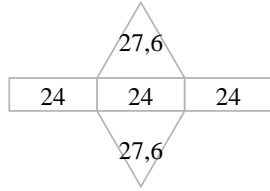
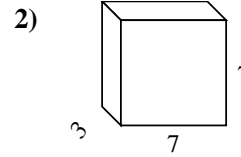
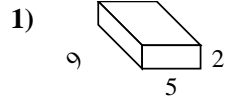
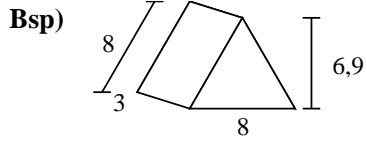
**Antworten**

Bsp. 127,2 cm<sup>2</sup>

1. \_\_\_\_\_
2. \_\_\_\_\_
3. \_\_\_\_\_
4. \_\_\_\_\_
5. \_\_\_\_\_
6. \_\_\_\_\_
7. \_\_\_\_\_
8. \_\_\_\_\_



Berechne die Oberfläche jeder Figur.



**Antworten**

Bsp. 127,2 cm<sup>2</sup>

1. 146 cm<sup>2</sup>

2. 182 cm<sup>2</sup>

3. 172 cm<sup>2</sup>

4. 98 cm<sup>2</sup>

5. 234 cm<sup>2</sup>

6. 88 cm<sup>2</sup>

7. 76 cm<sup>2</sup>

8. 84,7 cm<sup>2</sup>