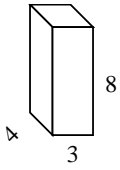


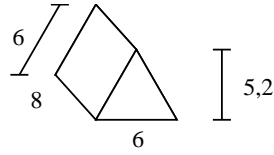


Berechne die Oberfläche jeder Figur.

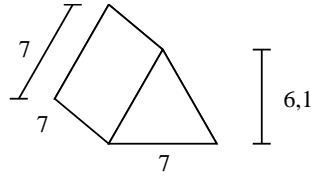
Ex)



1)



2)



Antworten

Bsp. **136 cm²**

1. _____

2. _____

3. _____

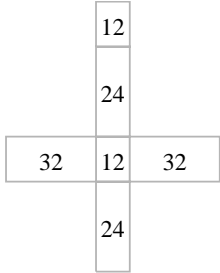
4. _____

5. _____

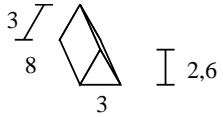
6. _____

7. _____

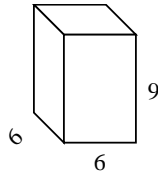
8. _____



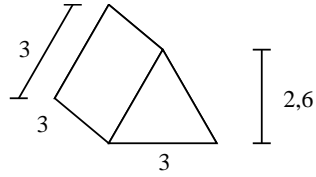
3)



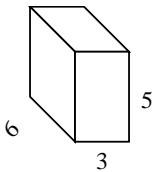
4)



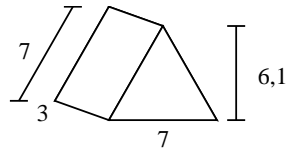
5)



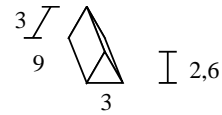
6)



7)



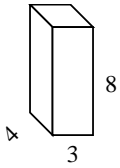
8)



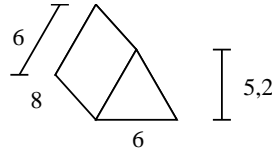


Berechne die Oberfläche jeder Figur.

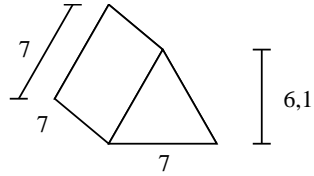
Ex)



1)



2)



Antworten

Bsp. 136 cm²

1. 175,2 cm²

2. 189,7 cm²

3. 79,8 cm²

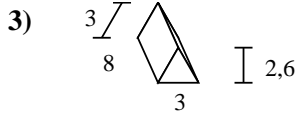
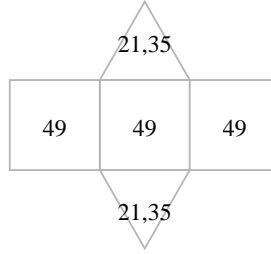
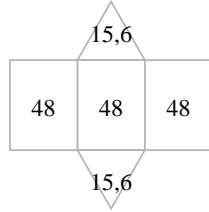
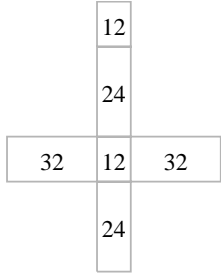
4. 288 cm²

5. 34,8 cm²

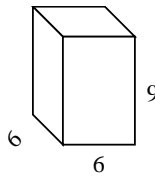
6. 126 cm²

7. 105,7 cm²

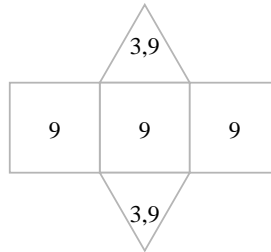
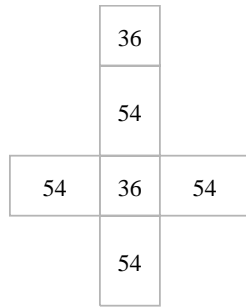
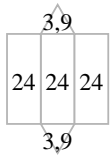
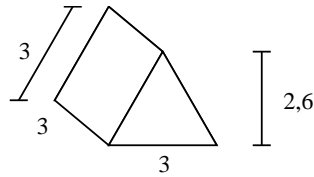
8. 88,8 cm²



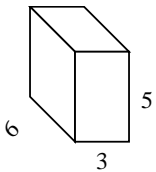
4)



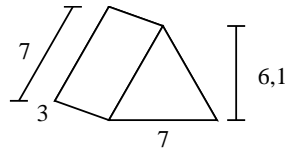
5)



6)



7)



8)

