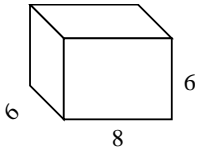


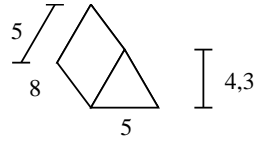


Berechne die Oberfläche jeder Figur.

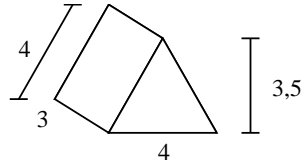
Ex)



1)



2)



Antworten

Bsp. 264 cm²

1. _____

2. _____

3. _____

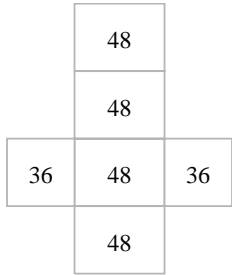
4. _____

5. _____

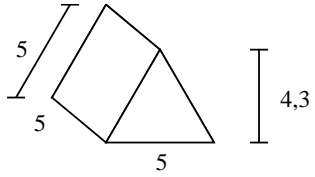
6. _____

7. _____

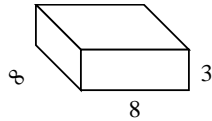
8. _____



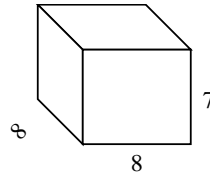
3)



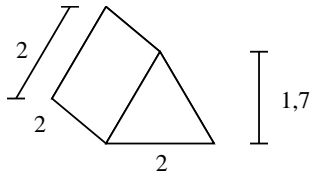
4)



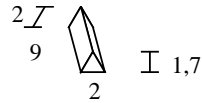
5)



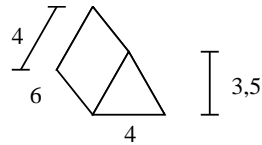
6)



7)

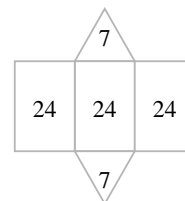

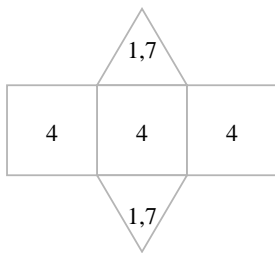
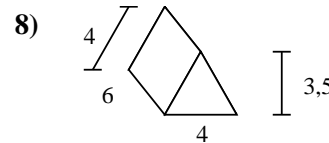
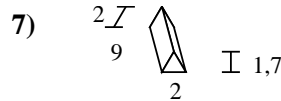
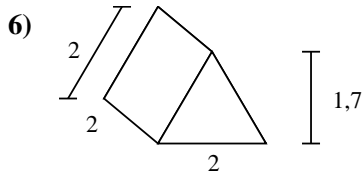
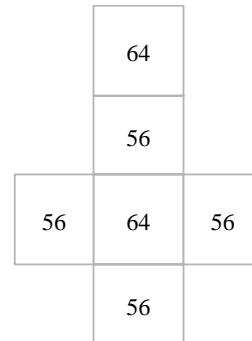
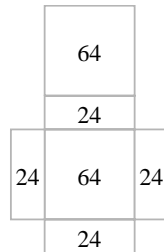
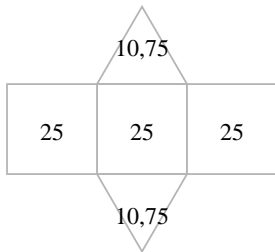
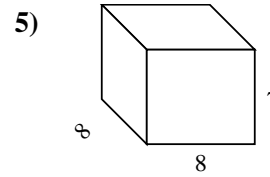
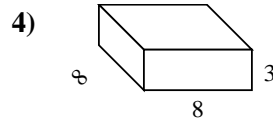
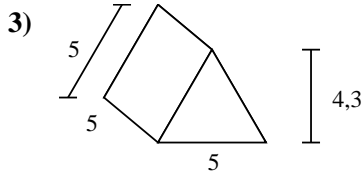
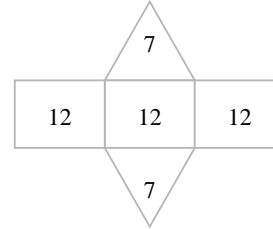
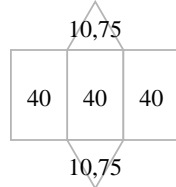
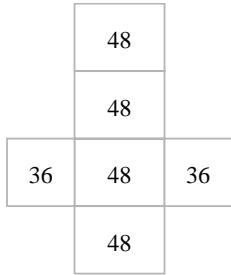
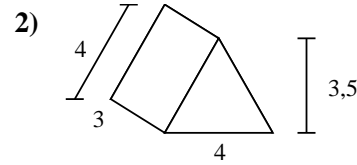
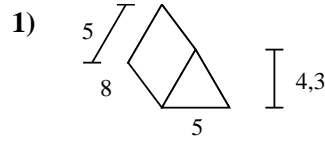
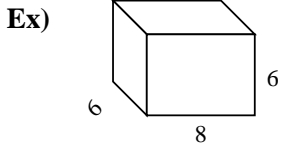


8)





Berechne die Oberfläche jeder Figur.



Antworten

Bsp. 264 cm²

1. 141,5 cm²

2. 50 cm²

3. 96,5 cm²

4. 224 cm²

5. 352 cm²

6. 15,4 cm²

7. 57,4 cm²

8. 86 cm²