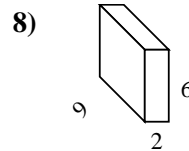
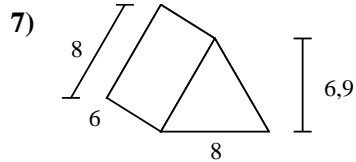
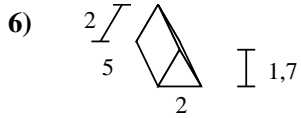
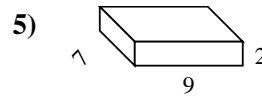
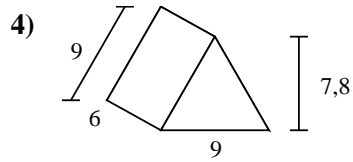
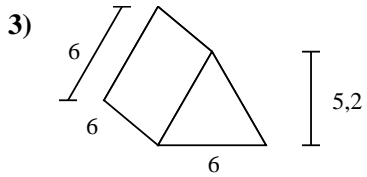
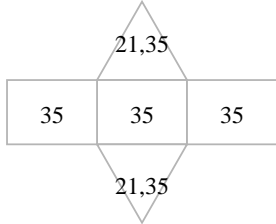
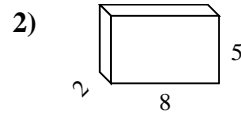
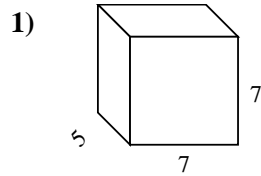
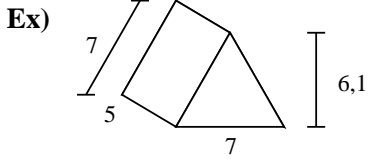




Berechne die Oberfläche jeder Figur.



**Antworten**

Bsp. 147,7 cm<sup>2</sup>

1. \_\_\_\_\_

2. \_\_\_\_\_

3. \_\_\_\_\_

4. \_\_\_\_\_

5. \_\_\_\_\_

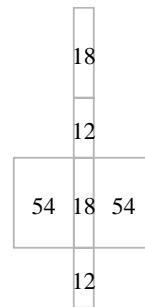
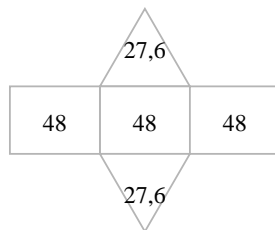
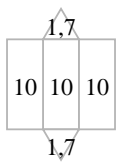
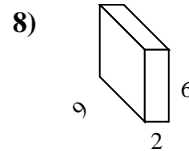
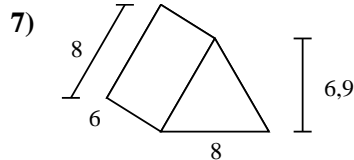
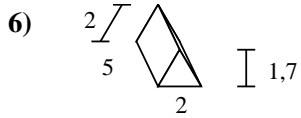
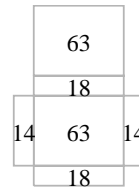
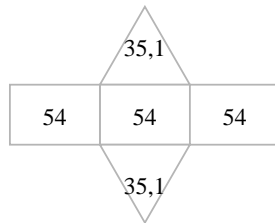
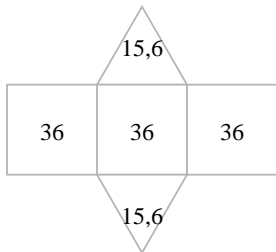
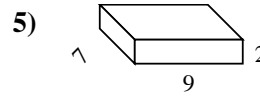
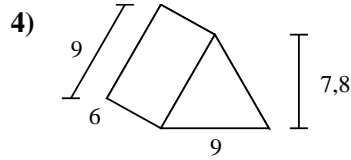
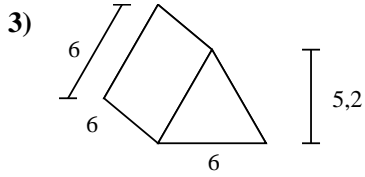
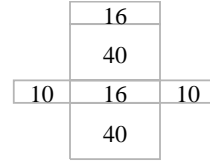
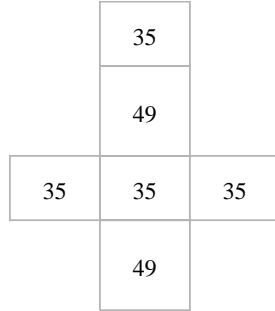
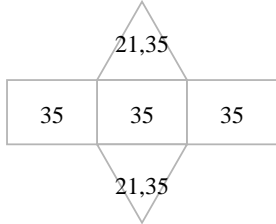
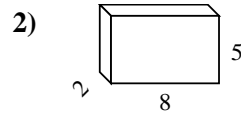
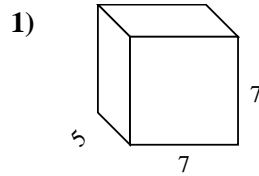
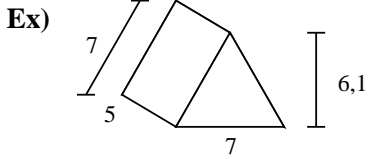
6. \_\_\_\_\_

7. \_\_\_\_\_

8. \_\_\_\_\_



Berechne die Oberfläche jeder Figur.



**Antworten**

Bsp. 147,7 cm<sup>2</sup>

1. 238 cm<sup>2</sup>

2. 132 cm<sup>2</sup>

3. 139,2 cm<sup>2</sup>

4. 232,2 cm<sup>2</sup>

5. 190 cm<sup>2</sup>

6. 33,4 cm<sup>2</sup>

7. 199,2 cm<sup>2</sup>

8. 168 cm<sup>2</sup>