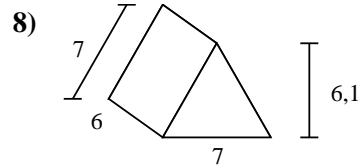
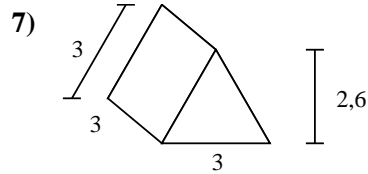
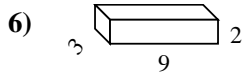
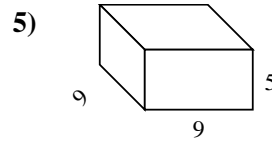
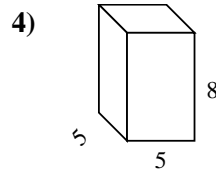
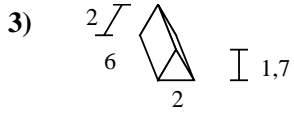
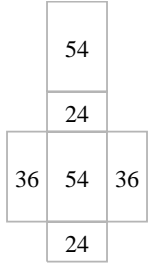
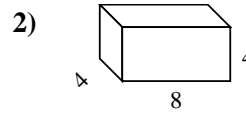
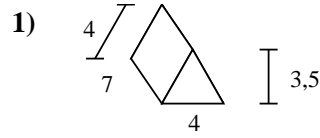
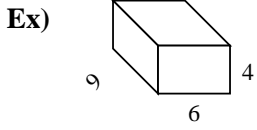




Berechne die Oberfläche jeder Figur.



Antworten

Bsp. **228 cm²**

1. _____

2. _____

3. _____

4. _____

5. _____

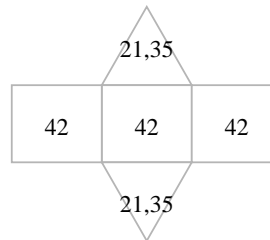
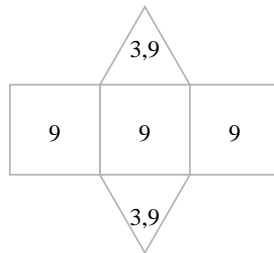
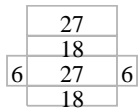
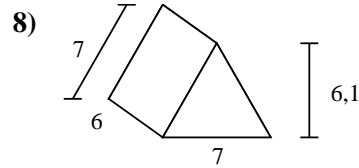
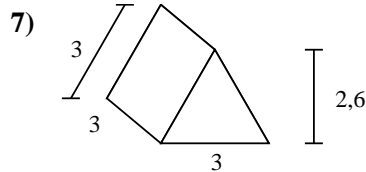
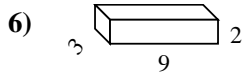
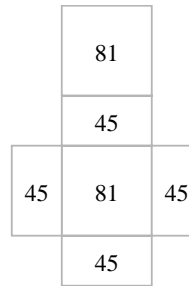
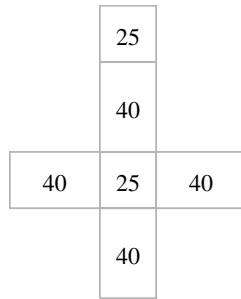

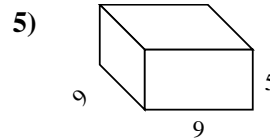
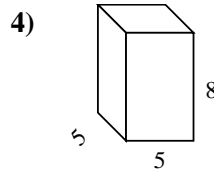
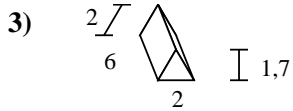
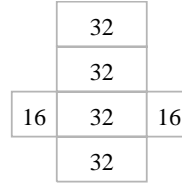
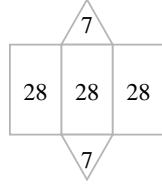
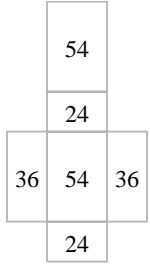
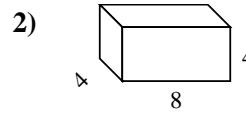
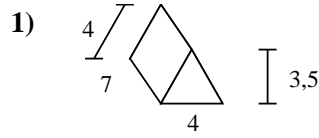
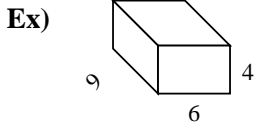
6. _____

7. _____

8. _____



Berechne die Oberfläche jeder Figur.



Antworten

Bsp. 228 cm²

1. 98 cm²

2. 160 cm²

3. 39,4 cm²

4. 210 cm²

5. 342 cm²

6. 102 cm²

7. 34,8 cm²

8. 168,7 cm²