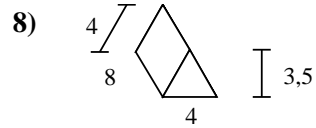
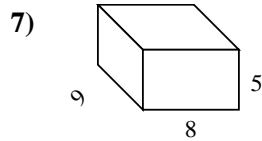
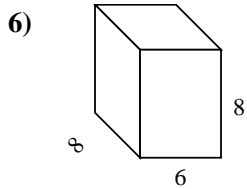
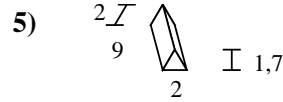
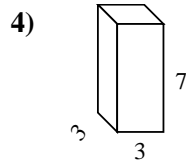
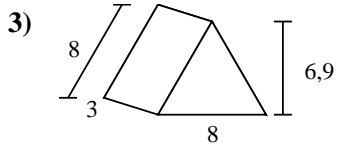
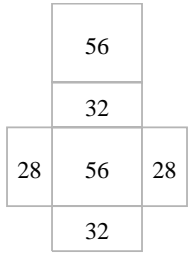
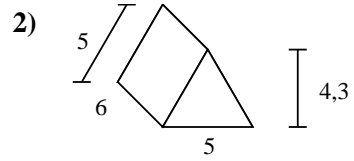
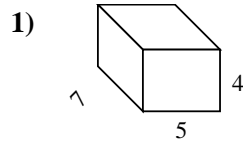
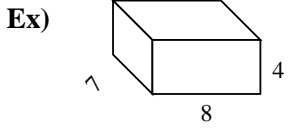




Berechne die Oberfläche jeder Figur.



**Antworten**

Bsp. 232 cm<sup>2</sup>

1. \_\_\_\_\_

2. \_\_\_\_\_

3. \_\_\_\_\_

4. \_\_\_\_\_

5. \_\_\_\_\_

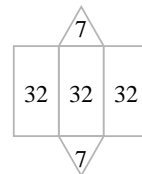
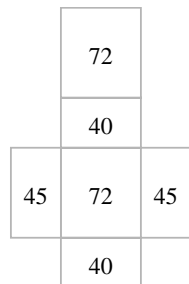
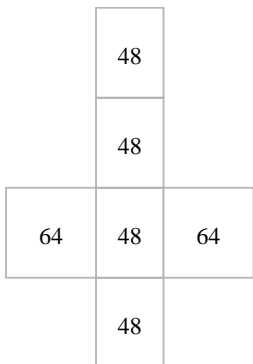
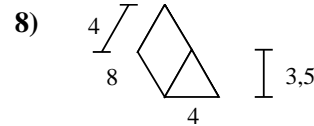
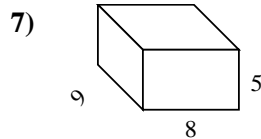
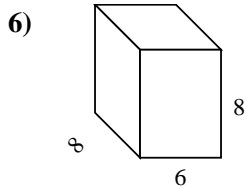

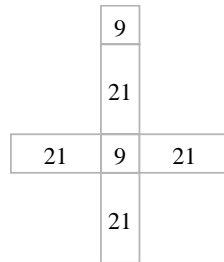
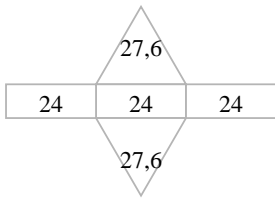
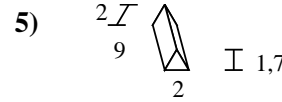
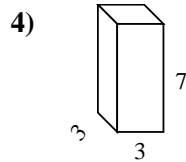
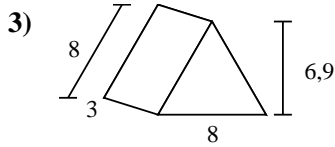
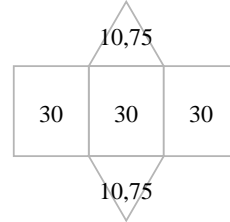
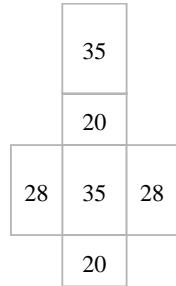
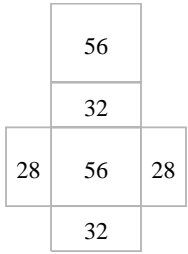
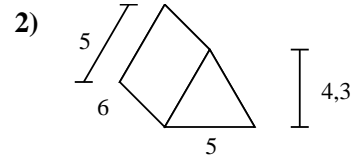
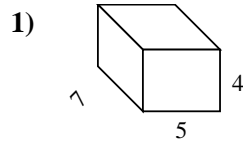
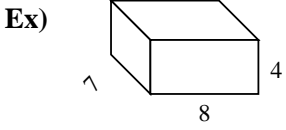
6. \_\_\_\_\_

7. \_\_\_\_\_

8. \_\_\_\_\_



Berechne die Oberfläche jeder Figur.



**Antworten**

Bsp. 232 cm<sup>2</sup>

1. 166 cm<sup>2</sup>

2. 111,5 cm<sup>2</sup>

3. 127,2 cm<sup>2</sup>

4. 102 cm<sup>2</sup>

5. 57,4 cm<sup>2</sup>

6. 320 cm<sup>2</sup>

7. 314 cm<sup>2</sup>

8. 110 cm<sup>2</sup>