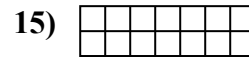
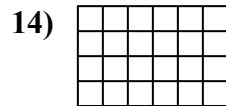
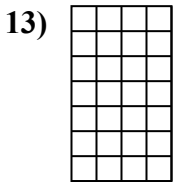
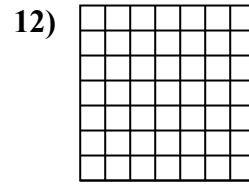
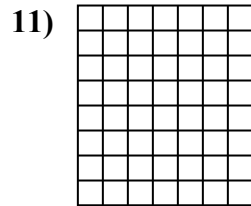
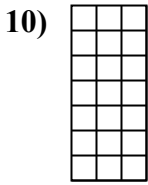
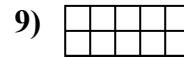
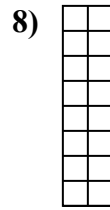
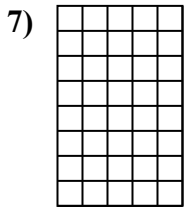
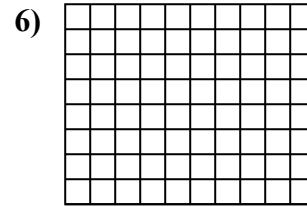
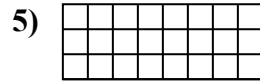
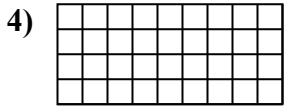
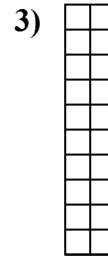

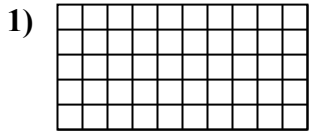




Berechne die Fläche. Jeder Block entspricht 1 Einheit (u^2).



Antworten

1. _____

2. _____

3. _____

4. _____

5. _____

6. _____

7. _____

8. _____

9. _____

10. _____

11. _____

12. _____

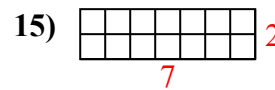
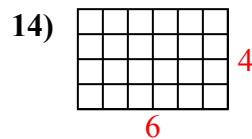
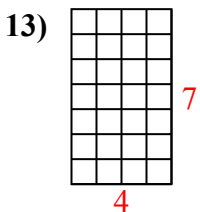
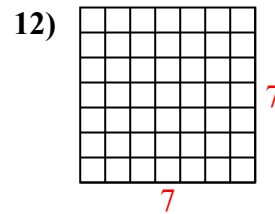
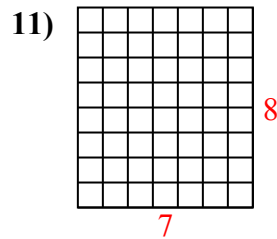
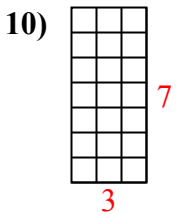
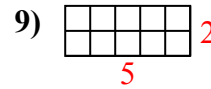
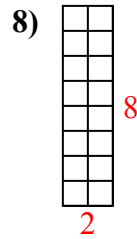
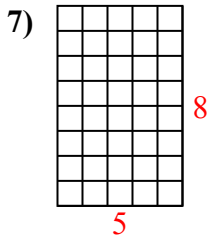
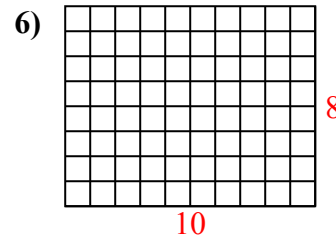
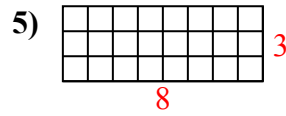
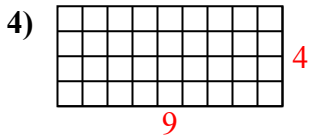
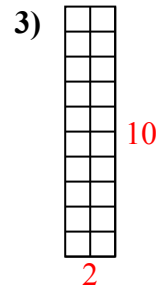
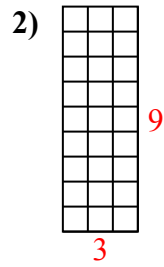
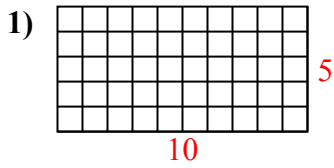
13. _____

14. _____

15. _____



Berechne die Fläche. Jeder Block entspricht 1 Einheit (u^2).



Antworten

1. 50 u^2

2. 27 u^2

3. 20 u^2

4. 36 u^2

5. 24 u^2

6. 80 u^2

7. 40 u^2

8. 16 u^2

9. 10 u^2

10. 21 u^2

11. 56 u^2

12. 49 u^2

13. 28 u^2

14. 24 u^2

15. 14 u^2