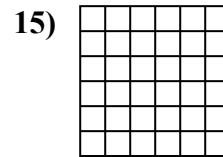


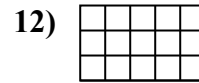

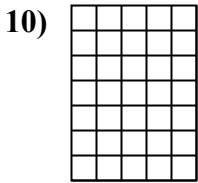
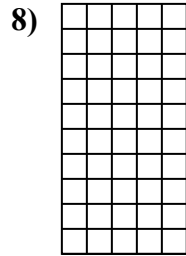
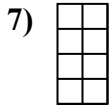
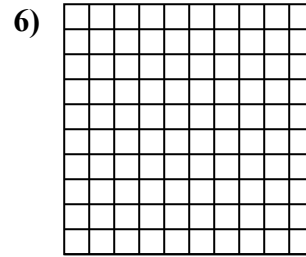
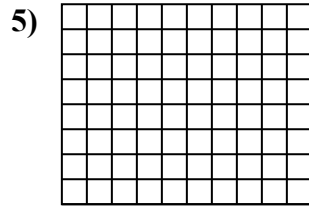
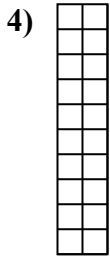
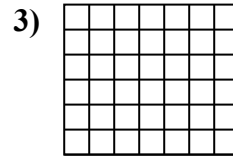
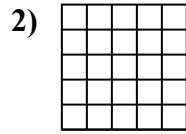
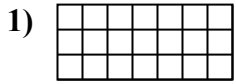




Berechne die Fläche. Jeder Block entspricht 1 Einheit (u^2).



Antworten

1. _____

2. _____

3. _____

4. _____

5. _____

6. _____

7. _____

8. _____

9. _____

10. _____

11. _____

12. _____

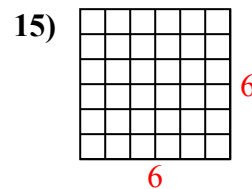
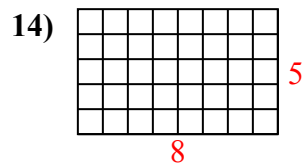
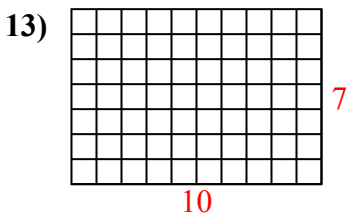
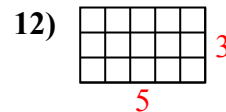
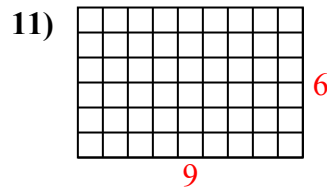
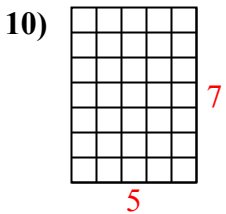
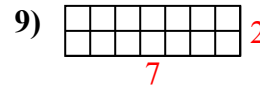
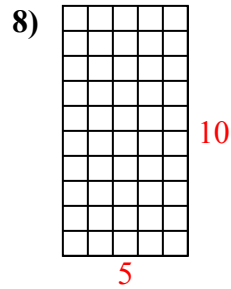
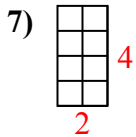
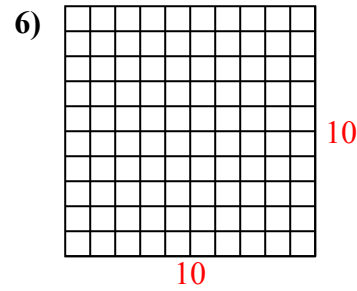
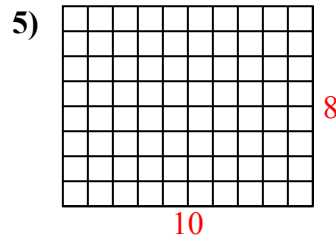
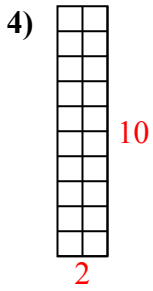
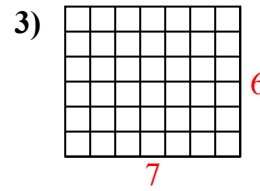
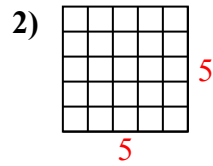
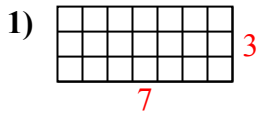
13. _____

14. _____

15. _____



Berechne die Fläche. Jeder Block entspricht 1 Einheit (u^2).



Antworten

1. 21 u^2

2. 25 u^2

3. 42 u^2

4. 20 u^2

5. 80 u^2

6. 100 u^2

7. 8 u^2

8. 50 u^2

9. 14 u^2

10. 35 u^2

11. 54 u^2

12. 15 u^2

13. 70 u^2

14. 40 u^2

15. 36 u^2