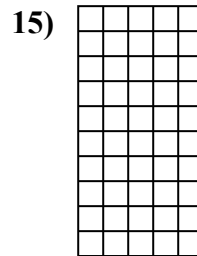
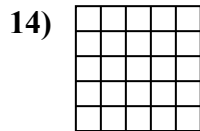
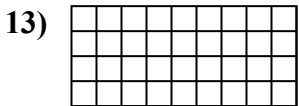
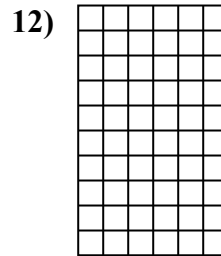
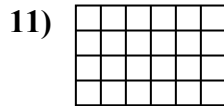
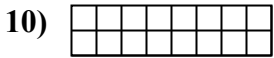

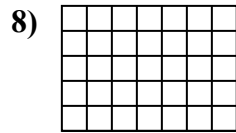
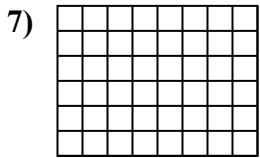
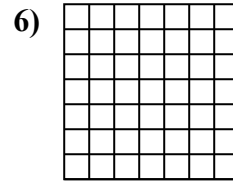
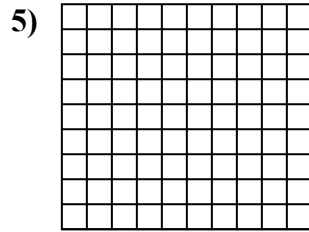
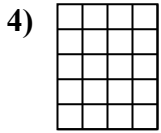
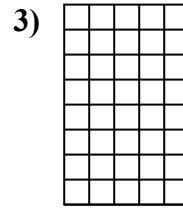
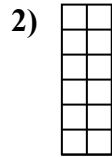
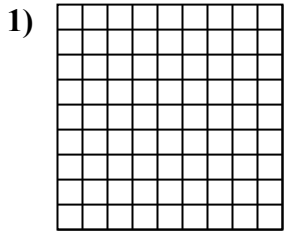




Berechne die Fläche. Jeder Block entspricht 1 Einheit (u<sup>2</sup>).



Antworten

1. \_\_\_\_\_

2. \_\_\_\_\_

3. \_\_\_\_\_

4. \_\_\_\_\_

5. \_\_\_\_\_

6. \_\_\_\_\_

7. \_\_\_\_\_

8. \_\_\_\_\_

9. \_\_\_\_\_

10. \_\_\_\_\_

11. \_\_\_\_\_

12. \_\_\_\_\_

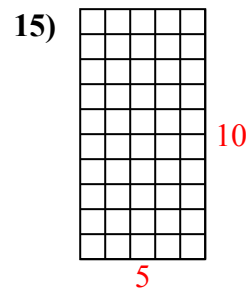
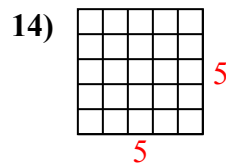
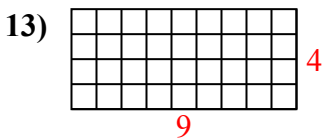
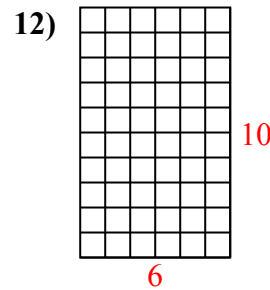
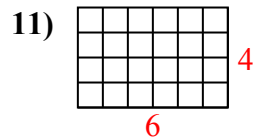
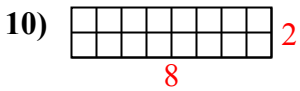
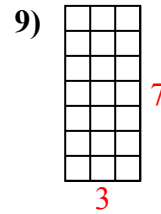
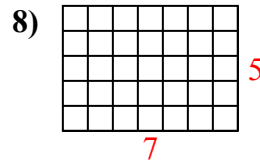
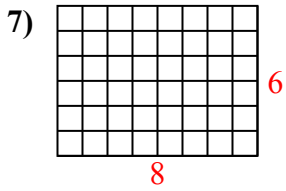
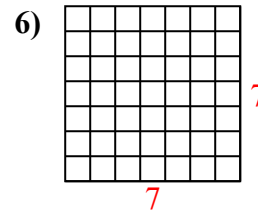
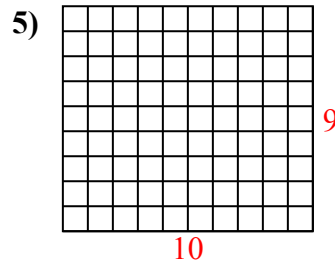
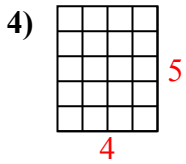
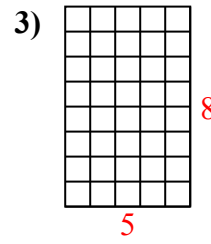
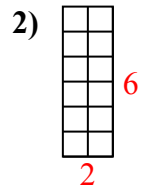
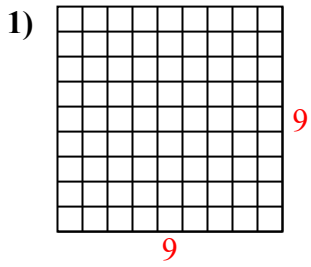
13. \_\_\_\_\_

14. \_\_\_\_\_

15. \_\_\_\_\_



Berechne die Fläche. Jeder Block entspricht 1 Einheit ( $u^2$ ).



**Antworten**

1. 81  $u^2$

2. 12  $u^2$

3. 40  $u^2$

4. 20  $u^2$

5. 90  $u^2$

6. 49  $u^2$

7. 48  $u^2$

8. 35  $u^2$

9. 21  $u^2$

10. 16  $u^2$

11. 24  $u^2$

12. 60  $u^2$

13. 36  $u^2$

14. 25  $u^2$

15. 50  $u^2$