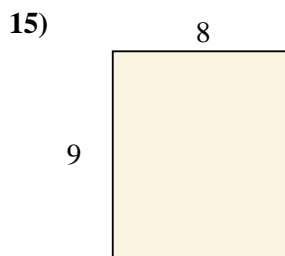
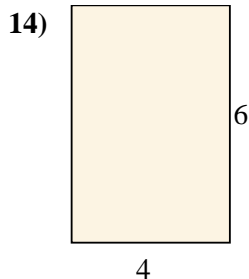
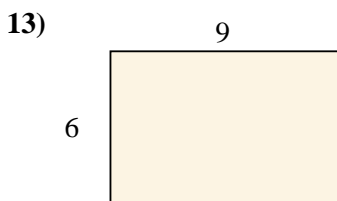
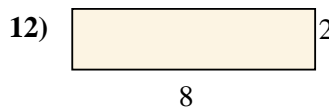
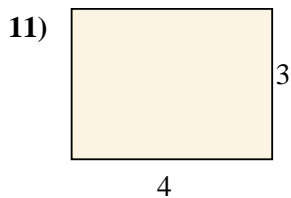
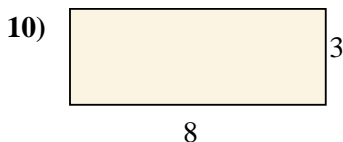
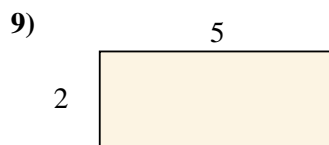
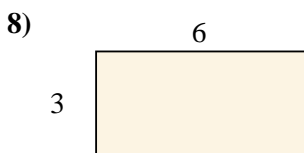
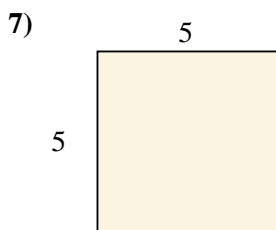
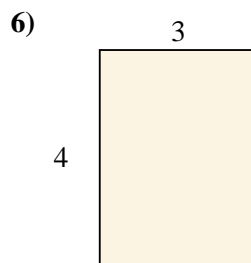
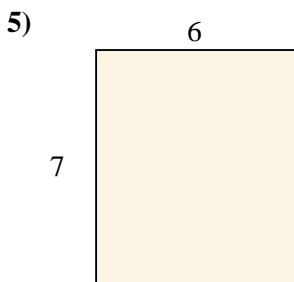
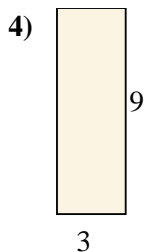
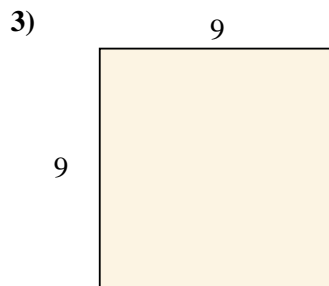
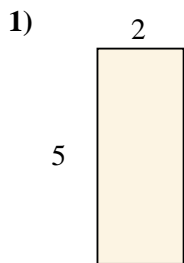




Berechne die Fläche der gezeigten Rechtecke.



Antworten

1. \_\_\_\_\_

2. \_\_\_\_\_

3. \_\_\_\_\_

4. \_\_\_\_\_

5. \_\_\_\_\_

6. \_\_\_\_\_

7. \_\_\_\_\_

8. \_\_\_\_\_

9. \_\_\_\_\_

10. \_\_\_\_\_

11. \_\_\_\_\_

12. \_\_\_\_\_

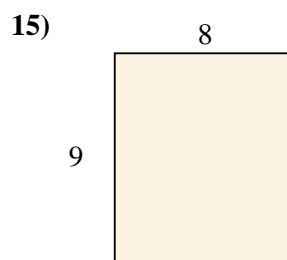
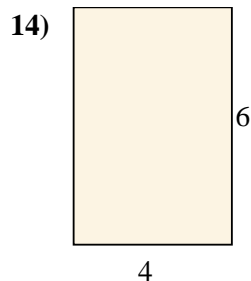
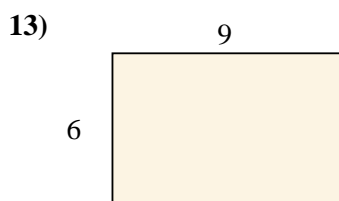
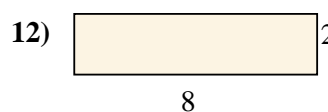
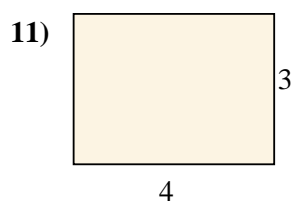
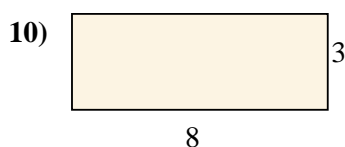
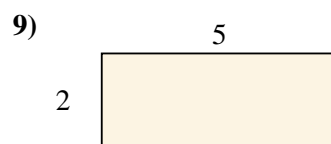
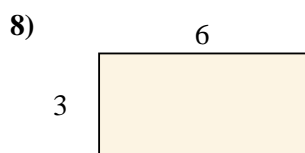
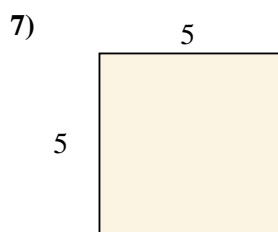
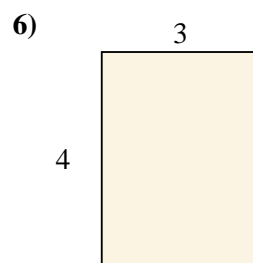
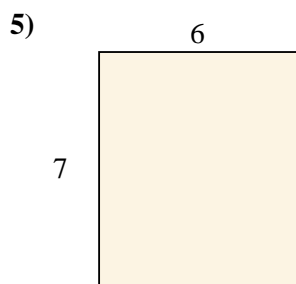
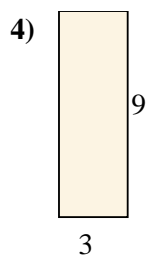
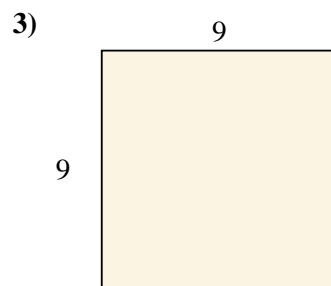
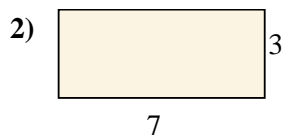
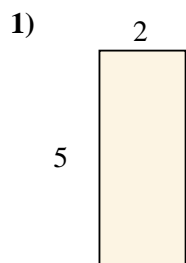
13. \_\_\_\_\_

14. \_\_\_\_\_

15. \_\_\_\_\_



Berechne die Fläche der gezeigten Rechtecke.

**Antworten**1. 10 cm<sup>2</sup>2. 21 cm<sup>2</sup>3. 81 cm<sup>2</sup>4. 27 cm<sup>2</sup>5. 42 cm<sup>2</sup>6. 12 cm<sup>2</sup>7. 25 cm<sup>2</sup>8. 18 cm<sup>2</sup>9. 10 cm<sup>2</sup>10. 24 cm<sup>2</sup>11. 12 cm<sup>2</sup>12. 16 cm<sup>2</sup>13. 54 cm<sup>2</sup>14. 24 cm<sup>2</sup>15. 72 cm<sup>2</sup>