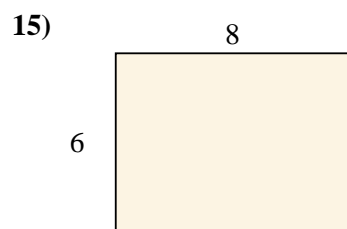
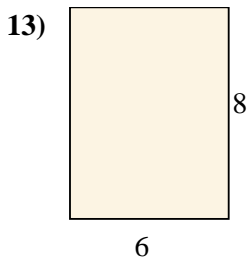
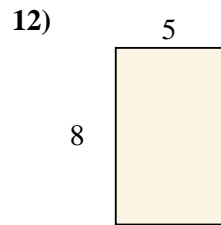
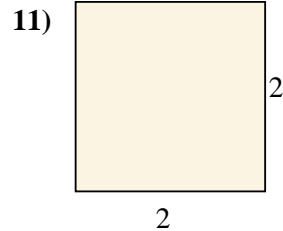
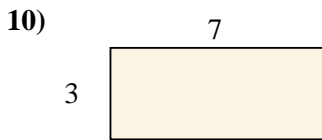
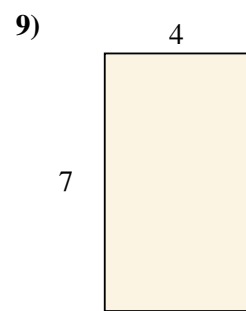
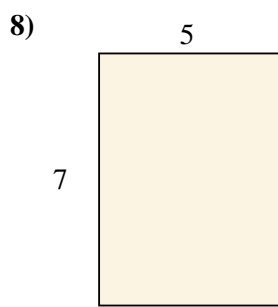
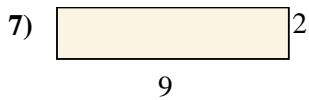
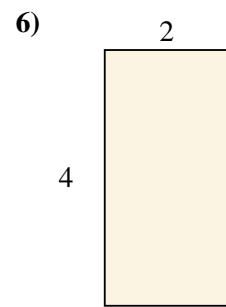
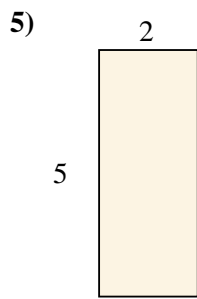
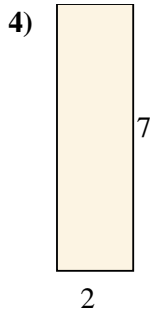
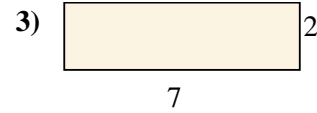
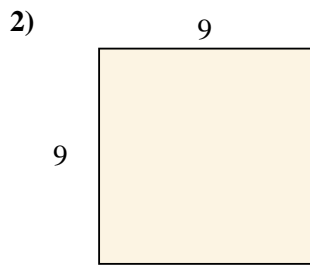
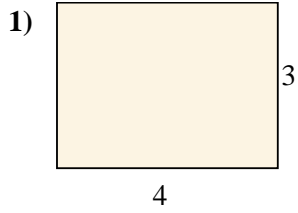




Berechne die Fläche der gezeigten Rechtecke.

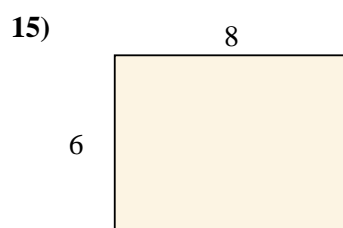
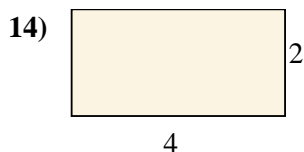
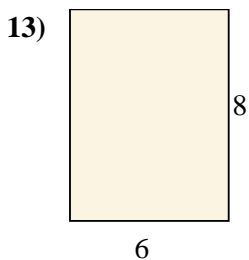
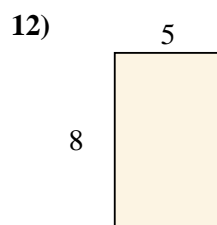
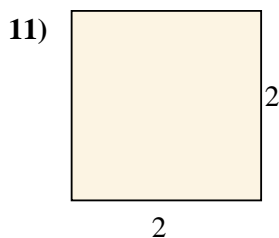
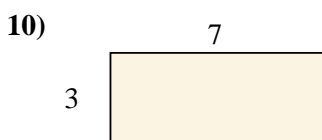
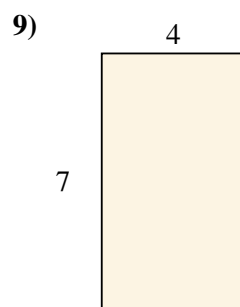
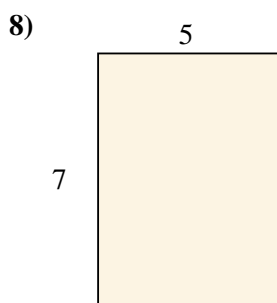
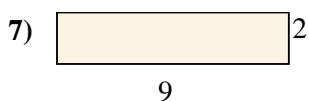
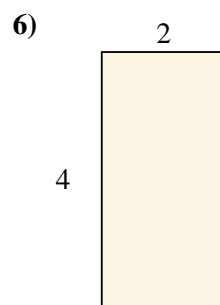
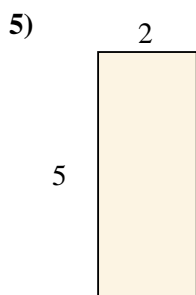
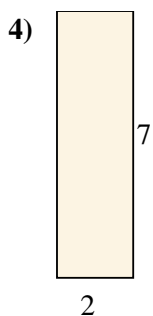
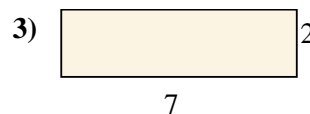
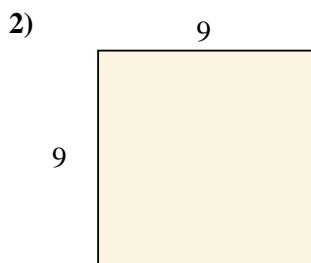
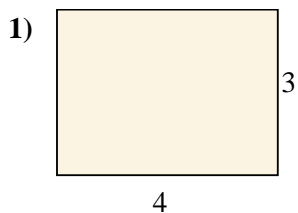


**Antworten**

- 1. \_\_\_\_\_
- 2. \_\_\_\_\_
- 3. \_\_\_\_\_
- 4. \_\_\_\_\_
- 5. \_\_\_\_\_
- 6. \_\_\_\_\_
- 7. \_\_\_\_\_
- 8. \_\_\_\_\_
- 9. \_\_\_\_\_
- 10. \_\_\_\_\_
- 11. \_\_\_\_\_
- 12. \_\_\_\_\_
- 13. \_\_\_\_\_
- 14. \_\_\_\_\_
- 15. \_\_\_\_\_



Berechne die Fläche der gezeigten Rechtecke.



**Antworten**

1. 12 cm<sup>2</sup>

2. 81 cm<sup>2</sup>

3. 14 cm<sup>2</sup>

4. 14 cm<sup>2</sup>

5. 10 cm<sup>2</sup>

6. 8 cm<sup>2</sup>

7. 18 cm<sup>2</sup>

8. 35 cm<sup>2</sup>

9. 28 cm<sup>2</sup>

10. 21 cm<sup>2</sup>

11. 4 cm<sup>2</sup>

12. 40 cm<sup>2</sup>

13. 48 cm<sup>2</sup>

14. 8 cm<sup>2</sup>

15. 48 cm<sup>2</sup>