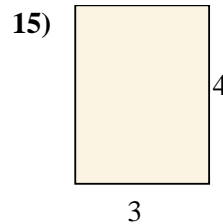
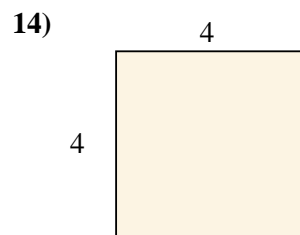
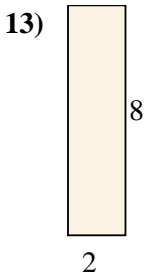
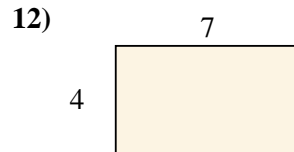
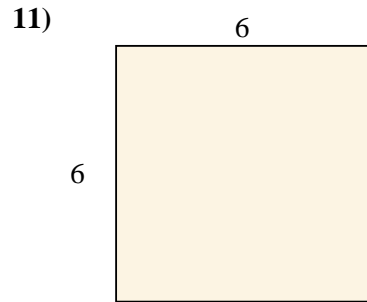
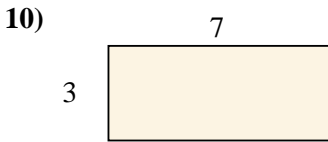
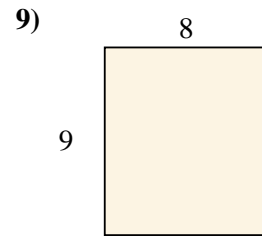
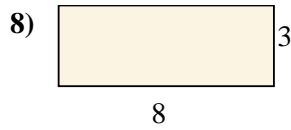
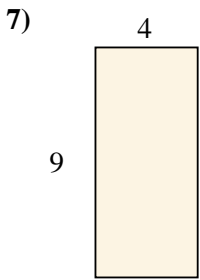
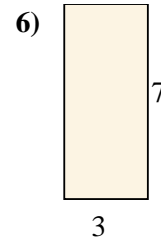
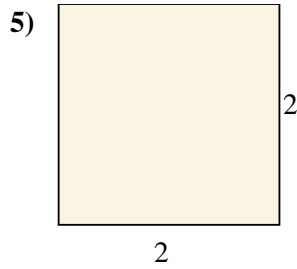
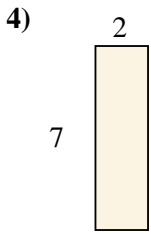
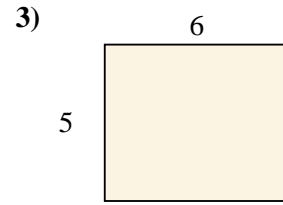
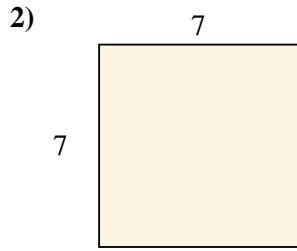
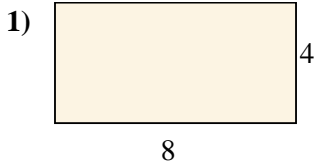




Berechne die Fläche der gezeigten Rechtecke.

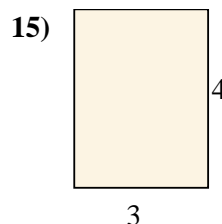
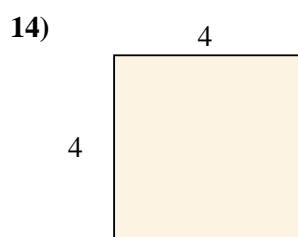
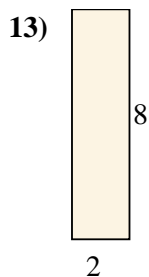
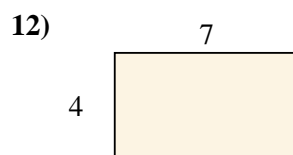
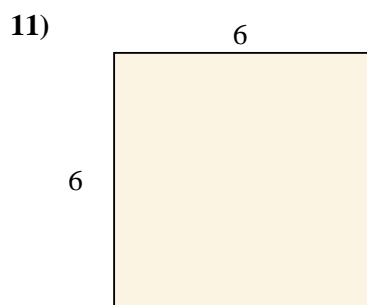
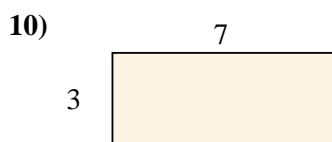
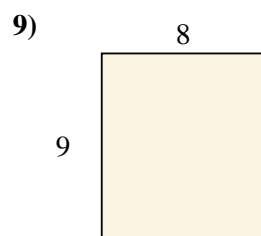
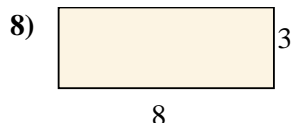
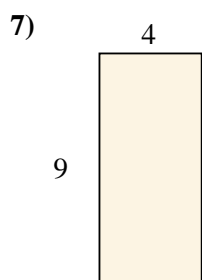
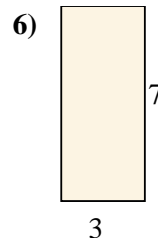
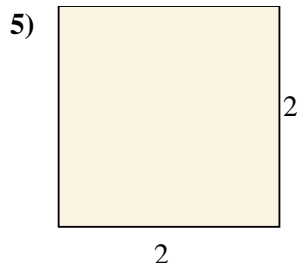
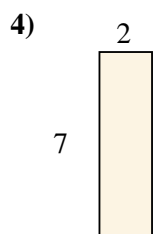
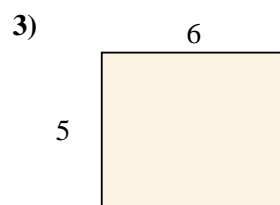
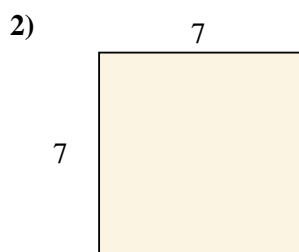
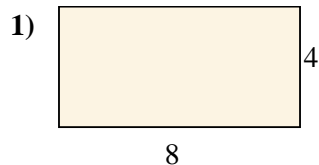


Antworten

1. \_\_\_\_\_
2. \_\_\_\_\_
3. \_\_\_\_\_
4. \_\_\_\_\_
5. \_\_\_\_\_
6. \_\_\_\_\_
7. \_\_\_\_\_
8. \_\_\_\_\_
9. \_\_\_\_\_
10. \_\_\_\_\_
11. \_\_\_\_\_
12. \_\_\_\_\_
13. \_\_\_\_\_
14. \_\_\_\_\_
15. \_\_\_\_\_



Berechne die Fläche der gezeigten Rechtecke.



Antworten

1. 32 cm<sup>2</sup>

2. 49 cm<sup>2</sup>

3. 30 cm<sup>2</sup>

4. 14 cm<sup>2</sup>

5. 4 cm<sup>2</sup>

6. 21 cm<sup>2</sup>

7. 36 cm<sup>2</sup>

8. 24 cm<sup>2</sup>

9. 72 cm<sup>2</sup>

10. 21 cm<sup>2</sup>

11. 36 cm<sup>2</sup>

12. 28 cm<sup>2</sup>

13. 16 cm<sup>2</sup>

14. 16 cm<sup>2</sup>

15. 12 cm<sup>2</sup>