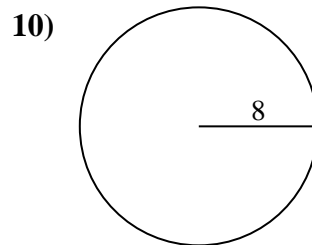
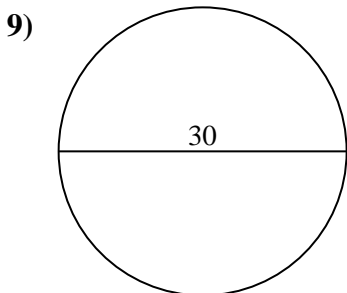
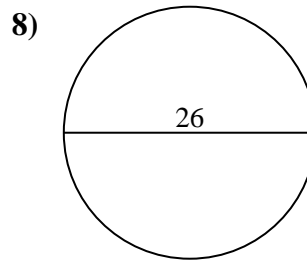
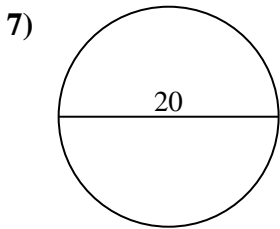
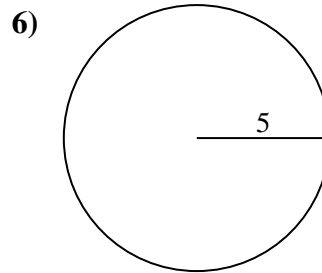
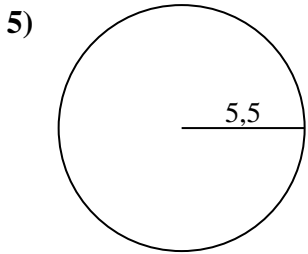
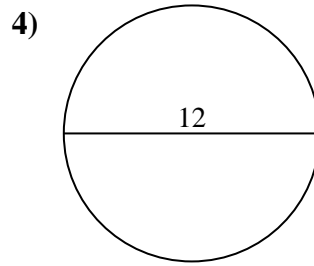
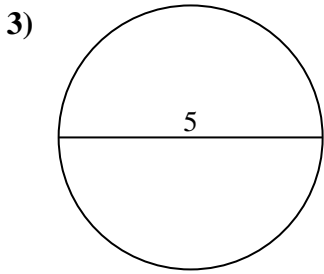
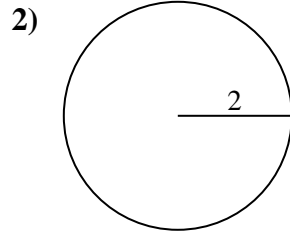
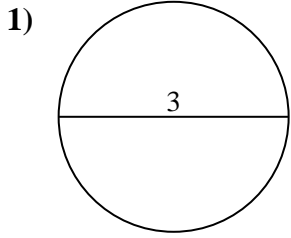




Berechne jeden Kreisumfang. Die Kreise sind nicht maßstäblich.



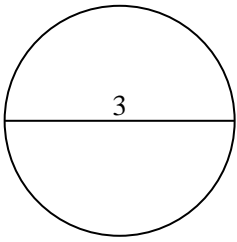
**Antworten**

- 1. \_\_\_\_\_
- 2. \_\_\_\_\_
- 3. \_\_\_\_\_
- 4. \_\_\_\_\_
- 5. \_\_\_\_\_
- 6. \_\_\_\_\_
- 7. \_\_\_\_\_
- 8. \_\_\_\_\_
- 9. \_\_\_\_\_
- 10. \_\_\_\_\_

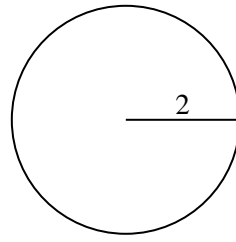


Berechne jeden Kreisumfang. Die Kreise sind nicht maßstäblich.

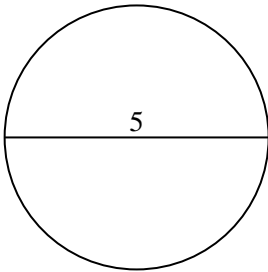
1)



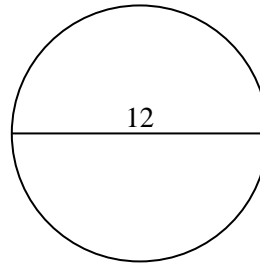
2)



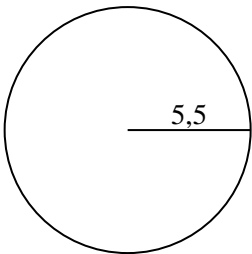
3)



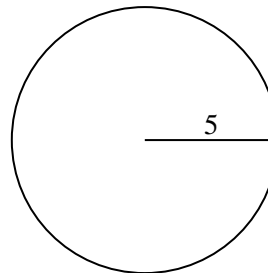
4)



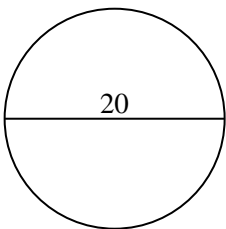
5)



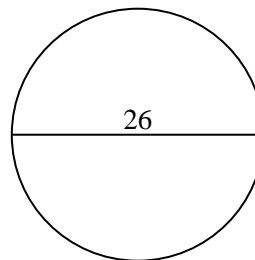
6)



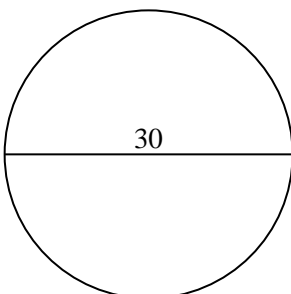
7)



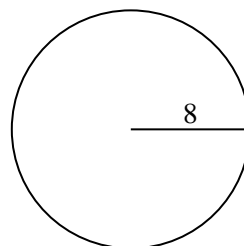
8)



9)



10)

**Antworten**1. 9,42 cm2. 12,57 cm3. 15,71 cm4. 37,7 cm5. 34,56 cm6. 31,42 cm7. 62,83 cm8. 81,68 cm9. 94,25 cm10. 50,27 cm



Berechne jeden Kreisumfang. Die Kreise sind nicht maßstäblich.

**Antworten**

94,25 cm	15,71 cm	12,57 cm	9,42 cm	62,83 cm
81,68 cm	50,27 cm	34,56 cm	31,42 cm	37,7 cm

1. \_\_\_\_\_
2. \_\_\_\_\_
3. \_\_\_\_\_
4. \_\_\_\_\_
5. \_\_\_\_\_
6. \_\_\_\_\_
7. \_\_\_\_\_
8. \_\_\_\_\_
9. \_\_\_\_\_
10. \_\_\_\_\_

