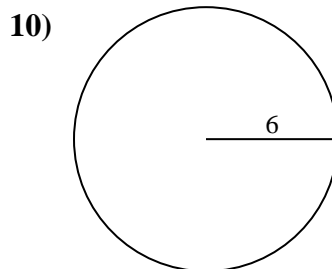
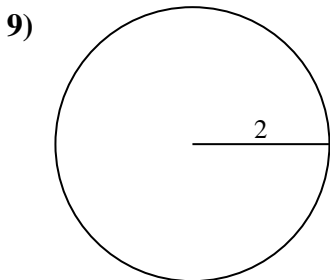
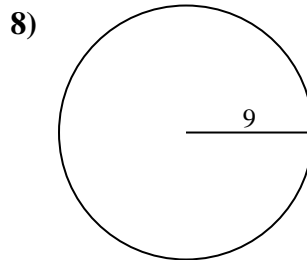
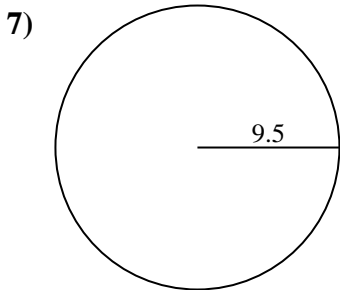
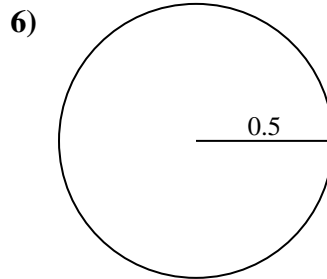
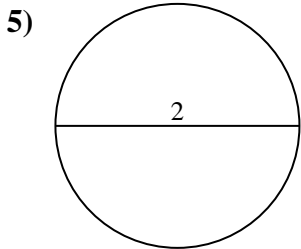
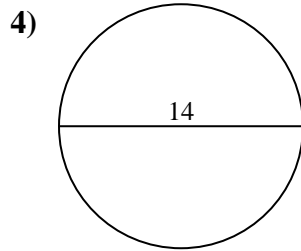
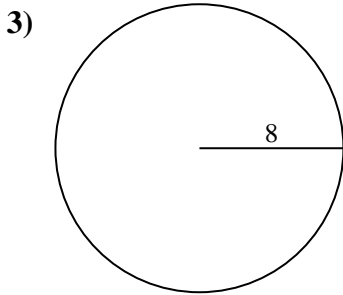
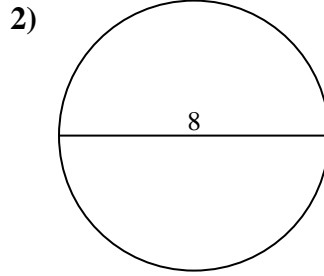
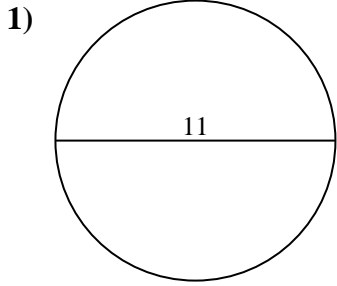




Berechne jeden Kreisumfang. Die Kreise sind nicht maßstäblich.



Antworten

1. _____

2. _____

3. _____

4. _____

5. _____

6. _____

7. _____

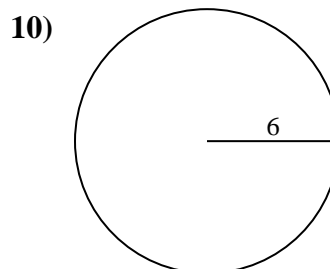
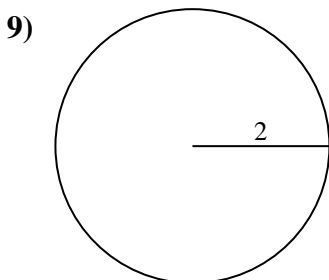
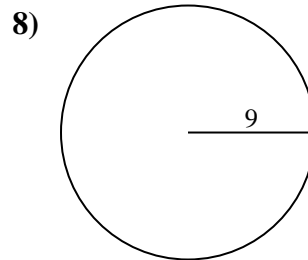
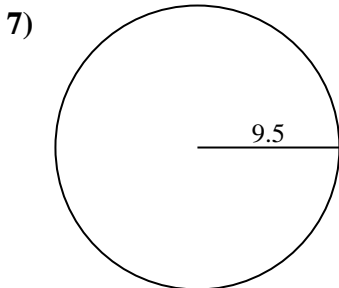
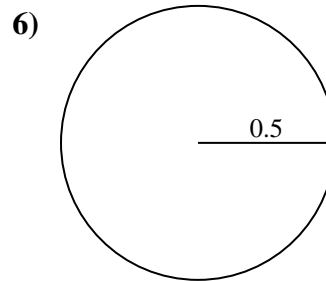
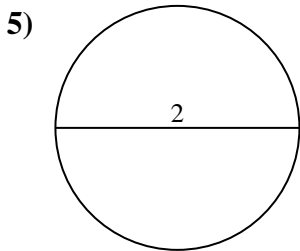
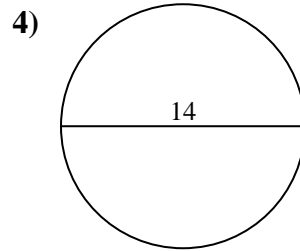
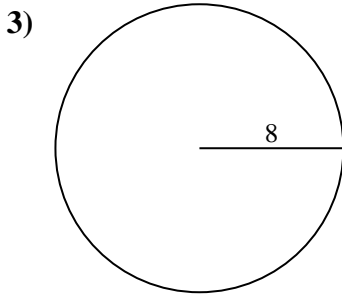
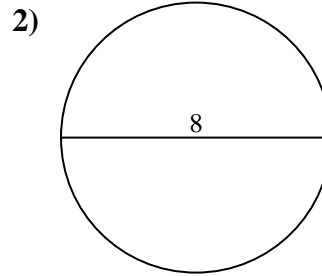
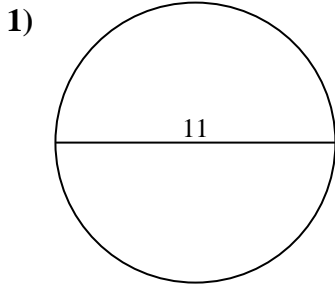
8. _____

9. _____

10. _____



Berechne jeden Kreisumfang. Die Kreise sind nicht maßstäblich.

**Antworten**1. 34,56 cm2. 25,13 cm3. 50,27 cm4. 43,98 cm5. 6,28 cm6. 3,14 cm7. 59,69 cm8. 56,55 cm9. 12,57 cm10. 37,7 cm



Berechne jeden Kreisumfang. Die Kreise sind nicht maßstäblich.

Antworten

50,27 cm

25,13 cm

3,14 cm

59,69 cm

37,7 cm

43,98 cm

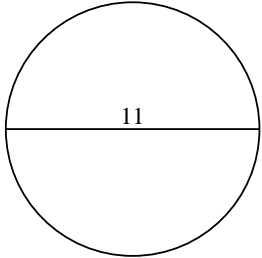
34,56 cm

56,55 cm

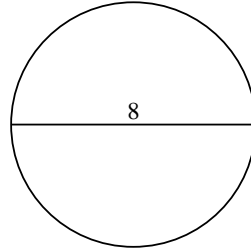
12,57 cm

6,28 cm

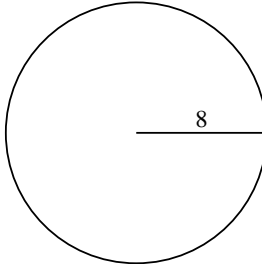
1)



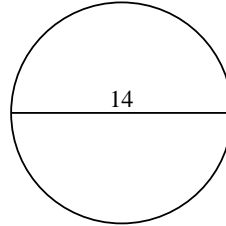
2)



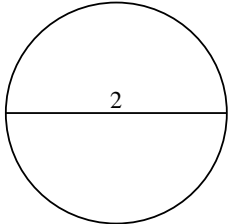
3)



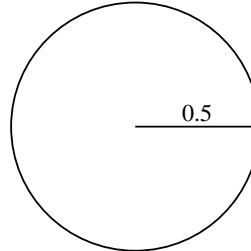
4)



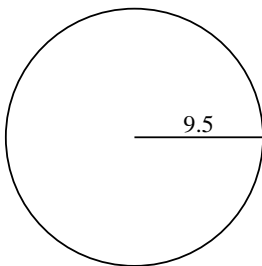
5)



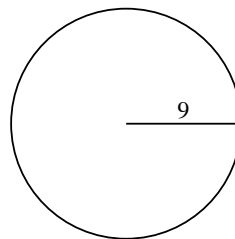
6)



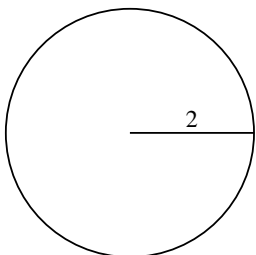
7)



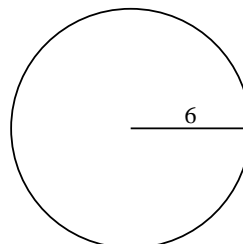
8)



9)



10)



1. _____

2. _____

3. _____

4. _____

5. _____

6. _____

7. _____

8. _____

9. _____

10. _____