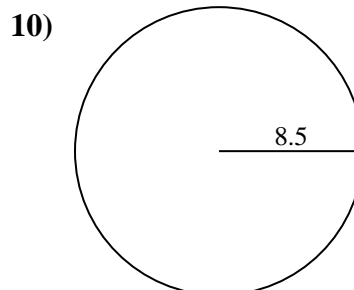
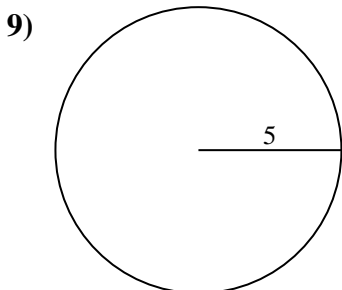
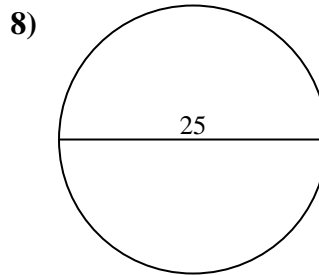
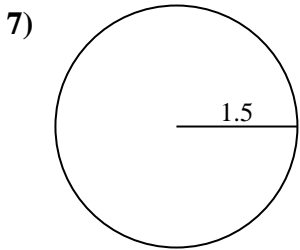
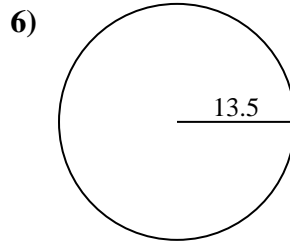
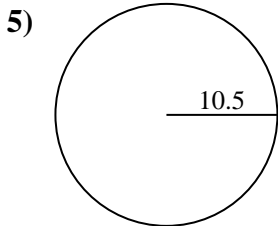
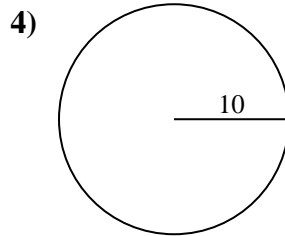
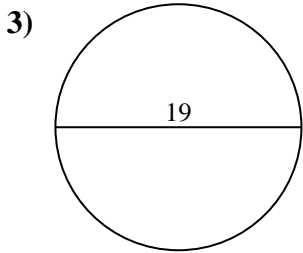
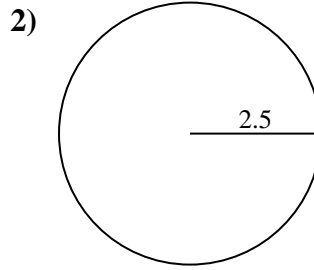
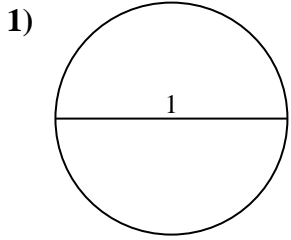




Berechne jeden Kreisumfang. Die Kreise sind nicht maßstäblich.

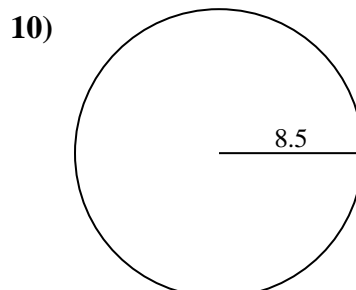
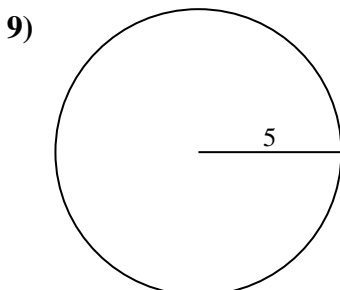
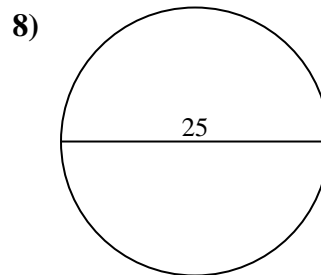
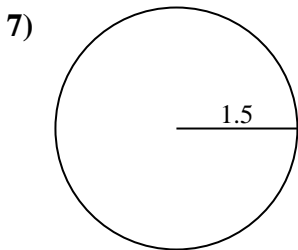
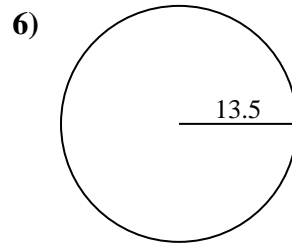
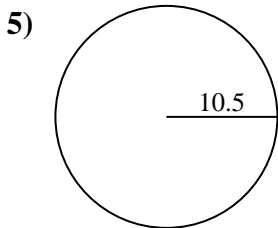
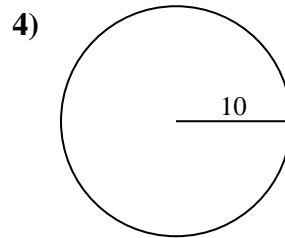
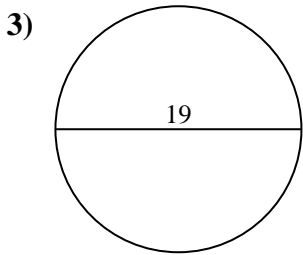
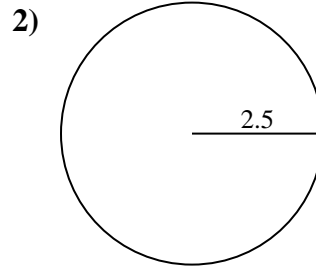
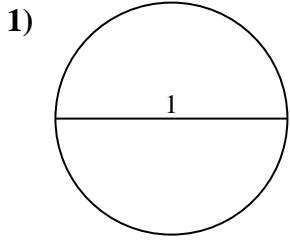


Antworten

- 1. _____
- 2. _____
- 3. _____
- 4. _____
- 5. _____
- 6. _____
- 7. _____
- 8. _____
- 9. _____
- 10. _____



Berechne jeden Kreisumfang. Die Kreise sind nicht maßstäblich.

**Antworten**1. 3,14 cm2. 15,71 cm3. 59,69 cm4. 62,83 cm5. 65,97 cm6. 84,82 cm7. 9,42 cm8. 78,54 cm9. 31,42 cm10. 53,41 cm



Berechne jeden Kreisumfang. Die Kreise sind nicht maßstäblich.

Antworten

59,69 cm

31,42 cm

3,14 cm

78,54 cm

9,42 cm

65,97 cm

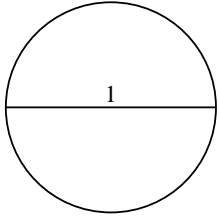
84,82 cm

62,83 cm

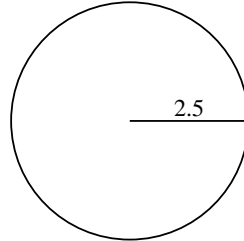
15,71 cm

53,41 cm

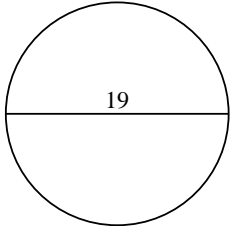
1)



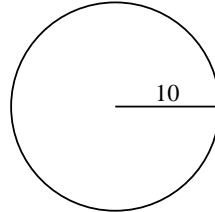
2)



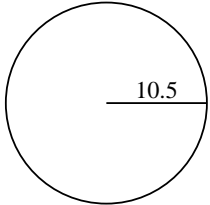
3)



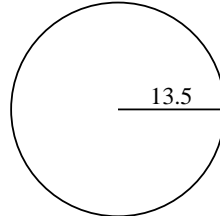
4)



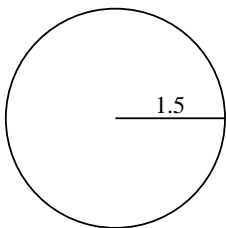
5)



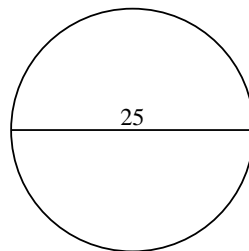
6)



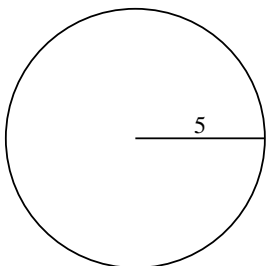
7)



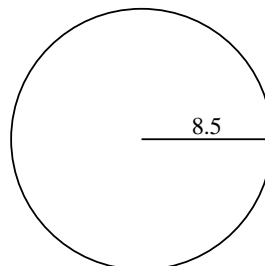
8)



9)



10)



1. _____

2. _____

3. _____

4. _____

5. _____

6. _____

7. _____

8. _____

9. _____

10. _____