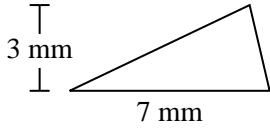




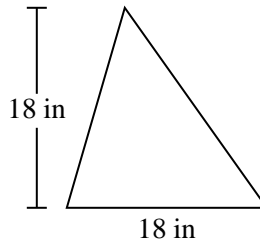
**Berechne die Fläche jedes Dreiecks. Die Einheiten sind nicht maßstäblich.**

**Antworten**

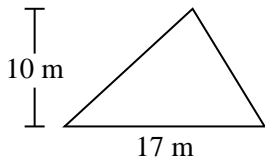
1)



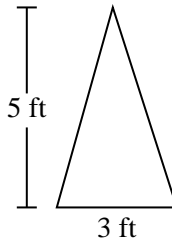
2)



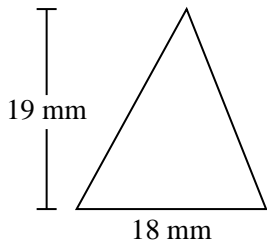
3)



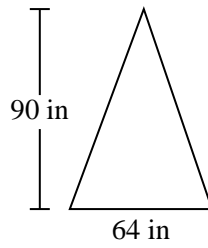
4)



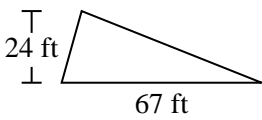
5)



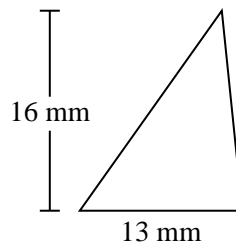
6)



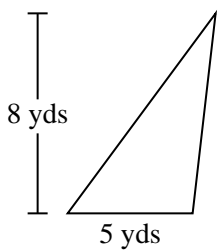
7)



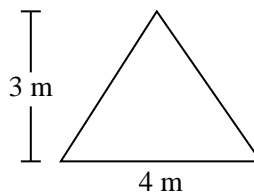
8)



9)



10)

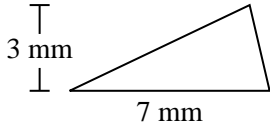


- 1. \_\_\_\_\_
- 2. \_\_\_\_\_
- 3. \_\_\_\_\_
- 4. \_\_\_\_\_
- 5. \_\_\_\_\_
- 6. \_\_\_\_\_
- 7. \_\_\_\_\_
- 8. \_\_\_\_\_
- 9. \_\_\_\_\_
- 10. \_\_\_\_\_

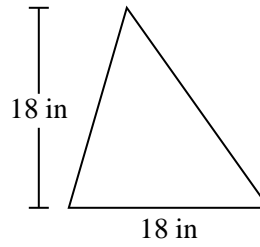


Berechne die Fläche jedes Dreiecks. Die Einheiten sind nicht maßstäblich.

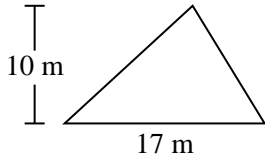
1)



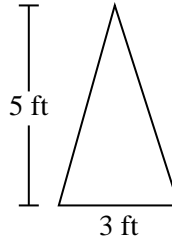
2)



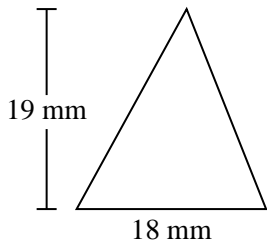
3)



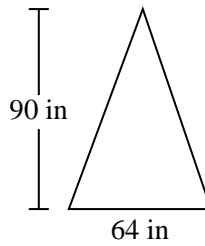
4)



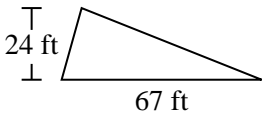
5)



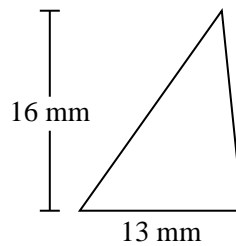
6)



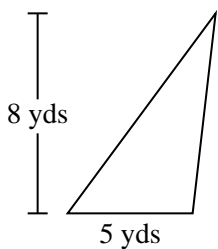
7)



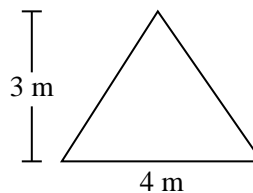
8)



9)



10)



**Antworten**

1. 10,5 mm<sup>2</sup>

2. 162 in<sup>2</sup>

3. 85 m<sup>2</sup>

4. 7,5 ft<sup>2</sup>

5. 171 mm<sup>2</sup>

6. 2.880 in<sup>2</sup>

7. 804 ft<sup>2</sup>

8. 104 mm<sup>2</sup>

9. 20 yds<sup>2</sup>

10. 6 m<sup>2</sup>



Berechne die Fläche jedes Dreiecks. Die Einheiten sind nicht maßstäblich.

**Antworten**

2.880 in<sup>2</sup>

171 mm<sup>2</sup>

85 m<sup>2</sup>

104 mm<sup>2</sup>

162 in<sup>2</sup>

20 yds<sup>2</sup>

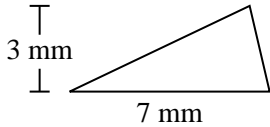
7,5 ft<sup>2</sup>

6 m<sup>2</sup>

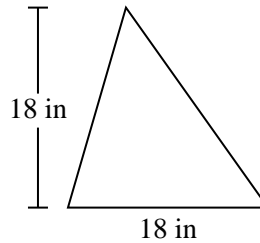
804 ft<sup>2</sup>

10,5 mm<sup>2</sup>

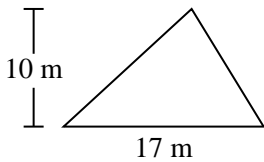
1)



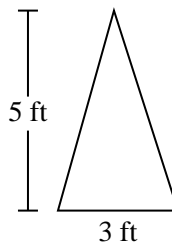
2)



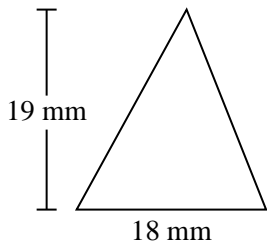
3)



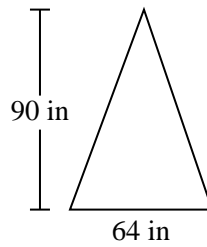
4)



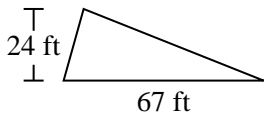
5)



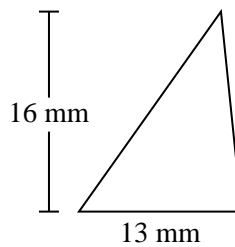
6)



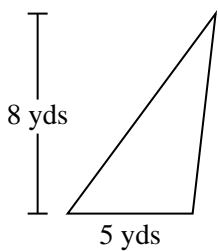
7)



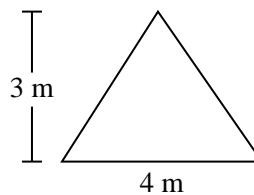
8)



9)



10)



1. \_\_\_\_\_
2. \_\_\_\_\_
3. \_\_\_\_\_
4. \_\_\_\_\_
5. \_\_\_\_\_
6. \_\_\_\_\_
7. \_\_\_\_\_
8. \_\_\_\_\_
9. \_\_\_\_\_
10. \_\_\_\_\_