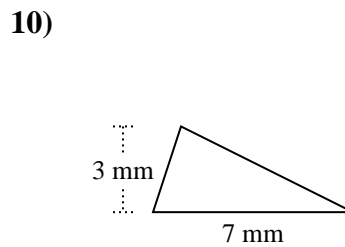
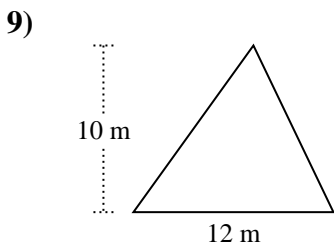
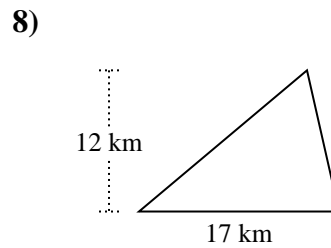
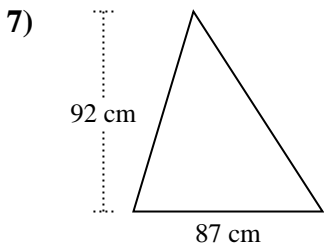
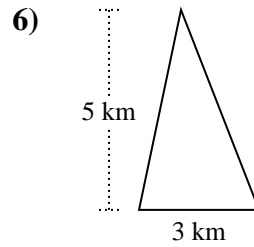
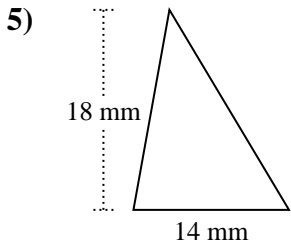
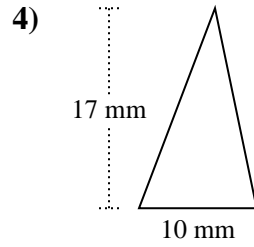
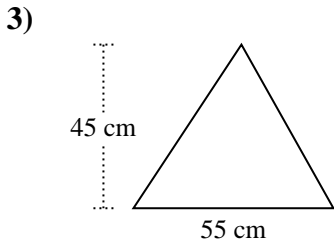
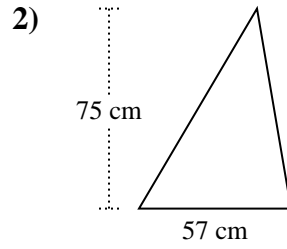
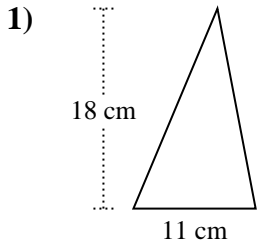




Berechne die Fläche jedes Dreiecks. Die Einheiten sind nicht maßstäblich.

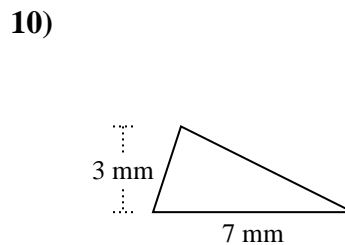
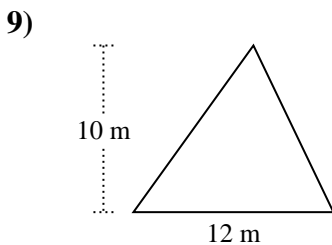
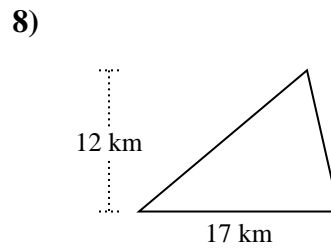
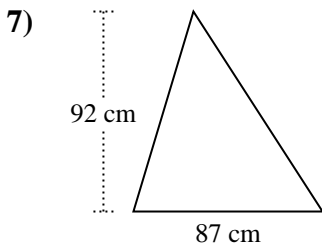
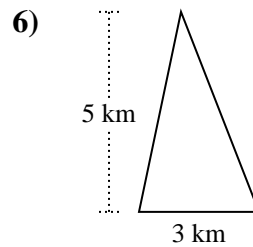
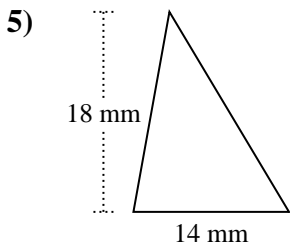
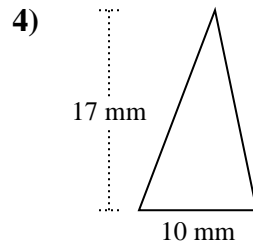
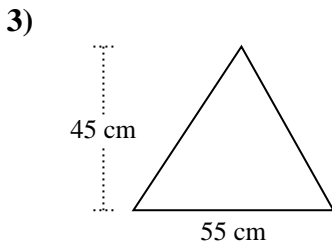
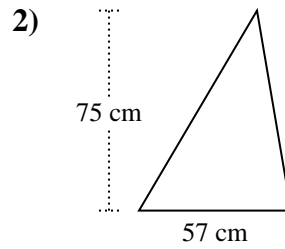
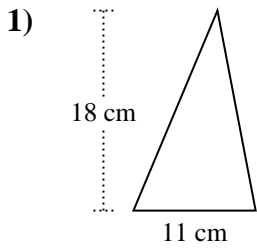


Antworten

- 1. _____
- 2. _____
- 3. _____
- 4. _____
- 5. _____
- 6. _____
- 7. _____
- 8. _____
- 9. _____
- 10. _____



Berechne die Fläche jedes Dreiecks. Die Einheiten sind nicht maßstäblich.

**Antworten**

1. **99 cm²**

2. **2.137,5 cm²**

3. **1.237,5 cm²**

4. **85 mm²**

5. **126 mm²**

6. **7,5 km²**

7. **4.002 cm²**

8. **102 km²**

9. **60 m²**

10. **10,5 mm²**



Berechne die Fläche jedes Dreiecks. Die Einheiten sind nicht maßstäblich.

102	2.137,5	7,5	126
99	1.237,5	10,5	60
85	4.002		

Antworten

1. _____
2. _____
3. _____
4. _____
5. _____
6. _____
7. _____
8. _____
9. _____
10. _____

