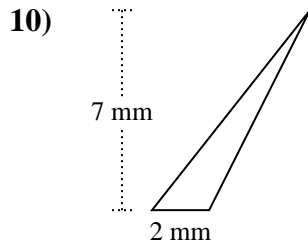
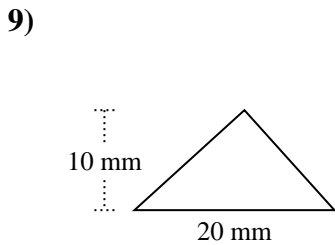
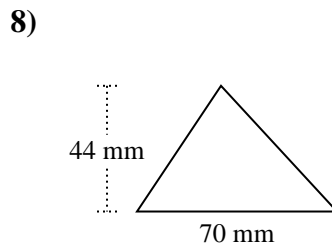
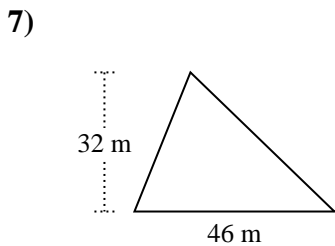
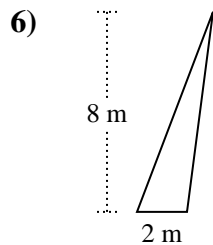
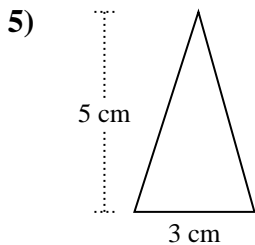
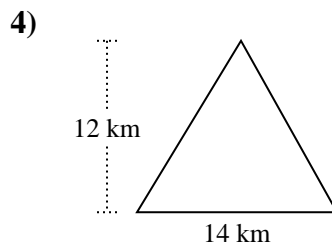
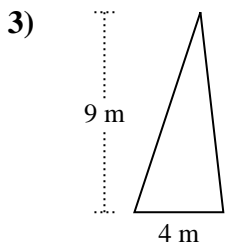
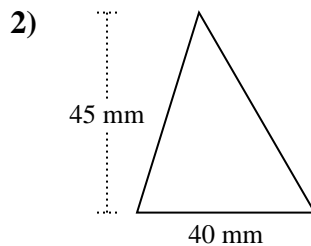
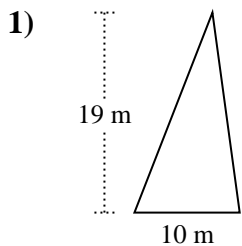




Berechne die Fläche jedes Dreiecks. Die Einheiten sind nicht maßstäblich.

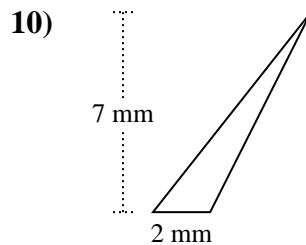
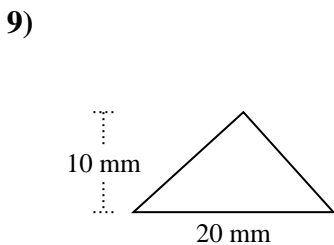
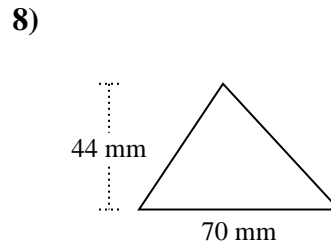
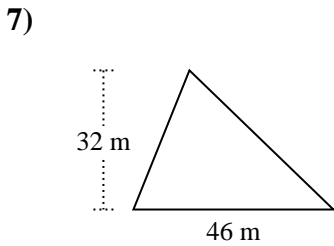
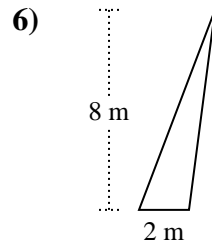
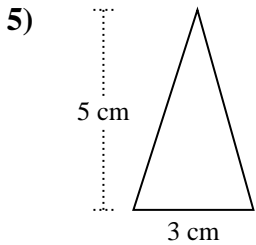
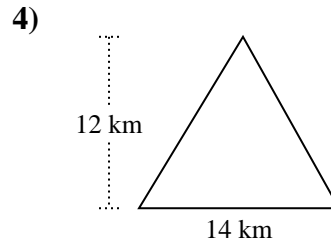
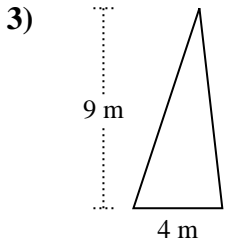
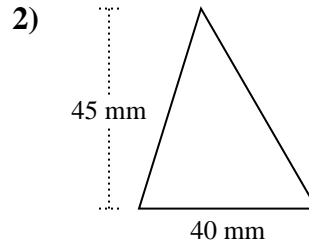
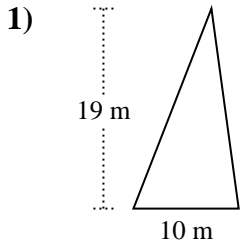


Antworten

- 1. _____
- 2. _____
- 3. _____
- 4. _____
- 5. _____
- 6. _____
- 7. _____
- 8. _____
- 9. _____
- 10. _____



Berechne die Fläche jedes Dreiecks. Die Einheiten sind nicht maßstäblich.



Antworten

1. 95 m²

2. 900 mm²

3. 18 m²

4. 84 km²

5. 7,5 cm²

6. 8 m²

7. 736 m²

8. 1.540 mm²

9. 100 mm²

10. 7 mm²



Berechne die Fläche jedes Dreiecks. Die Einheiten sind nicht maßstäblich.

Antworten

84	1.540	95	7
100	900	7,5	8
18	736		

1. _____
2. _____
3. _____
4. _____
5. _____
6. _____
7. _____
8. _____
9. _____
10. _____

