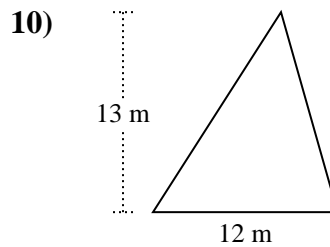
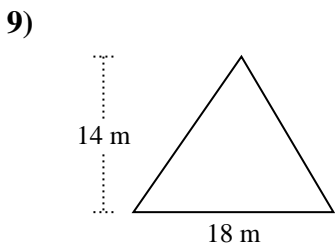
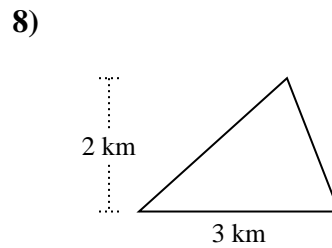
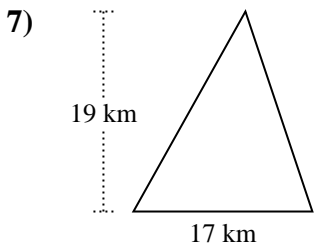
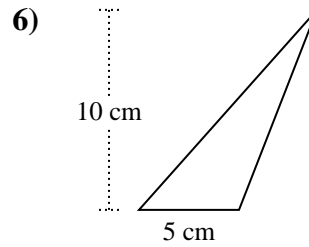
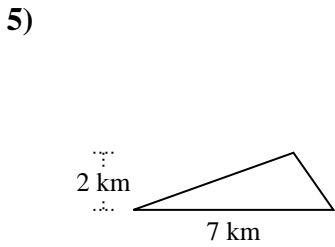
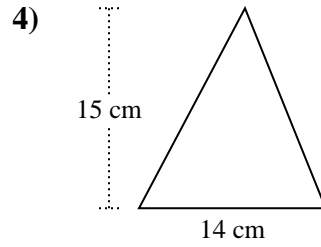
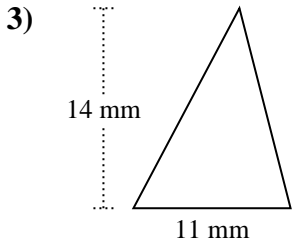
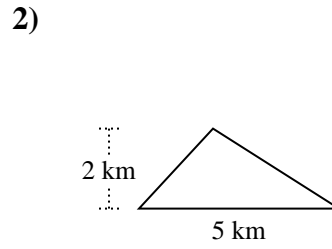
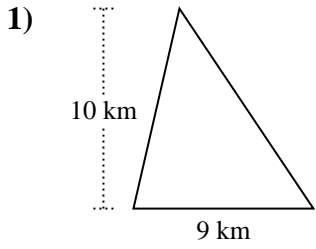




Berechne die Fläche jedes Dreiecks. Die Einheiten sind nicht maßstäblich.

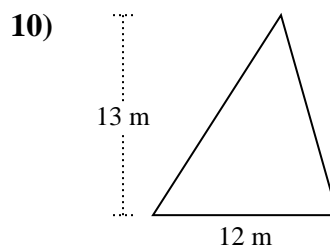
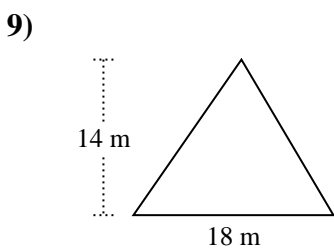
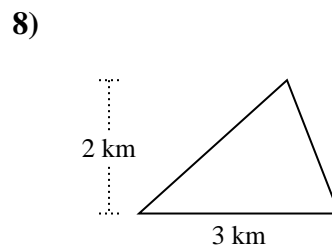
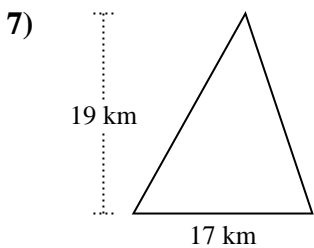
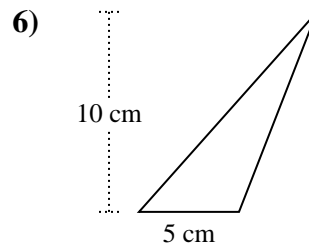
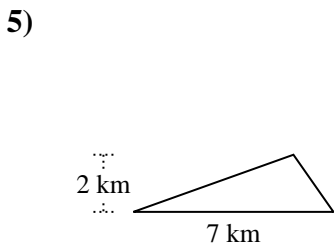
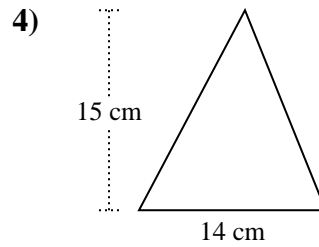
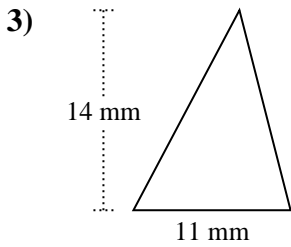
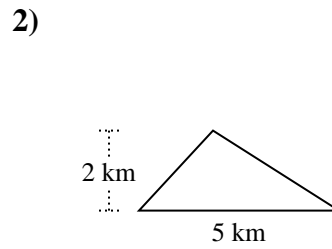
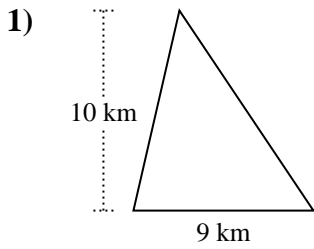


Antworten

- 1. \_\_\_\_\_
- 2. \_\_\_\_\_
- 3. \_\_\_\_\_
- 4. \_\_\_\_\_
- 5. \_\_\_\_\_
- 6. \_\_\_\_\_
- 7. \_\_\_\_\_
- 8. \_\_\_\_\_
- 9. \_\_\_\_\_
- 10. \_\_\_\_\_



Berechne die Fläche jedes Dreiecks. Die Einheiten sind nicht maßstäblich.



Antworten

1. 45 km<sup>2</sup>
2. 5 km<sup>2</sup>
3. 77 mm<sup>2</sup>
4. 105 cm<sup>2</sup>
5. 7 km<sup>2</sup>
6. 25 cm<sup>2</sup>
7. 161,5 km<sup>2</sup>
8. 3 km<sup>2</sup>
9. 126 m<sup>2</sup>
10. 78 m<sup>2</sup>



Berechne die Fläche jedes Dreiecks. Die Einheiten sind nicht maßstäblich.

161,5	78	77	105
25	5	7	126
45	3		

**Antworten**

1. \_\_\_\_\_
2. \_\_\_\_\_
3. \_\_\_\_\_
4. \_\_\_\_\_
5. \_\_\_\_\_
6. \_\_\_\_\_
7. \_\_\_\_\_
8. \_\_\_\_\_
9. \_\_\_\_\_
10. \_\_\_\_\_

