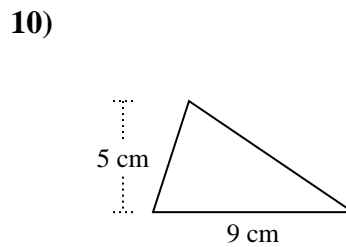
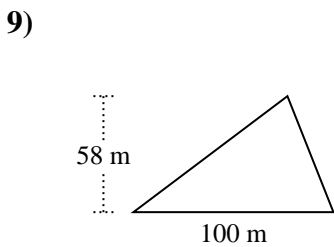
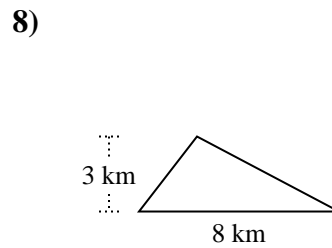
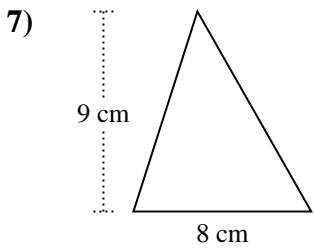
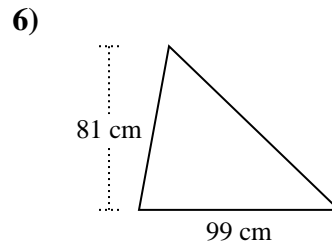
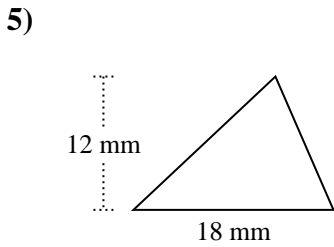
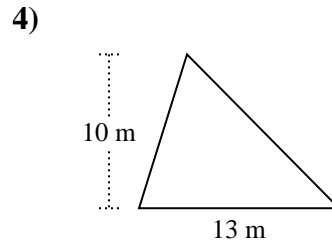
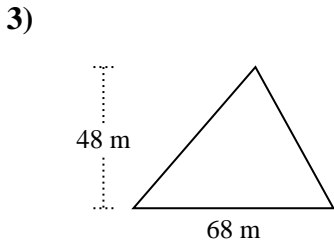
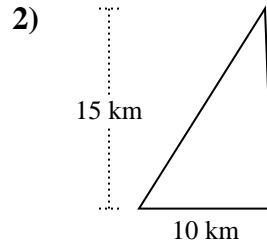
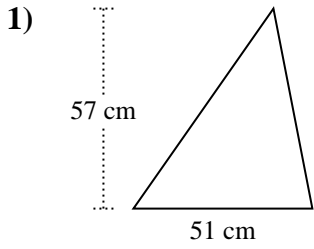




Berechne die Fläche jedes Dreiecks. Die Einheiten sind nicht maßstäblich.

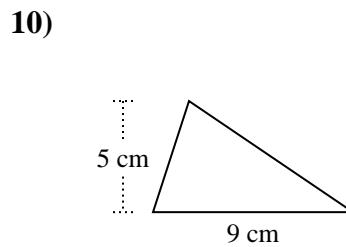
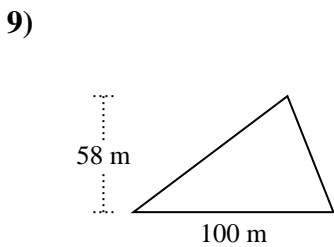
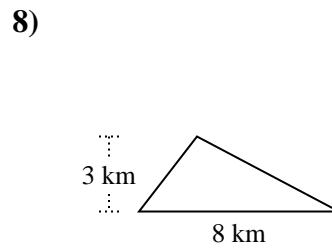
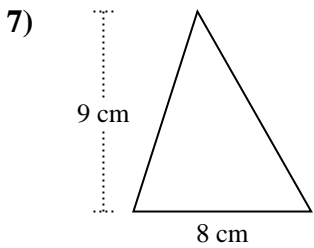
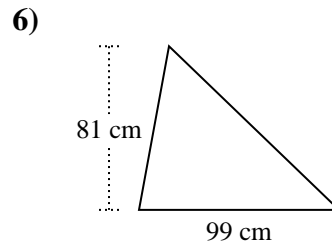
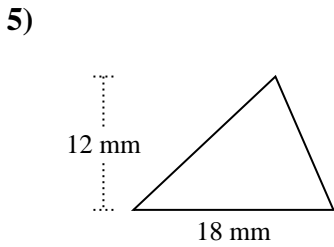
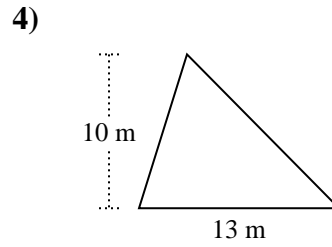
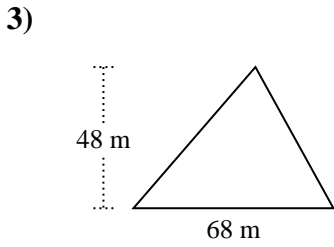
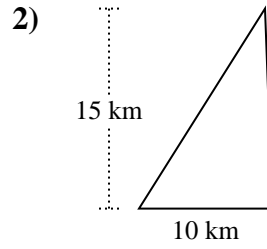
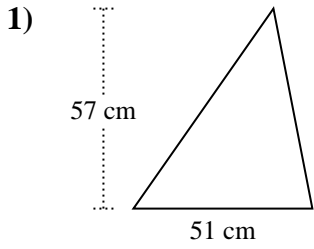


Antworten

- 1. _____
- 2. _____
- 3. _____
- 4. _____
- 5. _____
- 6. _____
- 7. _____
- 8. _____
- 9. _____
- 10. _____



Berechne die Fläche jedes Dreiecks. Die Einheiten sind nicht maßstäblich.



Antworten

1. 1.453,5 cm²
2. 75 km²
3. 1.632 m²
4. 65 m²
5. 108 mm²
6. 4.009,5 cm²
7. 36 cm²
8. 12 km²
9. 2.900 m²
10. 22,5 cm²



Berechne die Fläche jedes Dreiecks. Die Einheiten sind nicht maßstäblich.

1.453,5	108	75	22,5
4.009,5	12	2.900	65
36	1.632		

Antworten

1. _____
2. _____
3. _____
4. _____
5. _____
6. _____
7. _____
8. _____
9. _____
10. _____

