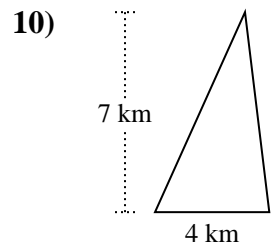
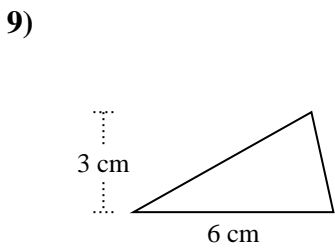
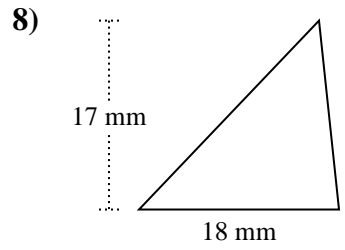
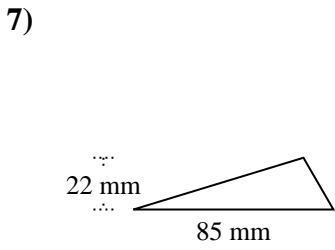
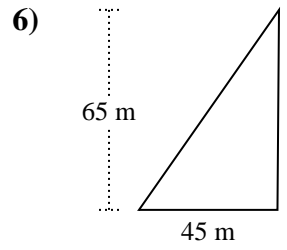
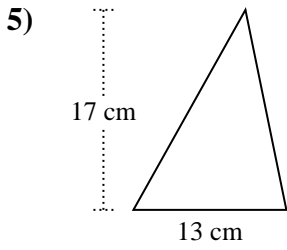
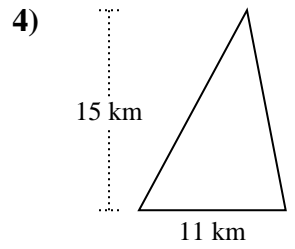
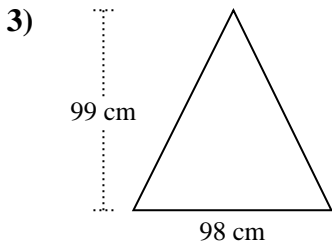
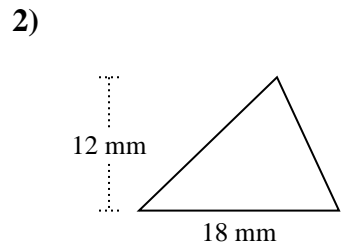
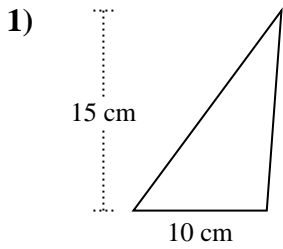




Berechne die Fläche jedes Dreiecks. Die Einheiten sind nicht maßstäblich.

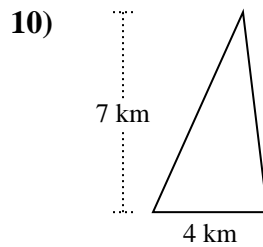
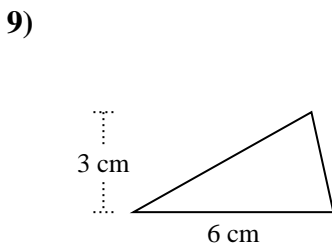
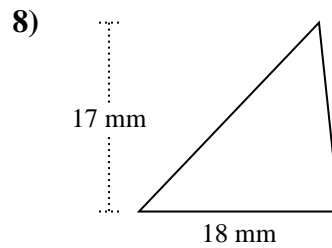
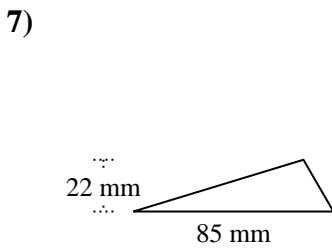
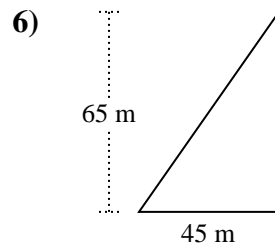
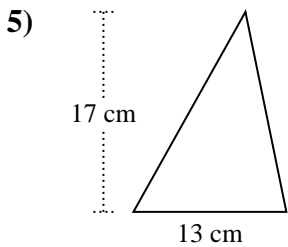
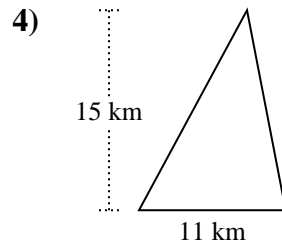
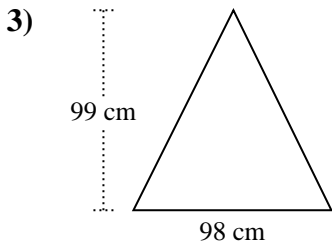
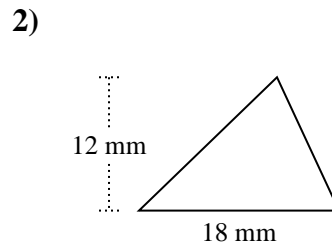
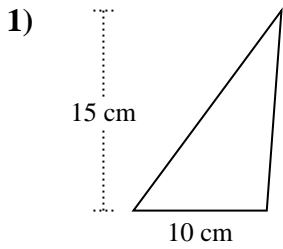


Antworten

- 1. _____
- 2. _____
- 3. _____
- 4. _____
- 5. _____
- 6. _____
- 7. _____
- 8. _____
- 9. _____
- 10. _____



Berechne die Fläche jedes Dreiecks. Die Einheiten sind nicht maßstäblich.



Antworten

1. 75 cm²
2. 108 mm²
3. 4.851 cm²
4. 82,5 km²
5. 110,5 cm²
6. 1.462,5 m²
7. 935 mm²
8. 153 mm²
9. 9 cm²
10. 14 km²



Berechne die Fläche jedes Dreiecks. Die Einheiten sind nicht maßstäblich.

1.462,5	4.851	75	110,5
153	14	82,5	108
9	935		

Antworten

1. _____
2. _____
3. _____
4. _____
5. _____
6. _____
7. _____
8. _____
9. _____
10. _____

