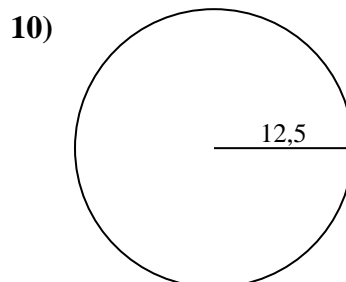
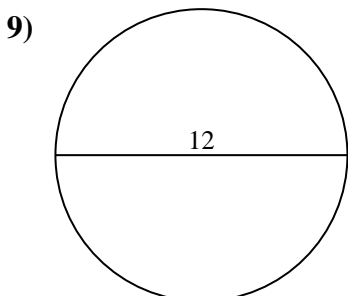
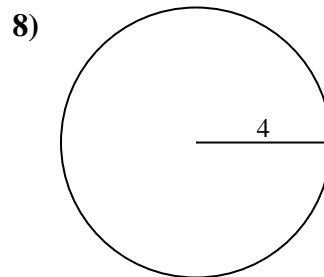
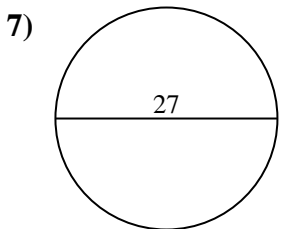
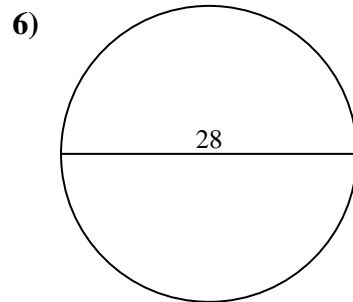
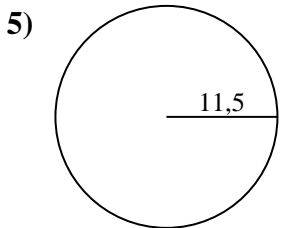
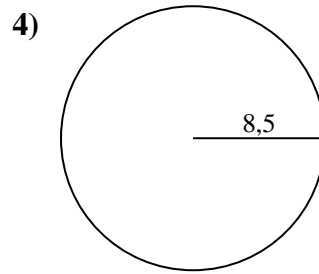
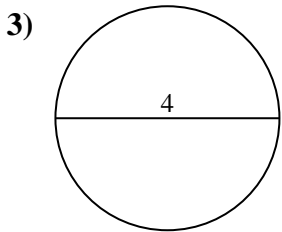
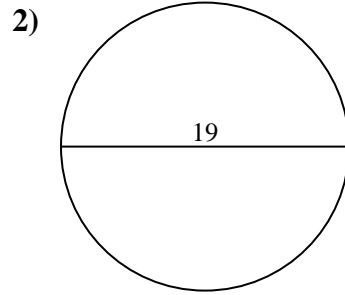
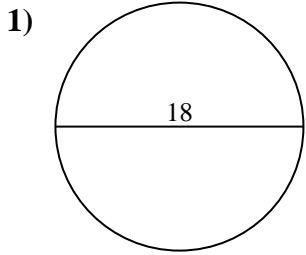




Berechne die Kreisfläche. Die Kreise sind nicht maßstäblich.

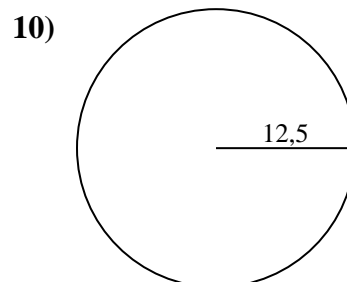
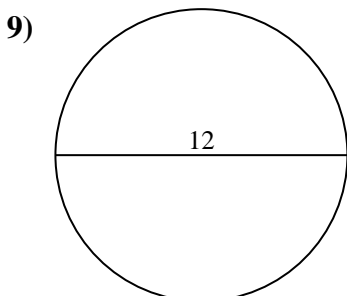
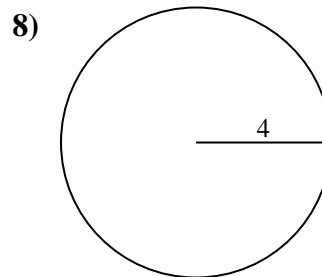
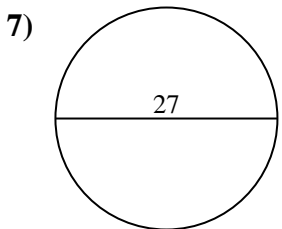
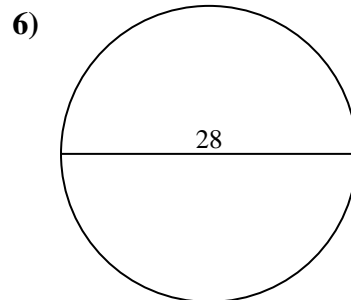
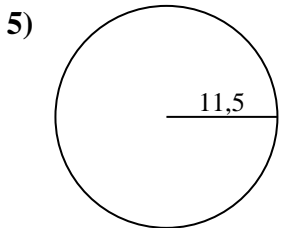
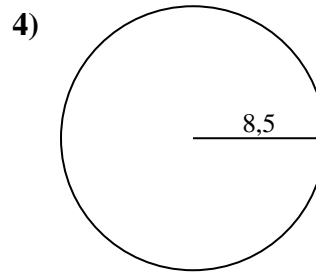
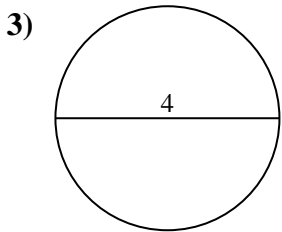
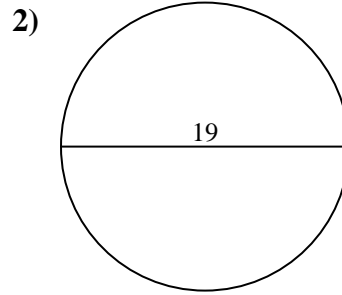
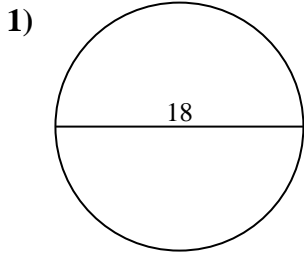


Antworten

- 1. \_\_\_\_\_
- 2. \_\_\_\_\_
- 3. \_\_\_\_\_
- 4. \_\_\_\_\_
- 5. \_\_\_\_\_
- 6. \_\_\_\_\_
- 7. \_\_\_\_\_
- 8. \_\_\_\_\_
- 9. \_\_\_\_\_
- 10. \_\_\_\_\_



Berechne die Kreisfläche. Die Kreise sind nicht maßstäblich.

**Antworten**

1. 254,47 cm<sup>2</sup>
2. 283,53 cm<sup>2</sup>
3. 12,57 cm<sup>2</sup>
4. 226,98 cm<sup>2</sup>
5. 415,48 cm<sup>2</sup>
6. 615,75 cm<sup>2</sup>
7. 572,56 cm<sup>2</sup>
8. 50,27 cm<sup>2</sup>
9. 113,1 cm<sup>2</sup>
10. 490,87 cm<sup>2</sup>



Berechne die Kreisfläche. Die Kreise sind nicht maßstäblich.

415,48 cm<sup>2</sup>

283,53 cm<sup>2</sup>

50,27 cm<sup>2</sup>

113,1 cm<sup>2</sup>

615,75 cm<sup>2</sup>

572,56 cm<sup>2</sup>

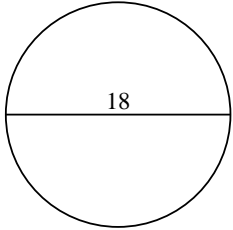
12,57 cm<sup>2</sup>

226,98 cm<sup>2</sup>

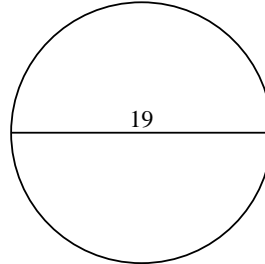
490,87 cm<sup>2</sup>

254,47 cm<sup>2</sup>

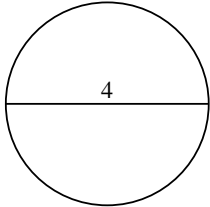
1)



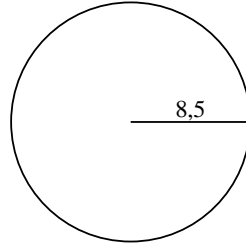
2)



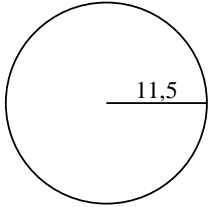
3)



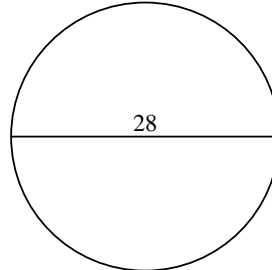
4)



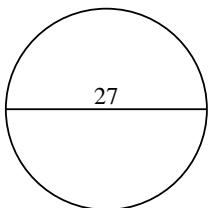
5)



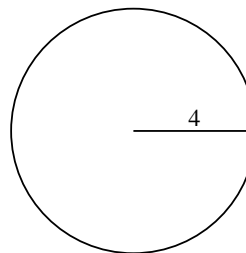
6)



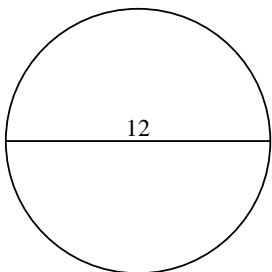
7)



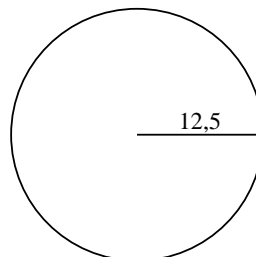
8)



9)



10)



**Antworten**

1. \_\_\_\_\_

2. \_\_\_\_\_

3. \_\_\_\_\_

4. \_\_\_\_\_

5. \_\_\_\_\_

6. \_\_\_\_\_

7. \_\_\_\_\_

8. \_\_\_\_\_

9. \_\_\_\_\_

10. \_\_\_\_\_