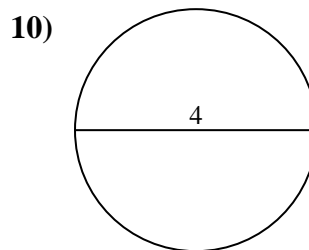
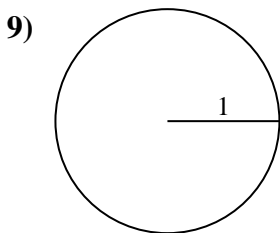
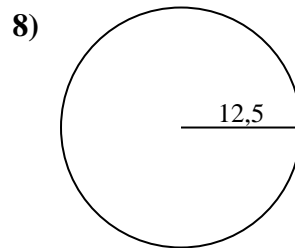
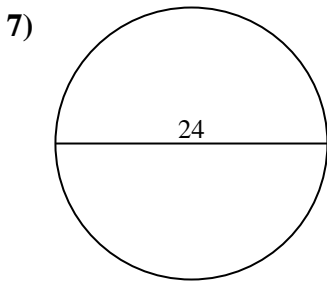
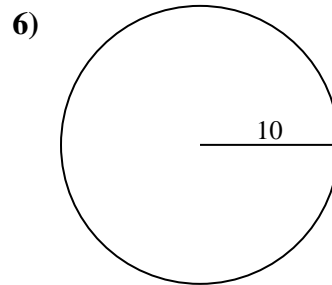
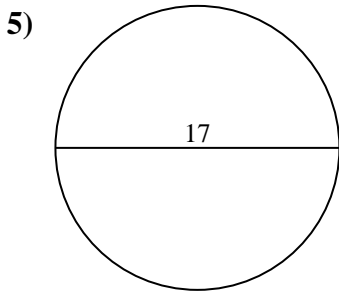
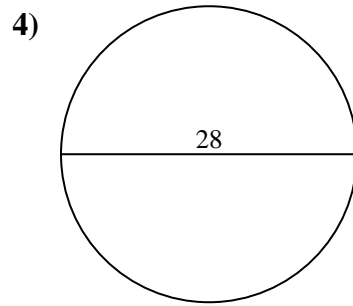
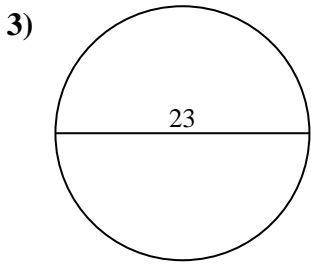
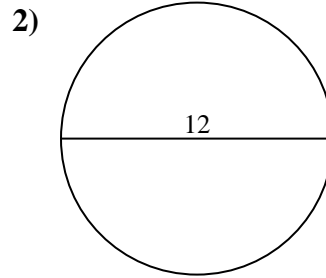
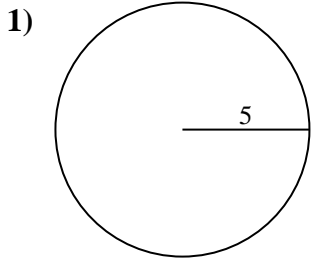




Berechne die Kreisfläche. Die Kreise sind nicht maßstäblich.

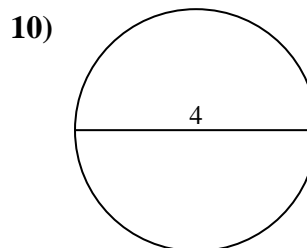
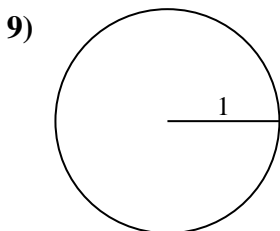
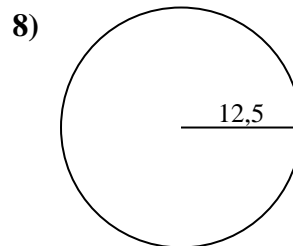
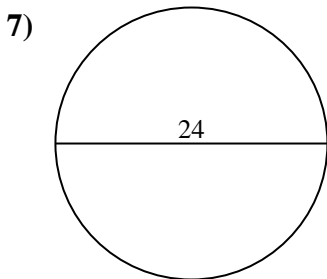
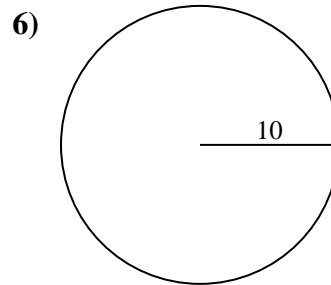
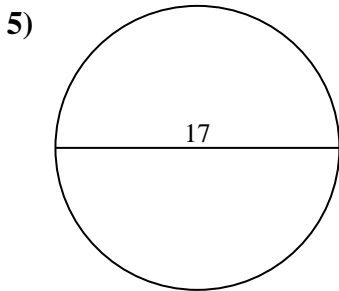
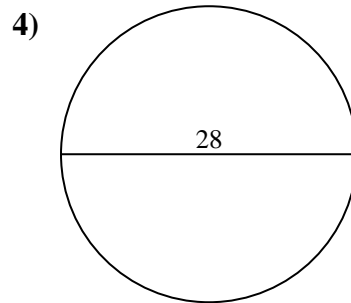
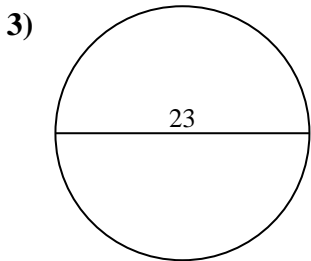
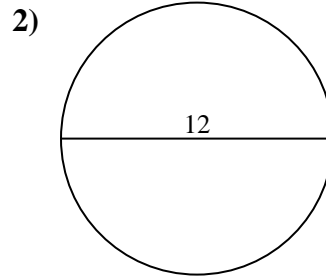
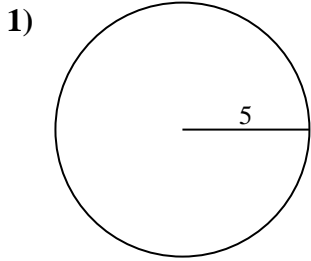


Antworten

- 1. \_\_\_\_\_
- 2. \_\_\_\_\_
- 3. \_\_\_\_\_
- 4. \_\_\_\_\_
- 5. \_\_\_\_\_
- 6. \_\_\_\_\_
- 7. \_\_\_\_\_
- 8. \_\_\_\_\_
- 9. \_\_\_\_\_
- 10. \_\_\_\_\_



Berechne die Kreisfläche. Die Kreise sind nicht maßstäblich.

**Antworten**

1. 78,54 cm<sup>2</sup>

2. 113,1 cm<sup>2</sup>

3. 415,48 cm<sup>2</sup>

4. 615,75 cm<sup>2</sup>

5. 226,98 cm<sup>2</sup>

6. 314,16 cm<sup>2</sup>

7. 452,39 cm<sup>2</sup>

8. 490,87 cm<sup>2</sup>

9. 3,14 cm<sup>2</sup>

10. 12,57 cm<sup>2</sup>



Berechne die Kreisfläche. Die Kreise sind nicht maßstäblich.

490,87 cm<sup>2</sup>

113,1 cm<sup>2</sup>

452,39 cm<sup>2</sup>

3,14 cm<sup>2</sup>

415,48 cm<sup>2</sup>

226,98 cm<sup>2</sup>

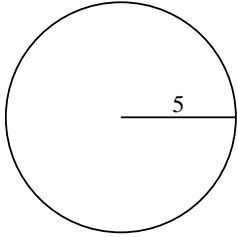
314,16 cm<sup>2</sup>

78,54 cm<sup>2</sup>

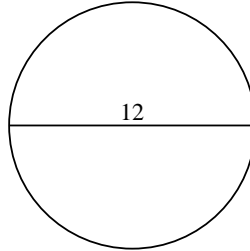
615,75 cm<sup>2</sup>

12,57 cm<sup>2</sup>

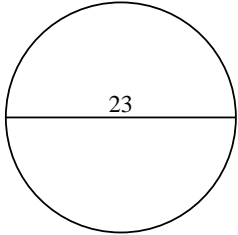
1)



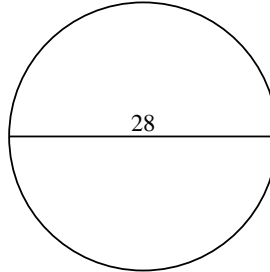
2)



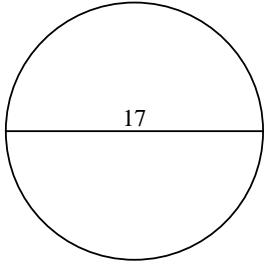
3)



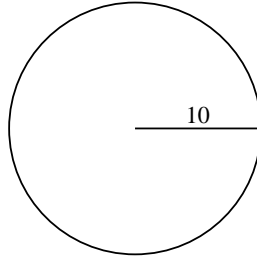
4)



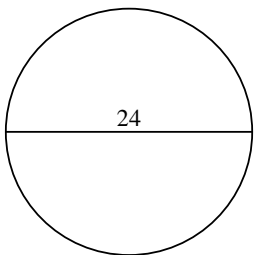
5)



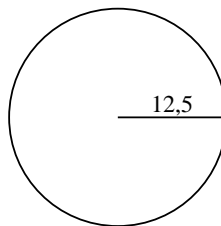
6)



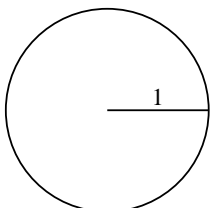
7)



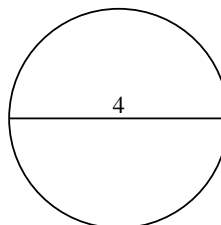
8)



9)



10)



**Antworten**

1. \_\_\_\_\_

2. \_\_\_\_\_

3. \_\_\_\_\_

4. \_\_\_\_\_

5. \_\_\_\_\_

6. \_\_\_\_\_

7. \_\_\_\_\_

8. \_\_\_\_\_

9. \_\_\_\_\_

10. \_\_\_\_\_