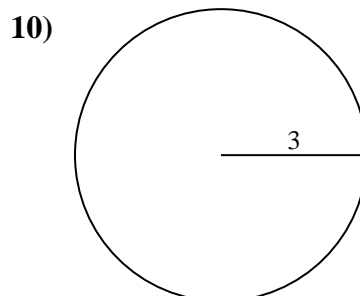
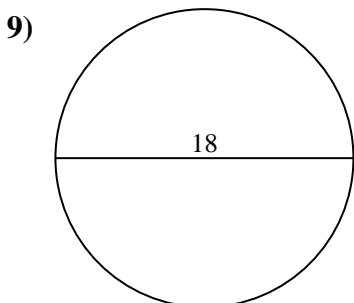
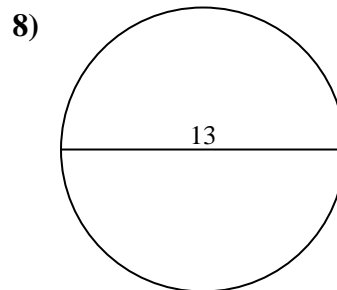
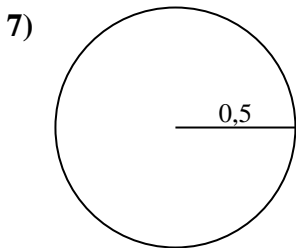
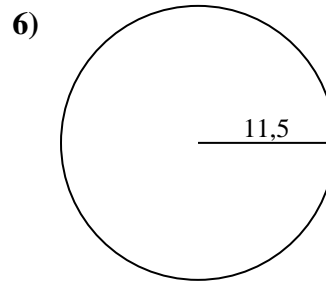
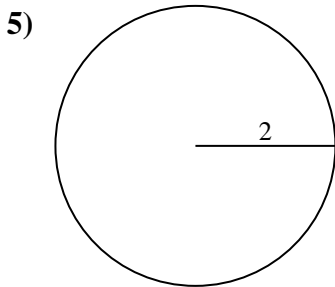
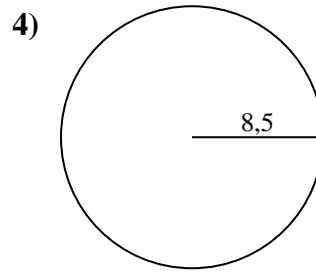
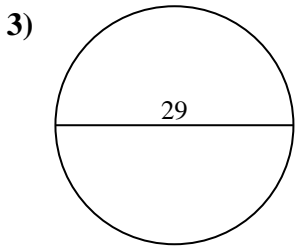
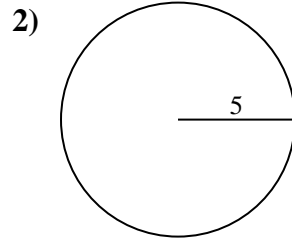
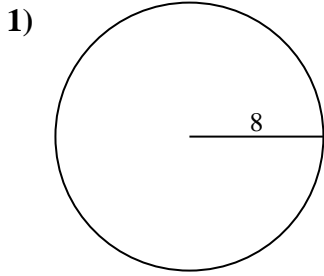




Berechne die Kreisfläche. Die Kreise sind nicht maßstäblich.

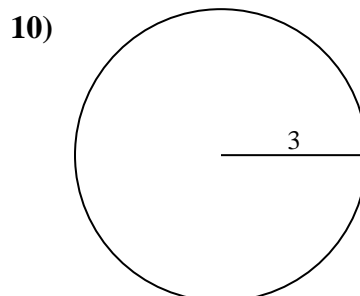
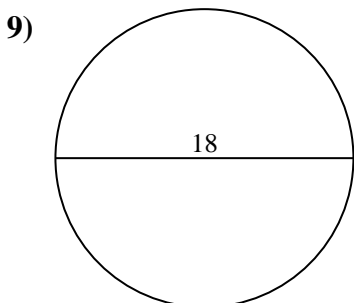
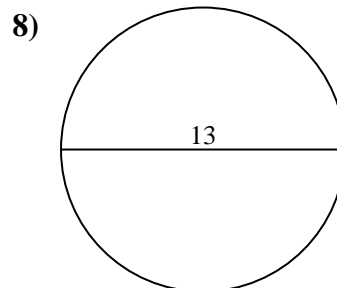
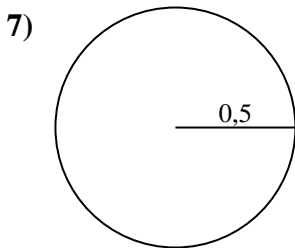
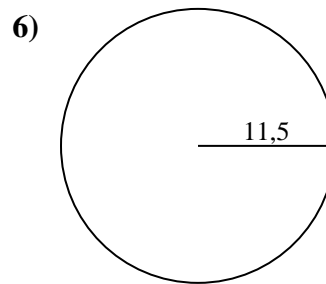
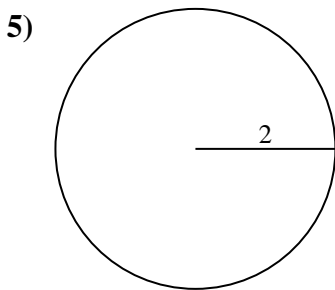
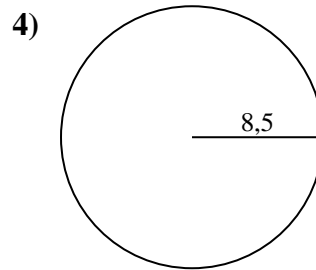
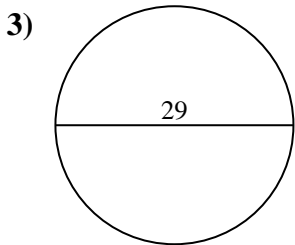
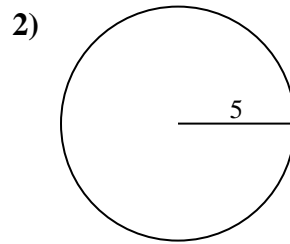
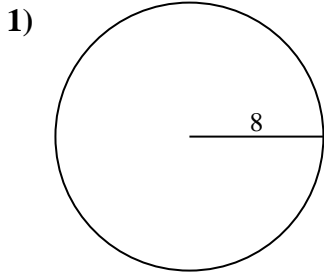


Antworten

- 1. \_\_\_\_\_
- 2. \_\_\_\_\_
- 3. \_\_\_\_\_
- 4. \_\_\_\_\_
- 5. \_\_\_\_\_
- 6. \_\_\_\_\_
- 7. \_\_\_\_\_
- 8. \_\_\_\_\_
- 9. \_\_\_\_\_
- 10. \_\_\_\_\_



Berechne die Kreisfläche. Die Kreise sind nicht maßstäblich.

**Antworten**

1. 201,06 cm<sup>2</sup>
2. 78,54 cm<sup>2</sup>
3. 660,52 cm<sup>2</sup>
4. 226,98 cm<sup>2</sup>
5. 12,57 cm<sup>2</sup>
6. 415,48 cm<sup>2</sup>
7. 0,79 cm<sup>2</sup>
8. 132,73 cm<sup>2</sup>
9. 254,47 cm<sup>2</sup>
10. 28,27 cm<sup>2</sup>

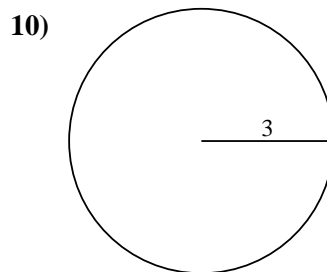
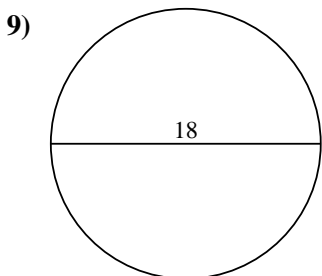
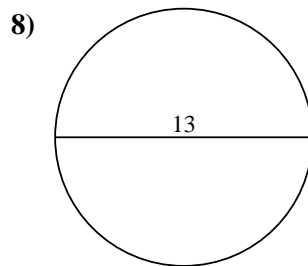
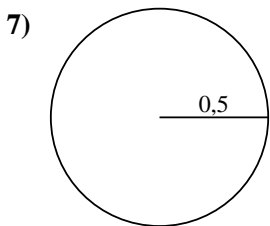
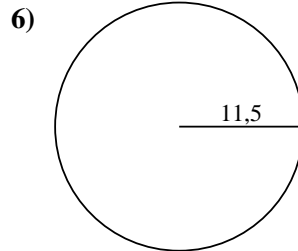
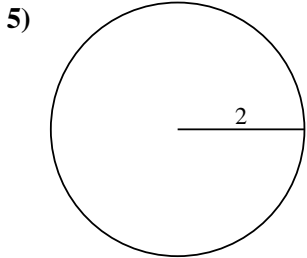
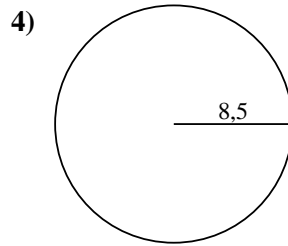
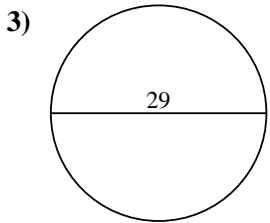
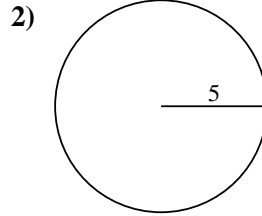
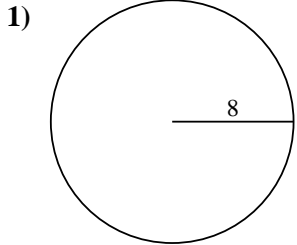


Berechne die Kreisfläche. Die Kreise sind nicht maßstäblich.

**Antworten**

660,52 cm<sup>2</sup>    28,27 cm<sup>2</sup>    78,54 cm<sup>2</sup>    12,57 cm<sup>2</sup>    254,47 cm<sup>2</sup>

0,79 cm<sup>2</sup>    201,06 cm<sup>2</sup>    132,73 cm<sup>2</sup>    415,48 cm<sup>2</sup>    226,98 cm<sup>2</sup>



- 1. \_\_\_\_\_
- 2. \_\_\_\_\_
- 3. \_\_\_\_\_
- 4. \_\_\_\_\_
- 5. \_\_\_\_\_
- 6. \_\_\_\_\_
- 7. \_\_\_\_\_
- 8. \_\_\_\_\_
- 9. \_\_\_\_\_
- 10. \_\_\_\_\_