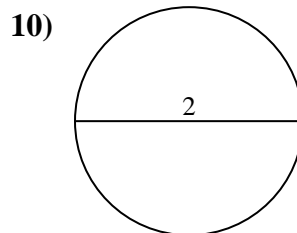
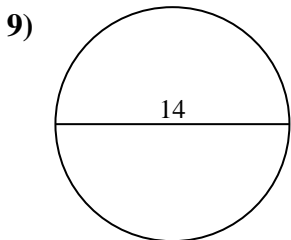
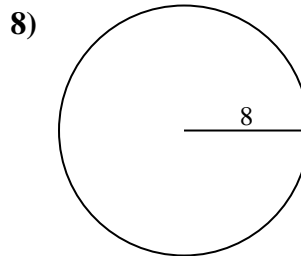
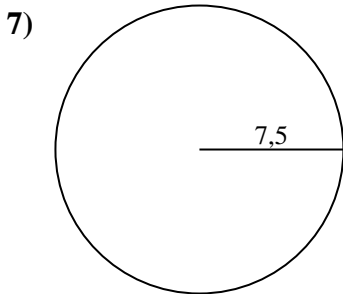
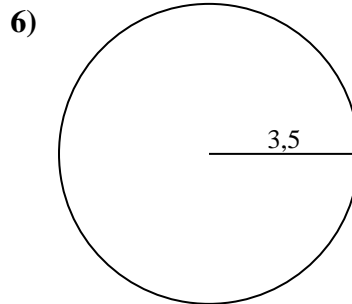
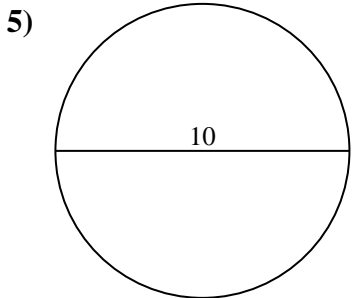
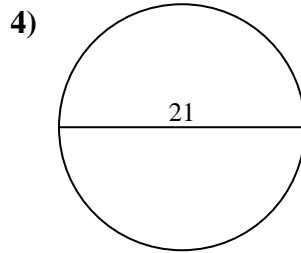
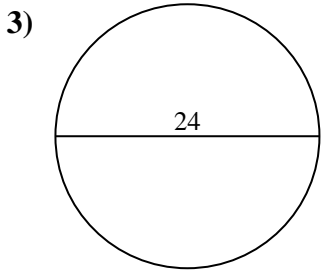
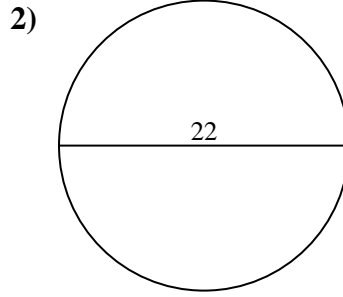
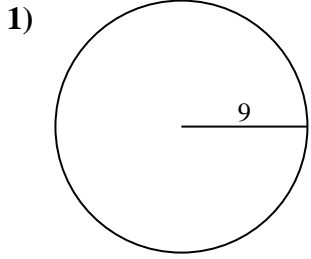




Berechne die Kreisfläche. Die Kreise sind nicht maßstäblich.

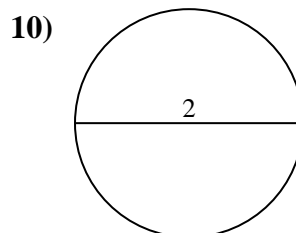
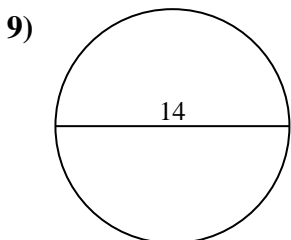
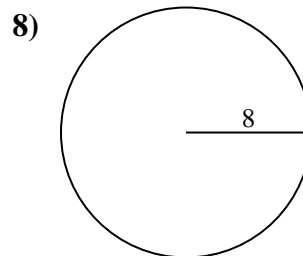
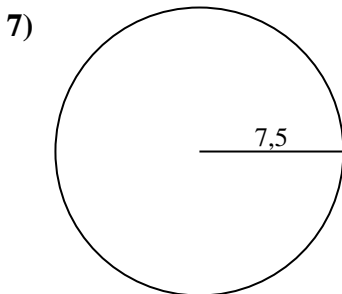
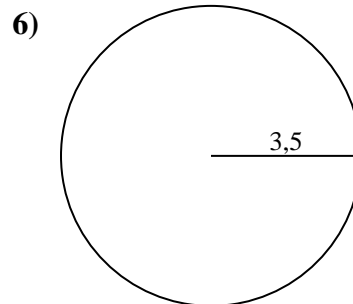
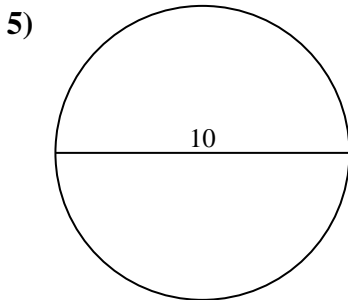
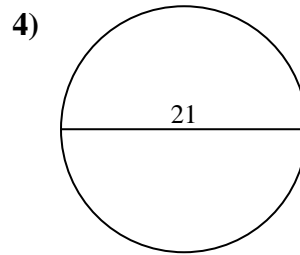
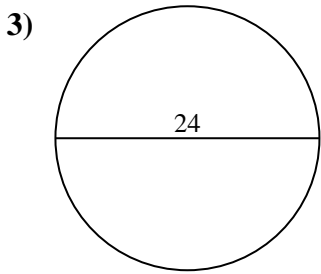
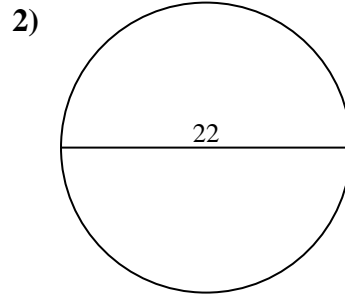
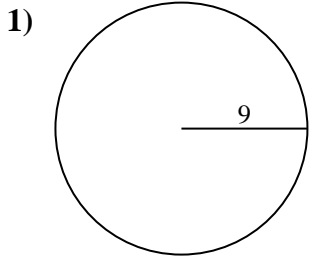


Antworten

- 1. _____
- 2. _____
- 3. _____
- 4. _____
- 5. _____
- 6. _____
- 7. _____
- 8. _____
- 9. _____
- 10. _____



Berechne die Kreisfläche. Die Kreise sind nicht maßstäblich.

**Antworten**

1. 254,47 cm²
2. 380,13 cm²
3. 452,39 cm²
4. 346,36 cm²
5. 78,54 cm²
6. 38,48 cm²
7. 176,71 cm²
8. 201,06 cm²
9. 153,94 cm²
10. 3,14 cm²



Berechne die Kreisfläche. Die Kreise sind nicht maßstäblich.

346,36 cm²

254,47 cm²

78,54 cm²

201,06 cm²

380,13 cm²

3,14 cm²

153,94 cm²

452,39 cm²

176,71 cm²

38,48 cm²

Antworten

1. _____

2. _____

3. _____

4. _____

5. _____

6. _____

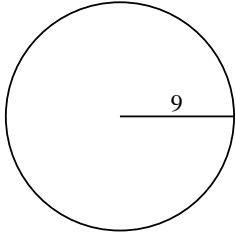
7. _____

8. _____

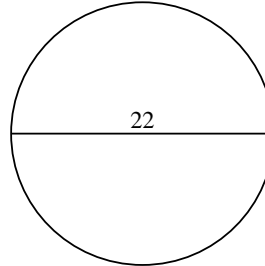
9. _____

10. _____

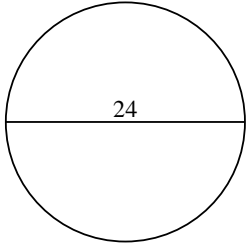
1)



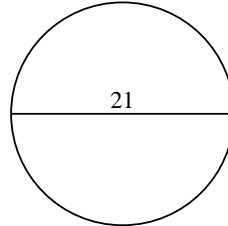
2)



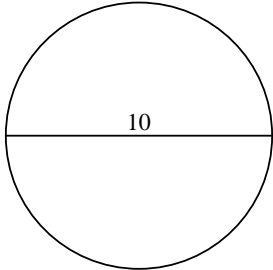
3)



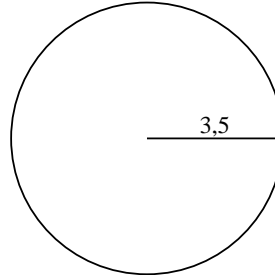
4)



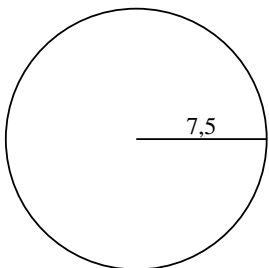
5)



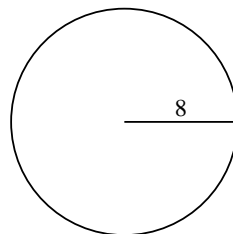
6)



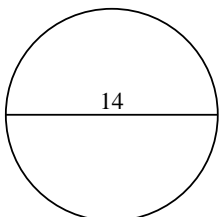
7)



8)



9)



10)

