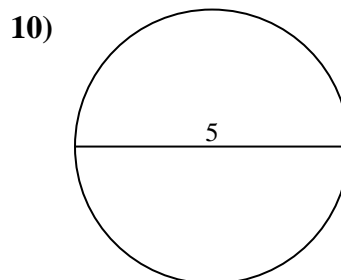
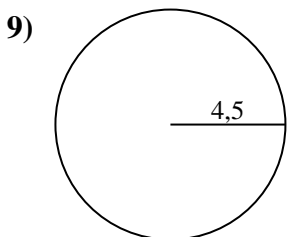
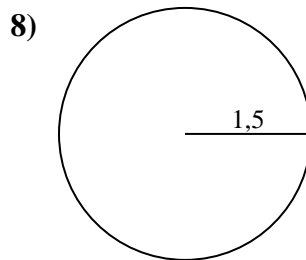
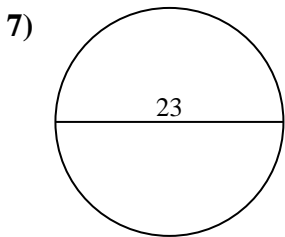
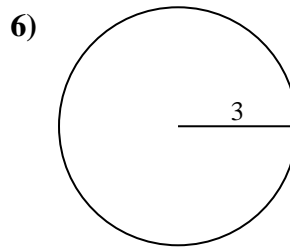
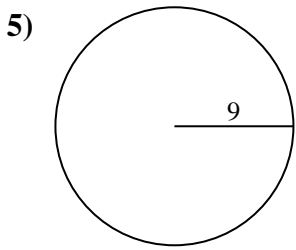
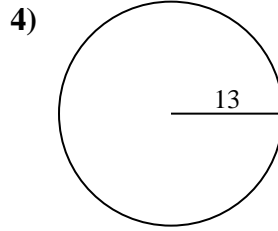
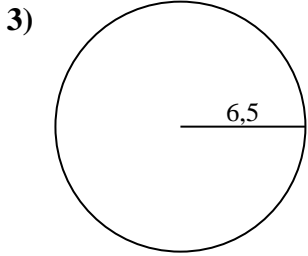
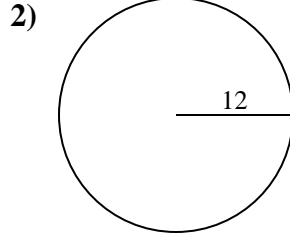
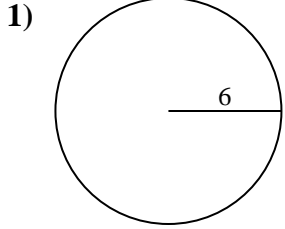




Berechne die Kreisfläche und den Kreisumfang jedes Kreises. Die Kreise sind nicht maßstäblich.



Antworten

1a. _____

1c. _____

2a. _____

2c. _____

3a. _____

3c. _____

4a. _____

4c. _____

5a. _____

5c. _____

6a. _____

6c. _____

7a. _____

7c. _____

8a. _____

8c. _____

9a. _____

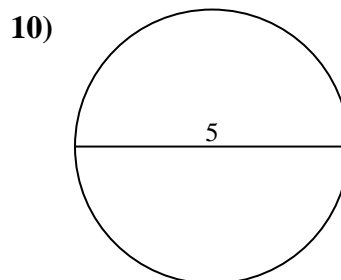
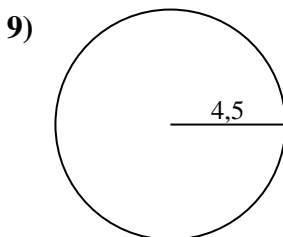
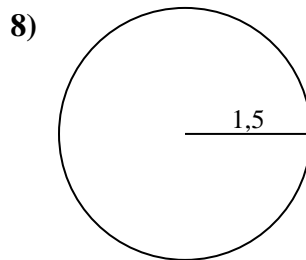
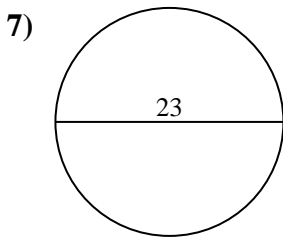
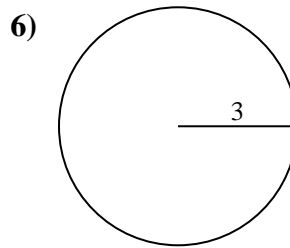
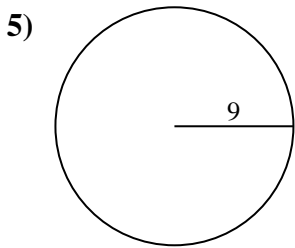
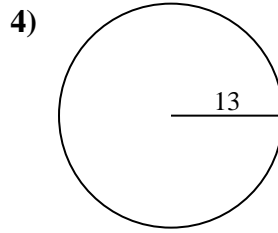
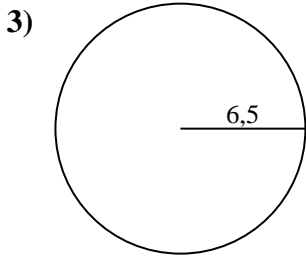
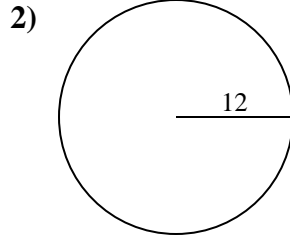
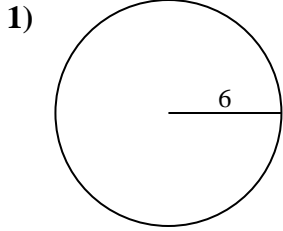
9c. _____

10a. _____

10c. _____



Berechne die Kreisfläche und den Kreisumfang jedes Kreises. Die Kreise sind nicht maßstäblich.



Antworten

1a. 113,1 cm²

1c. 37,7 cm

2a. 452,39 cm²

2c. 75,4 cm

3a. 132,73 cm²

3c. 40,84 cm

4a. 530,93 cm²

4c. 81,68 cm

5a. 254,47 cm²

5c. 56,55 cm

6a. 28,27 cm²

6c. 18,85 cm

7a. 415,48 cm²

7c. 72,26 cm

8a. 7,07 cm²

8c. 9,42 cm

9a. 63,62 cm²

9c. 28,27 cm

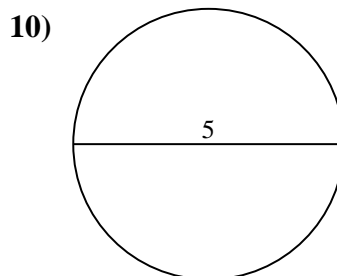
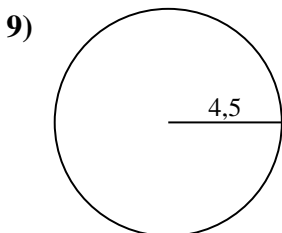
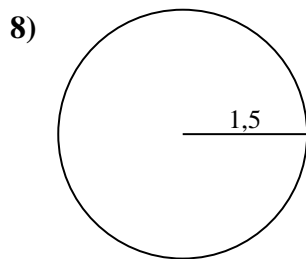
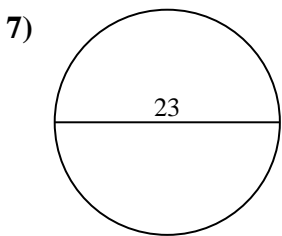
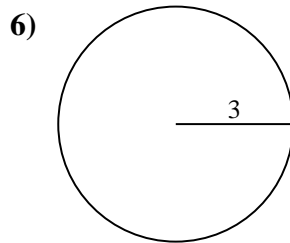
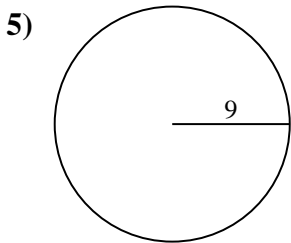
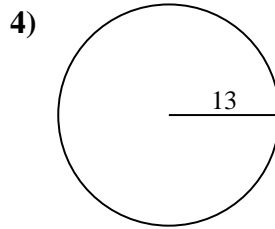
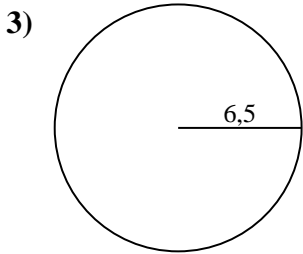
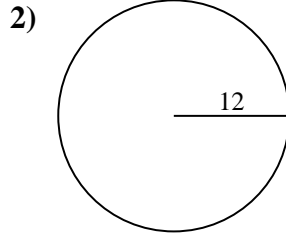
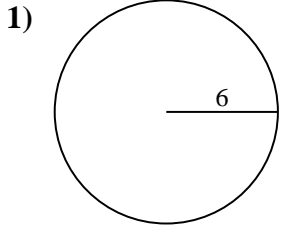
10a. 19,63 cm²

10c. 15,71 cm



Berechne die Kreisfläche und den Kreisumfang jedes Kreises. Die Kreise sind nicht maßstäblich.

56,55 cm	81,68 cm	19,63 cm ²	415,48 cm ²	15,71 cm
254,47 cm ²	18,85 cm	530,93 cm ²	40,84 cm	132,73 cm ²
63,62 cm ²	75,4 cm	28,27 cm	72,26 cm	9,42 cm
7,07 cm ²	28,27 cm ²	452,39 cm ²	113,1 cm ²	37,7 cm



Antworten

1a. _____

1c. _____

2a. _____

2c. _____

3a. _____

3c. _____

4a. _____

4c. _____

5a. _____

5c. _____

6a. _____

6c. _____

7a. _____

7c. _____

8a. _____

8c. _____

9a. _____

9c. _____

10a. _____

10c. _____