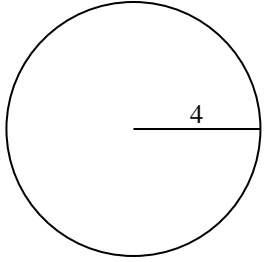


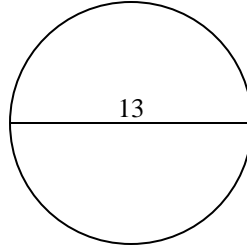


Berechne die Kreisfläche und den Kreisumfang jedes Kreises. Die Kreise sind nicht maßstäblich.

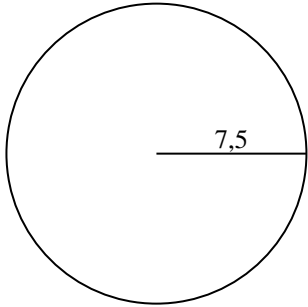
1)



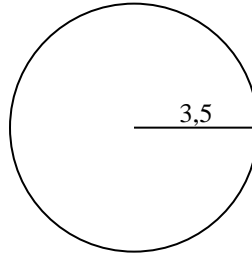
2)



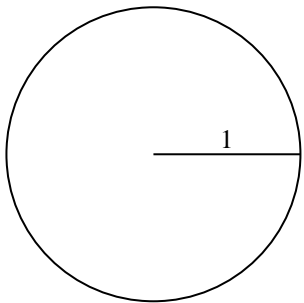
3)



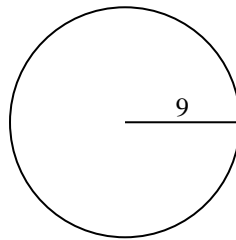
4)



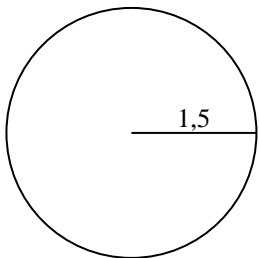
5)



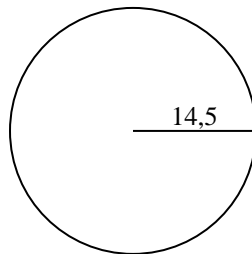
6)



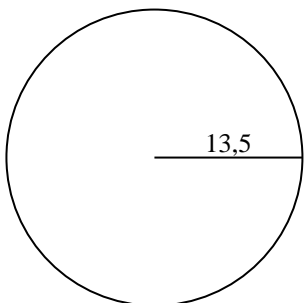
7)



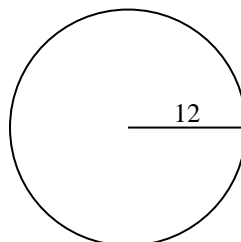
8)



9)



10)



Antworten

1a. \_\_\_\_\_

1c. \_\_\_\_\_

2a. \_\_\_\_\_

2c. \_\_\_\_\_

3a. \_\_\_\_\_

3c. \_\_\_\_\_

4a. \_\_\_\_\_

4c. \_\_\_\_\_

5a. \_\_\_\_\_

5c. \_\_\_\_\_

6a. \_\_\_\_\_

6c. \_\_\_\_\_

7a. \_\_\_\_\_

7c. \_\_\_\_\_

8a. \_\_\_\_\_

8c. \_\_\_\_\_

9a. \_\_\_\_\_

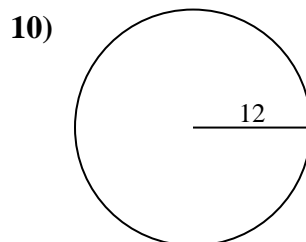
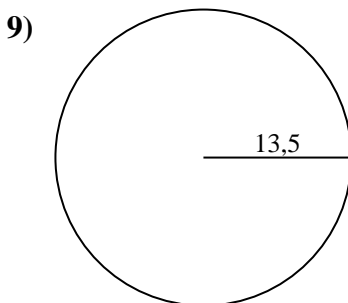
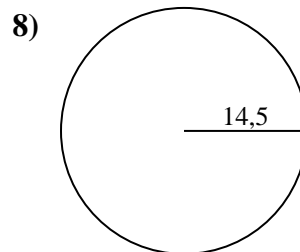
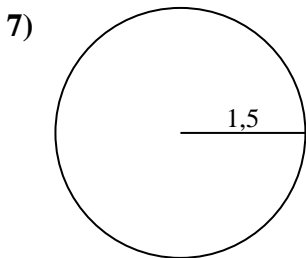
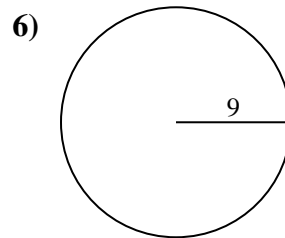
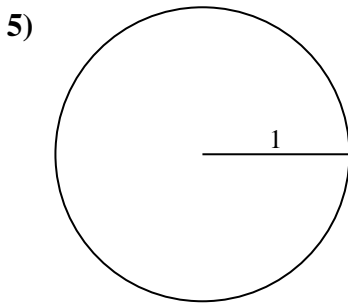
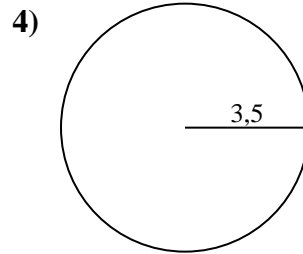
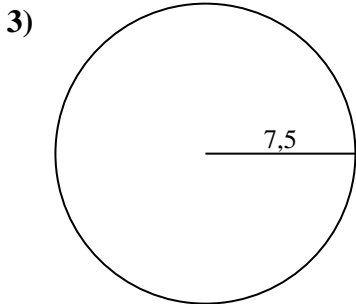
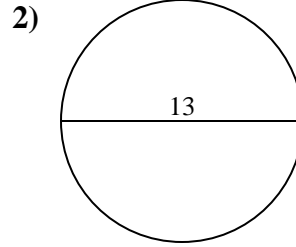
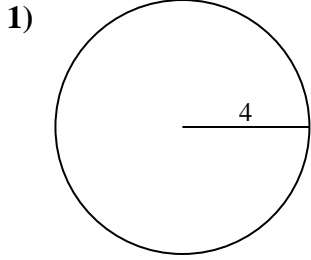
9c. \_\_\_\_\_

10a. \_\_\_\_\_

10c. \_\_\_\_\_



Berechne die Kreisfläche und den Kreisumfang jedes Kreises. Die Kreise sind nicht maßstäblich.

**Antworten**

1a. 50,27 cm<sup>2</sup>

1c. 25,13 cm

2a. 132,73 cm<sup>2</sup>

2c. 40,84 cm

3a. 176,71 cm<sup>2</sup>

3c. 47,12 cm

4a. 38,48 cm<sup>2</sup>

4c. 21,99 cm

5a. 3,14 cm<sup>2</sup>

5c. 6,28 cm

6a. 254,47 cm<sup>2</sup>

6c. 56,55 cm

7a. 7,07 cm<sup>2</sup>

7c. 9,42 cm

8a. 660,52 cm<sup>2</sup>

8c. 91,11 cm

9a. 572,56 cm<sup>2</sup>

9c. 84,82 cm

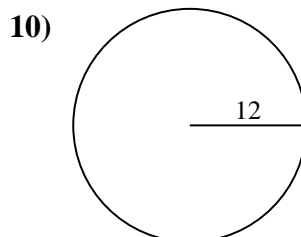
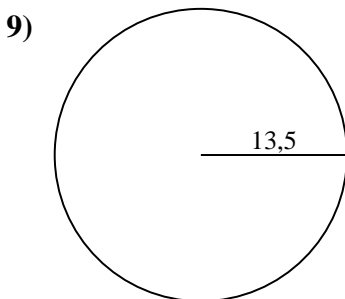
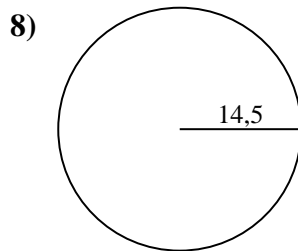
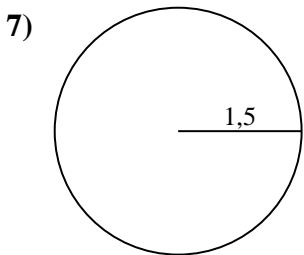
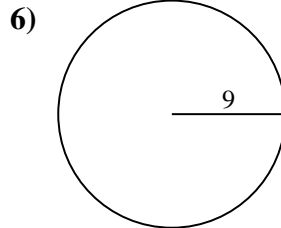
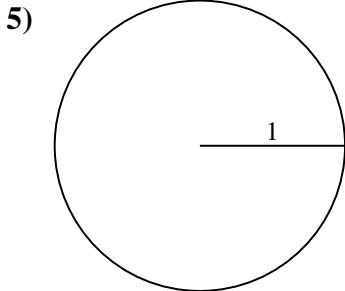
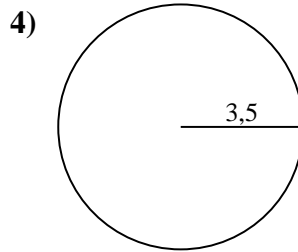
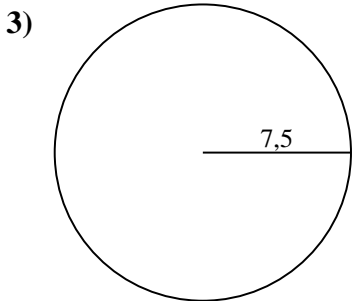
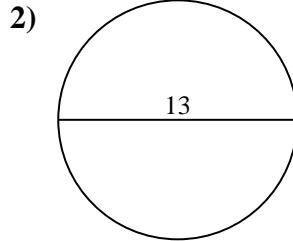
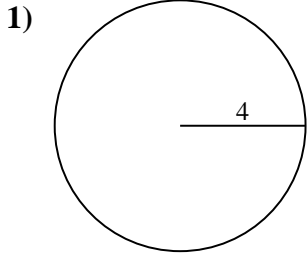
10a. 452,39 cm<sup>2</sup>

10c. 75,4 cm



Berechne die Kreisfläche und den Kreisumfang jedes Kreises. Die Kreise sind nicht maßstäblich.

6,28 cm	50,27 cm <sup>2</sup>	38,48 cm <sup>2</sup>	572,56 cm <sup>2</sup>	254,47 cm <sup>2</sup>
176,71 cm <sup>2</sup>	452,39 cm <sup>2</sup>	84,82 cm	3,14 cm <sup>2</sup>	132,73 cm <sup>2</sup>
660,52 cm <sup>2</sup>	91,11 cm	47,12 cm	25,13 cm	40,84 cm
9,42 cm	21,99 cm	75,4 cm	7,07 cm <sup>2</sup>	56,55 cm



Antworten

1a. \_\_\_\_\_

1c. \_\_\_\_\_

2a. \_\_\_\_\_

2c. \_\_\_\_\_

3a. \_\_\_\_\_

3c. \_\_\_\_\_

4a. \_\_\_\_\_

4c. \_\_\_\_\_

5a. \_\_\_\_\_

5c. \_\_\_\_\_

6a. \_\_\_\_\_

6c. \_\_\_\_\_

7a. \_\_\_\_\_

7c. \_\_\_\_\_

8a. \_\_\_\_\_

8c. \_\_\_\_\_

9a. \_\_\_\_\_

9c. \_\_\_\_\_

10a. \_\_\_\_\_

10c. \_\_\_\_\_