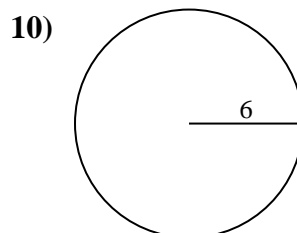
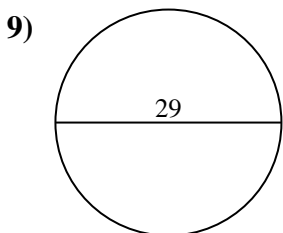
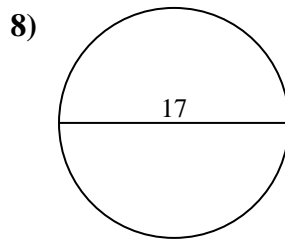
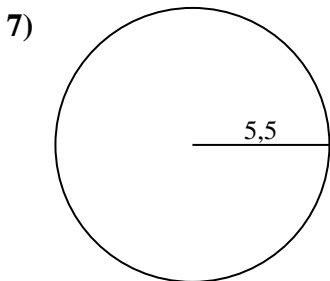
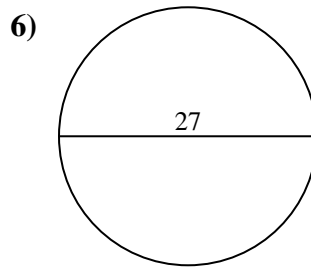
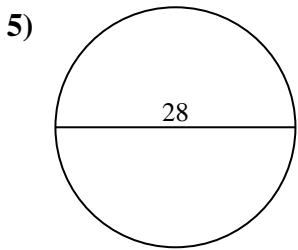
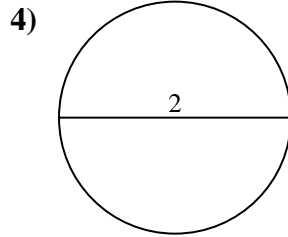
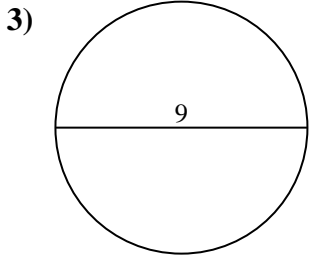
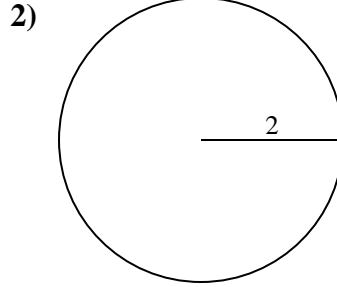
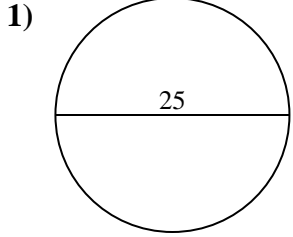




Berechne die Kreisfläche und den Kreisumfang jedes Kreises. Die Kreise sind nicht maßstäblich.



Antworten

1a. \_\_\_\_\_

1c. \_\_\_\_\_

2a. \_\_\_\_\_

2c. \_\_\_\_\_

3a. \_\_\_\_\_

3c. \_\_\_\_\_

4a. \_\_\_\_\_

4c. \_\_\_\_\_

5a. \_\_\_\_\_

5c. \_\_\_\_\_

6a. \_\_\_\_\_

6c. \_\_\_\_\_

7a. \_\_\_\_\_

7c. \_\_\_\_\_

8a. \_\_\_\_\_

8c. \_\_\_\_\_

9a. \_\_\_\_\_

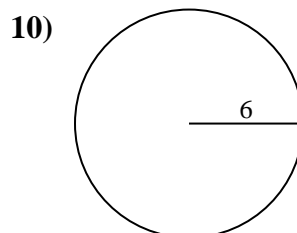
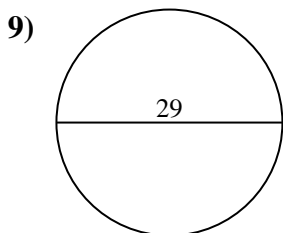
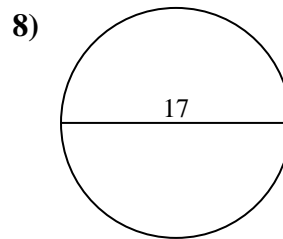
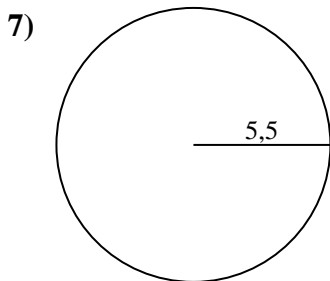
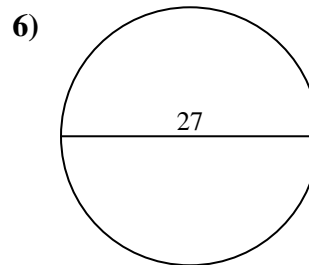
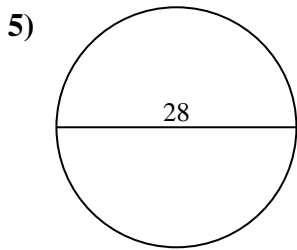
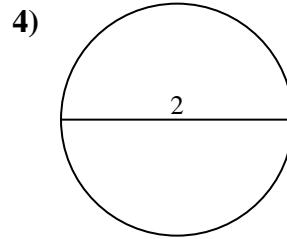
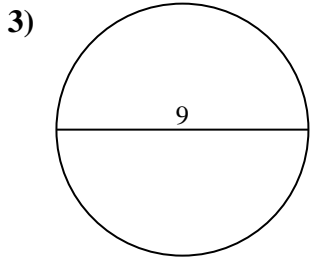
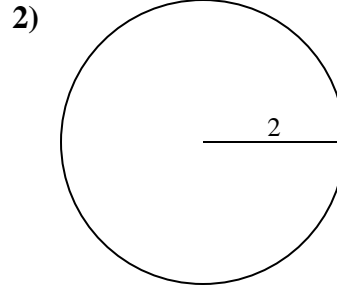
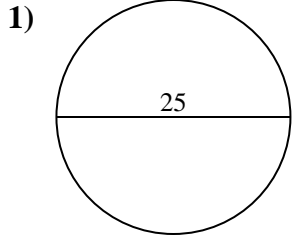
9c. \_\_\_\_\_

10a. \_\_\_\_\_

10c. \_\_\_\_\_



Berechne die Kreisfläche und den Kreisumfang jedes Kreises. Die Kreise sind nicht maßstäblich.

**Antworten**

1a. 490,87 cm<sup>2</sup>

1c. 78,54 cm

2a. 12,57 cm<sup>2</sup>

2c. 12,57 cm

3a. 63,62 cm<sup>2</sup>

3c. 28,27 cm

4a. 3,14 cm<sup>2</sup>

4c. 6,28 cm

5a. 615,75 cm<sup>2</sup>

5c. 87,96 cm

6a. 572,56 cm<sup>2</sup>

6c. 84,82 cm

7a. 95,03 cm<sup>2</sup>

7c. 34,56 cm

8a. 226,98 cm<sup>2</sup>

8c. 53,41 cm

9a. 660,52 cm<sup>2</sup>

9c. 91,11 cm

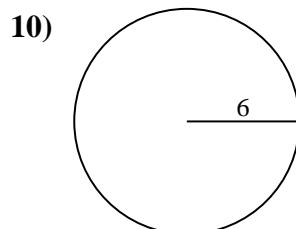
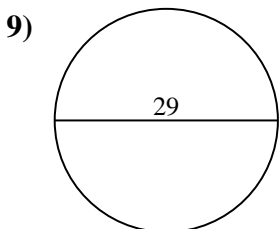
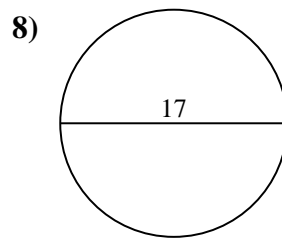
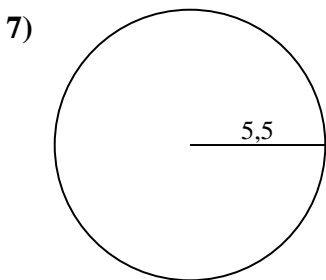
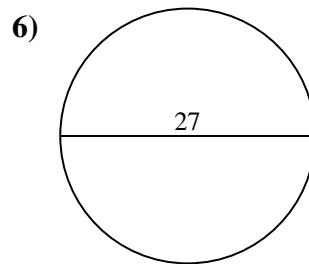
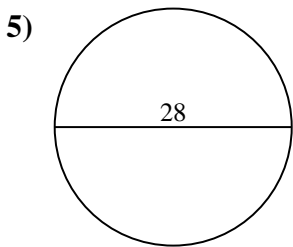
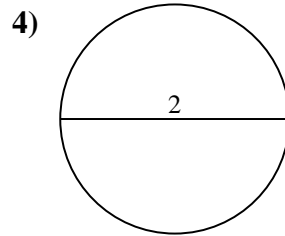
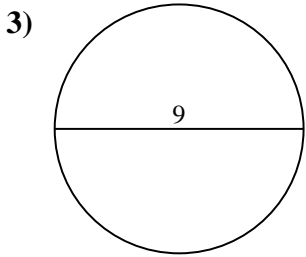
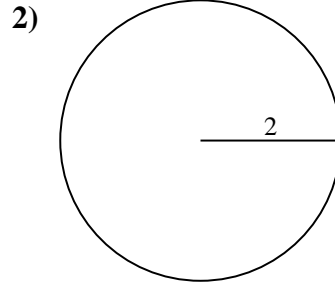
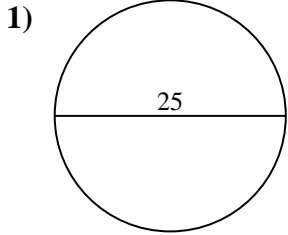
10a. 113,1 cm<sup>2</sup>

10c. 37,7 cm



Berechne die Kreisfläche und den Kreisumfang jedes Kreises. Die Kreise sind nicht maßstäblich.

37,7 cm	3,14 cm <sup>2</sup>	490,87 cm <sup>2</sup>	660,52 cm <sup>2</sup>	78,54 cm
6,28 cm	12,57 cm <sup>2</sup>	615,75 cm <sup>2</sup>	34,56 cm	91,11 cm
113,1 cm <sup>2</sup>	12,57 cm	95,03 cm <sup>2</sup>	28,27 cm	53,41 cm
63,62 cm <sup>2</sup>	84,82 cm	87,96 cm	572,56 cm <sup>2</sup>	226,98 cm <sup>2</sup>



Antworten

1a. \_\_\_\_\_

1c. \_\_\_\_\_

2a. \_\_\_\_\_

2c. \_\_\_\_\_

3a. \_\_\_\_\_

3c. \_\_\_\_\_

4a. \_\_\_\_\_

4c. \_\_\_\_\_

5a. \_\_\_\_\_

5c. \_\_\_\_\_

6a. \_\_\_\_\_

6c. \_\_\_\_\_

7a. \_\_\_\_\_

7c. \_\_\_\_\_

8a. \_\_\_\_\_

8c. \_\_\_\_\_

9a. \_\_\_\_\_

9c. \_\_\_\_\_

10a. \_\_\_\_\_

10c. \_\_\_\_\_