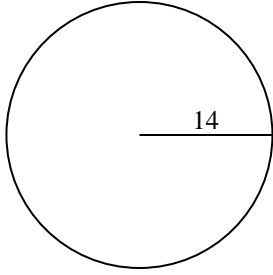


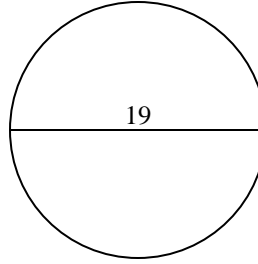


Berechne die Kreisfläche und den Kreisumfang jedes Kreises. Die Kreise sind nicht maßstäblich.

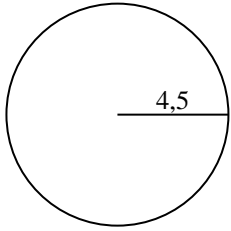
1)



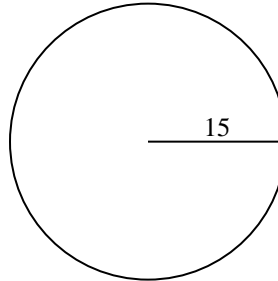
2)



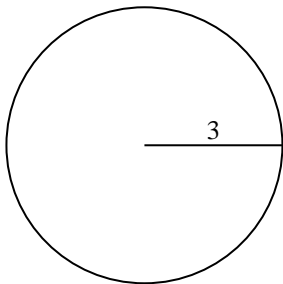
3)



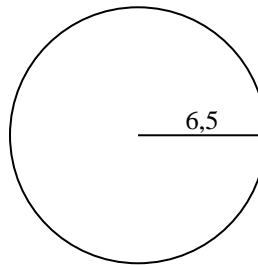
4)



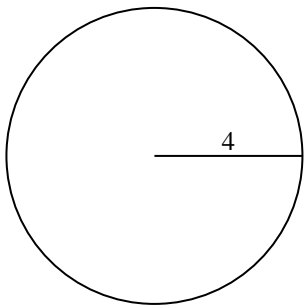
5)



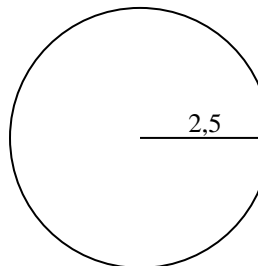
6)



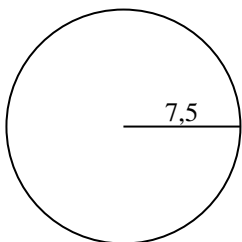
7)



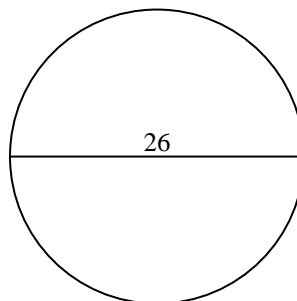
8)



9)



10)



Antworten

1a. _____

1c. _____

2a. _____

2c. _____

3a. _____

3c. _____

4a. _____

4c. _____

5a. _____

5c. _____

6a. _____

6c. _____

7a. _____

7c. _____

8a. _____

8c. _____

9a. _____

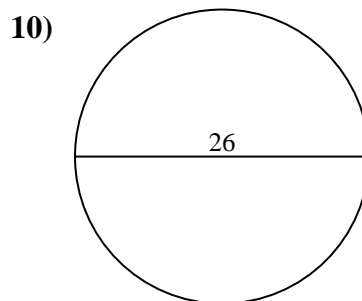
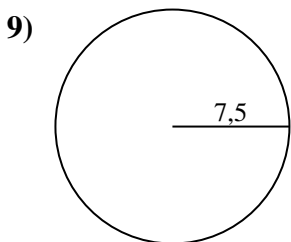
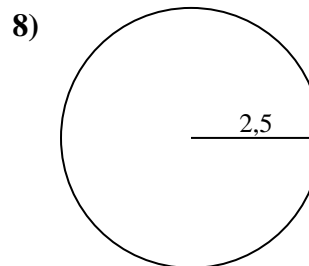
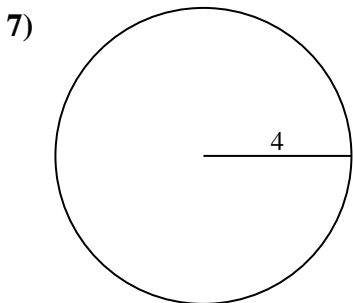
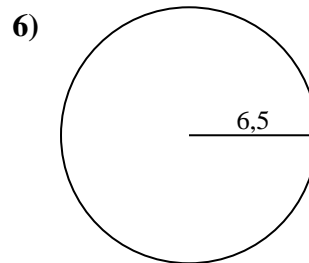
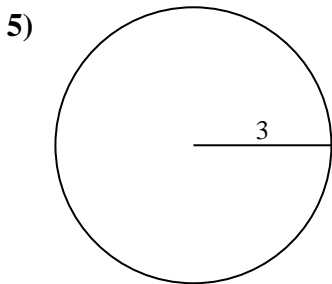
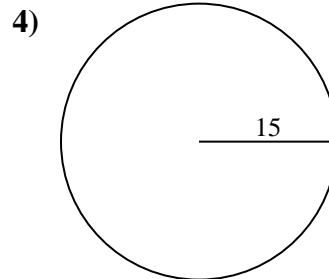
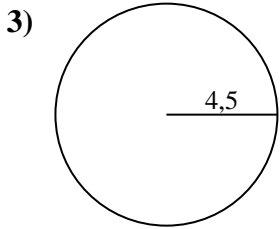
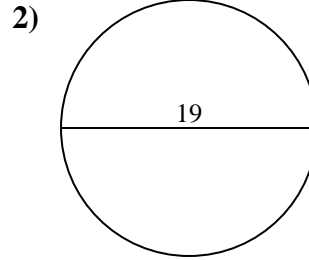
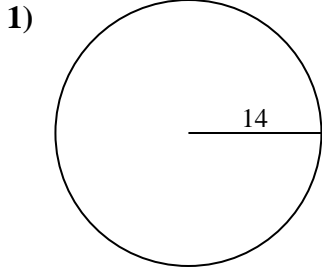
9c. _____

10a. _____

10c. _____



Berechne die Kreisfläche und den Kreisumfang jedes Kreises. Die Kreise sind nicht maßstäblich.

**Antworten**

1a. **615,75 cm²**

1c. **87,96 cm**

2a. **283,53 cm²**

2c. **59,69 cm**

3a. **63,62 cm²**

3c. **28,27 cm**

4a. **706,86 cm²**

4c. **94,25 cm**

5a. **28,27 cm²**

5c. **18,85 cm**

6a. **132,73 cm²**

6c. **40,84 cm**

7a. **50,27 cm²**

7c. **25,13 cm**

8a. **19,63 cm²**

8c. **15,71 cm**

9a. **176,71 cm²**

9c. **47,12 cm**

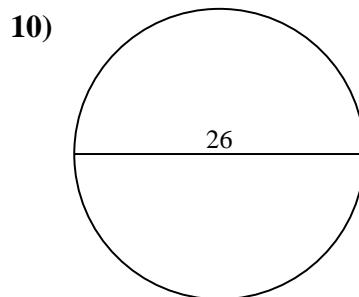
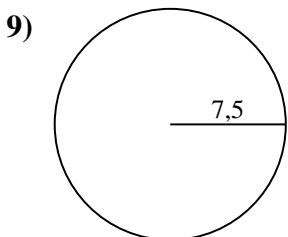
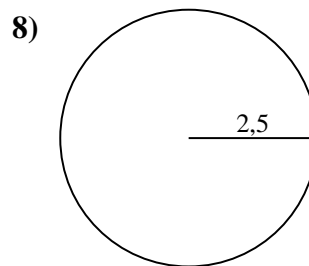
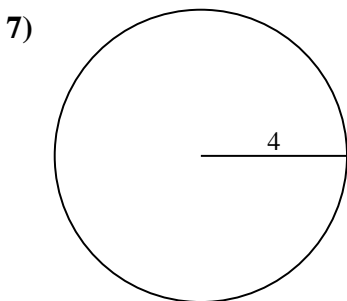
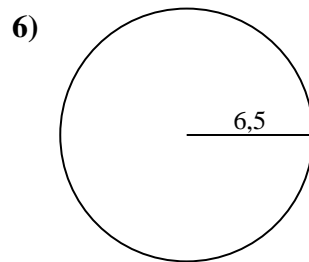
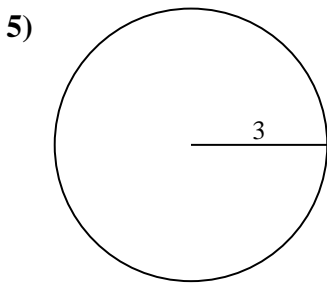
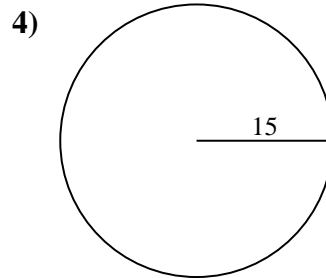
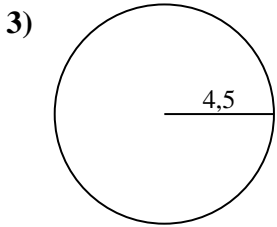
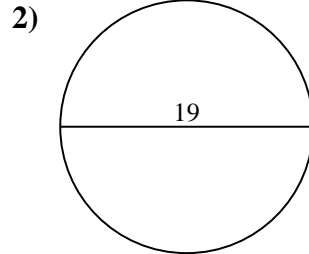
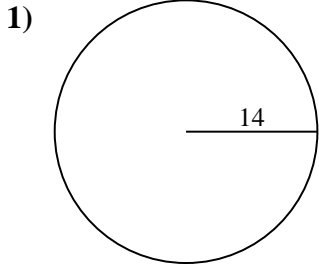
10a. **530,93 cm²**

10c. **81,68 cm**



Berechne die Kreisfläche und den Kreisumfang jedes Kreises. Die Kreise sind nicht maßstäblich.

25,13 cm	47,12 cm	19,63 cm ²	283,53 cm ²	15,71 cm
63,62 cm ²	40,84 cm	530,93 cm ²	59,69 cm	28,27 cm
50,27 cm ²	81,68 cm	87,96 cm	615,75 cm ²	28,27 cm ²
94,25 cm	706,86 cm ²	18,85 cm	176,71 cm ²	132,73 cm ²



Antworten

1a. _____

1c. _____

2a. _____

2c. _____

3a. _____

3c. _____

4a. _____

4c. _____

5a. _____

5c. _____

6a. _____

6c. _____

7a. _____

7c. _____

8a. _____

8c. _____

9a. _____

9c. _____

10a. _____

10c. _____