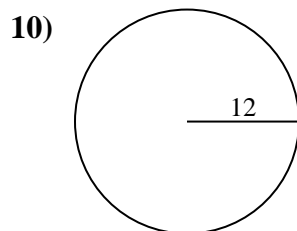
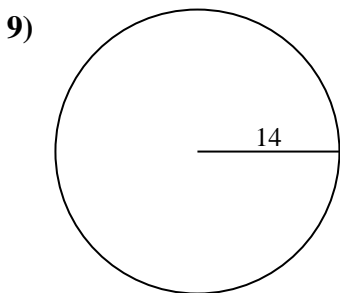
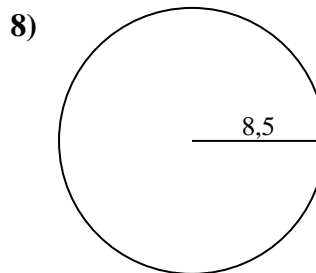
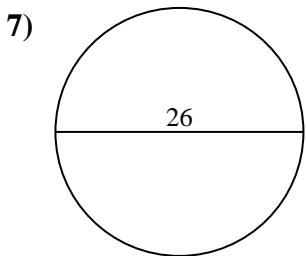
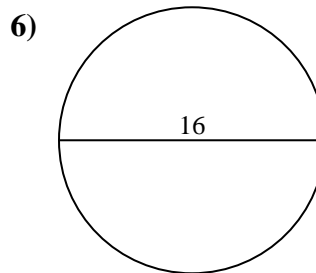
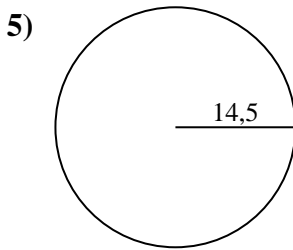
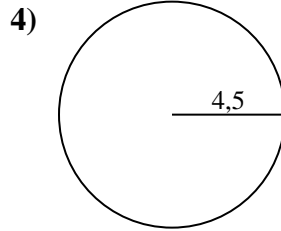
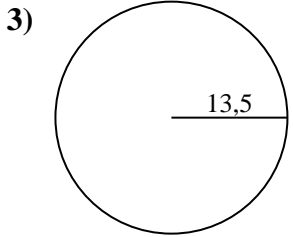
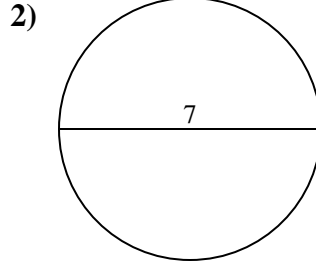
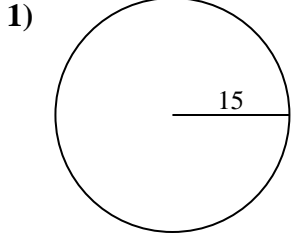




Berechne die Kreisfläche und den Kreisumfang jedes Kreises. Die Kreise sind nicht maßstäblich.



Antworten

1a. _____

1c. _____

2a. _____

2c. _____

3a. _____

3c. _____

4a. _____

4c. _____

5a. _____

5c. _____

6a. _____

6c. _____

7a. _____

7c. _____

8a. _____

8c. _____

9a. _____

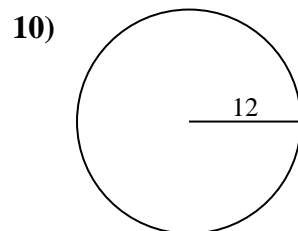
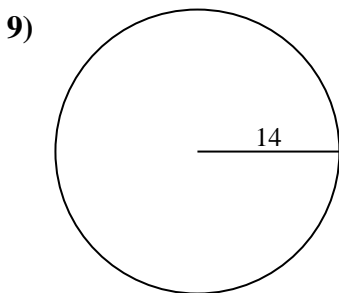
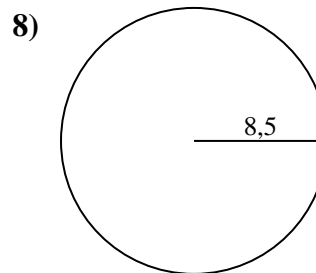
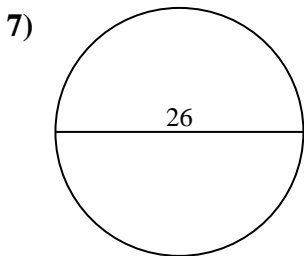
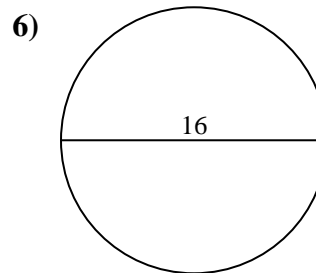
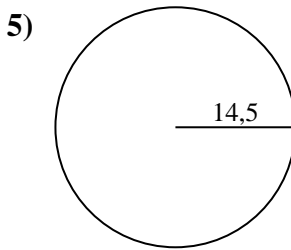
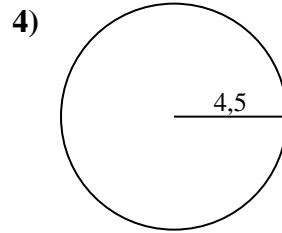
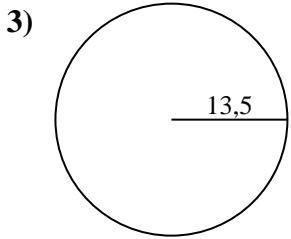
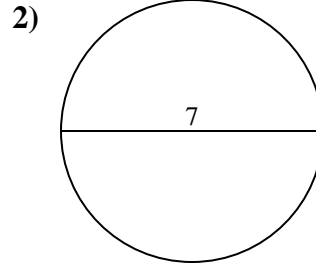
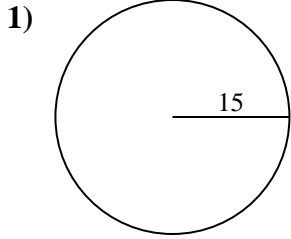
9c. _____

10a. _____

10c. _____



Berechne die Kreisfläche und den Kreisumfang jedes Kreises. Die Kreise sind nicht maßstäblich.

**Antworten**

1a. 706,86 cm²

1c. 94,25 cm

2a. 38,48 cm²

2c. 21,99 cm

3a. 572,56 cm²

3c. 84,82 cm

4a. 63,62 cm²

4c. 28,27 cm

5a. 660,52 cm²

5c. 91,11 cm

6a. 201,06 cm²

6c. 50,27 cm

7a. 530,93 cm²

7c. 81,68 cm

8a. 226,98 cm²

8c. 53,41 cm

9a. 615,75 cm²

9c. 87,96 cm

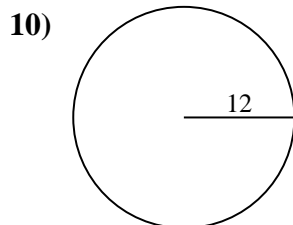
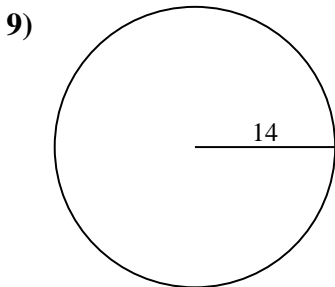
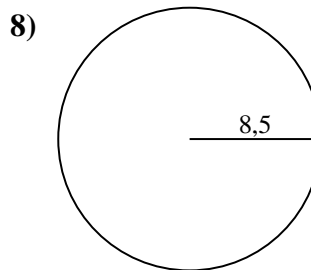
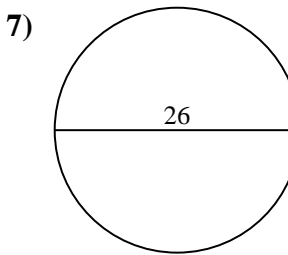
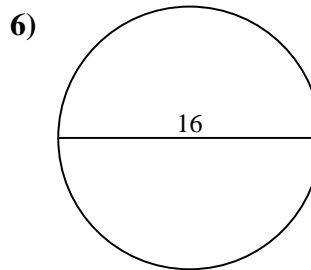
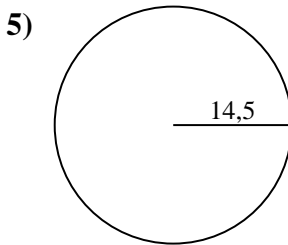
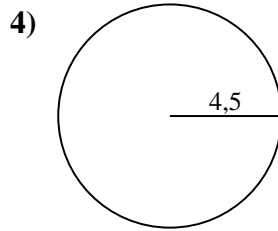
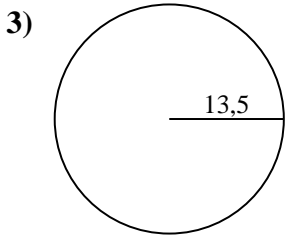
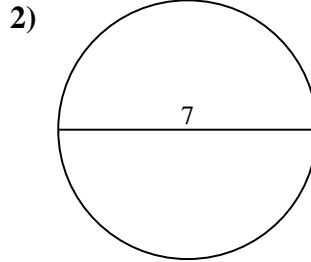
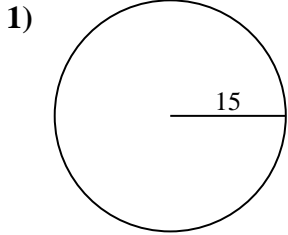
10a. 452,39 cm²

10c. 75,4 cm



Berechne die Kreisfläche und den Kreisumfang jedes Kreises. Die Kreise sind nicht maßstäblich.

452,39 cm ²	94,25 cm	706,86 cm ²	226,98 cm ²	87,96 cm
660,52 cm ²	91,11 cm	21,99 cm	201,06 cm ²	572,56 cm ²
75,4 cm	84,82 cm	63,62 cm ²	50,27 cm	38,48 cm ²
28,27 cm	53,41 cm	530,93 cm ²	615,75 cm ²	81,68 cm



Antworten

1a. _____

1c. _____

2a. _____

2c. _____

3a. _____

3c. _____

4a. _____

4c. _____

5a. _____

5c. _____

6a. _____

6c. _____

7a. _____

7c. _____

8a. _____

8c. _____

9a. _____

9c. _____

10a. _____

10c. _____