



Bestimme den Wert jeder Strichlistenreihe.


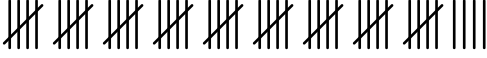



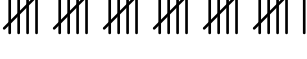




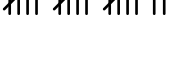







**Antworten**

- 1) 1. \_\_\_\_\_
- 2) 2. \_\_\_\_\_
- 3) 3. \_\_\_\_\_
- 4) 4. \_\_\_\_\_
- 5) 5. \_\_\_\_\_
- 6) 6. \_\_\_\_\_
- 7) 7. \_\_\_\_\_
- 8) 8. \_\_\_\_\_
- 9) 9. \_\_\_\_\_
- 10) 10. \_\_\_\_\_
- 11) 11. \_\_\_\_\_
- 12) 12. \_\_\_\_\_
- 13) 13. \_\_\_\_\_
- 14) 14. \_\_\_\_\_
- 15) 15. \_\_\_\_\_
- 16) 16. \_\_\_\_\_
- 17) 17. \_\_\_\_\_
- 18) 18. \_\_\_\_\_



Bestimme den Wert jeder Strichlistenreihe.

Antworten

- |   |               |
|---|---------------|
| 1)     | 1. <u>19</u>  |
| 2)     | 2. <u>49</u>  |
| 3)     | 3. <u>16</u>  |
| 4)     | 4. <u>44</u>  |
| 5)     | 5. <u>33</u>  |
| 6)     | 6. <u>31</u>  |
| 7)     | 7. <u>24</u>  |
| 8)     | 8. <u>28</u>  |
| 9)    | 9. <u>9</u>   |
| 10)  | 10. <u>14</u> |
| 11)  | 11. <u>17</u> |
| 12)  | 12. <u>12</u> |
| 13)  | 13. <u>30</u> |
| 14)  | 14. <u>15</u> |
| 15)  | 15. <u>27</u> |
| 16)  | 16. <u>11</u> |
| 17)  | 17. <u>45</u> |
| 18)  | 18. <u>46</u> |