



Bestimme den Wert jeder Strichlistenreihe.

Antworten

1) IIII IIII IIII IIII |

1. _____

2) IIII IIII III

2. _____

3) IIII IIII IIII IIII

3. _____

4) IIII IIII IIII IIII IIII IIII IIII IIII IIII

4. _____

5) IIII IIII IIII IIII IIII IIII IIII

5. _____

6) IIII IIII

6. _____

7) IIII IIII IIII IIII IIII IIII IIII IIII IIII IIII IIII

7. _____

8) IIII IIII IIII IIII II

8. _____

9) IIII IIII IIII IIII IIII IIII IIII II

9. _____

10) IIII IIII IIII

10. _____

11) IIII IIII |

11. _____

12) IIII IIII

12. _____

13) IIII IIII IIII

13. _____

14) IIII IIII IIII IIII IIII IIII IIII IIII IIII

14. _____

15) IIII IIII IIII IIII IIII

15. _____

16) IIII IIII IIII IIII IIII IIII IIII

16. _____









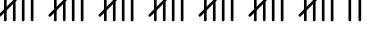
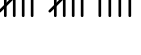
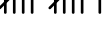







17) IIII IIII IIII IIII IIII IIII IIII IIII IIII IIII II

17. _____

18) IIII IIII



Bestimme den Wert jeder Strichlistenreihe.

- 1) 
- 2) 
- 3) 
- 4) 
- 5) 
- 6) 
- 7) 
- 8) 
- 9) 
- 10) 
- 11) 
- 12) 
- 13) 
- 14) 
- 15) 
- 16) 
- 17) 
- 18) 

Antworten

1. 21
2. 13
3. 20
4. 45
5. 33
6. 9
7. 50
8. 22
9. 37
10. 14
11. 11
12. 8
13. 15
14. 43
15. 25
16. 35
17. 47
18. 10