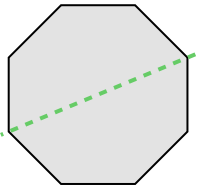


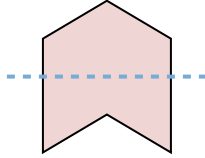


Bestimme, ob die Linie durch jede Figur eine symmetrische Linie ist.

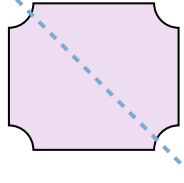
Bsp)



1)



2)



Antworten

Bsp. ja

1. _____

2. _____

3. _____

4. _____

5. _____

6. _____

7. _____

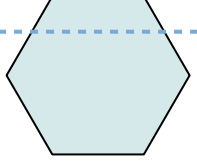
8. _____

9. _____


10. _____

11. _____

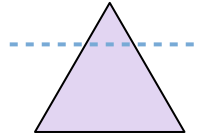
3)



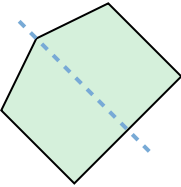
4)



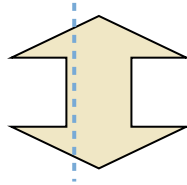
5)



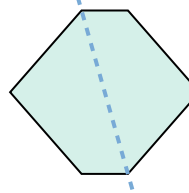
6)



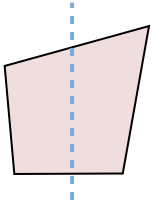
7)



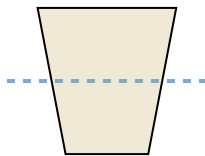
8)



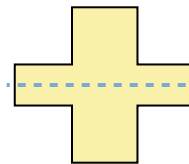
9)



10)




11)



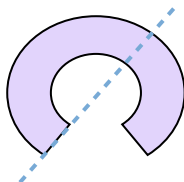


Bestimme, ob die Linie durch jede Figur eine symmetrische Linie ist.

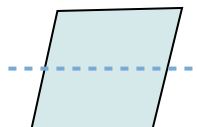
Bsp)



1)



2)



Antworten

Bsp. ja

1. _____

2. _____

3. _____

4. _____

5. _____

6. _____

7. _____

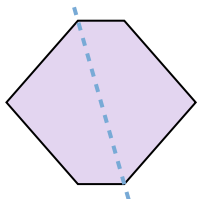
8. _____

9. _____

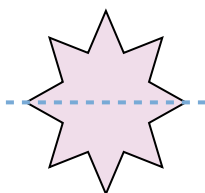
10. _____

11. _____

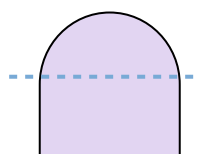
3)



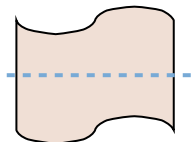
4)



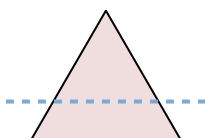
5)



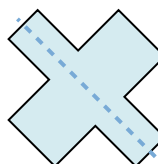
6)



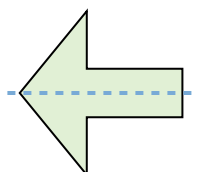
7)



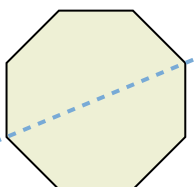
8)



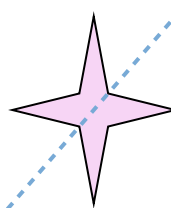
9)



10)



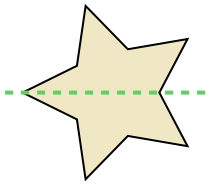
11)



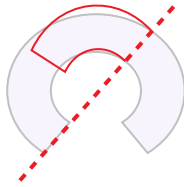


Bestimme, ob die Linie durch jede Figur eine symmetrische Linie ist.

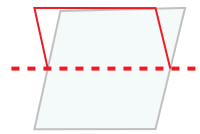
Bsp)



1)



2)



Antworten

Bsp. ja

1. nein

2. nein

3. nein

4. ja

5. nein

6. nein

7. nein

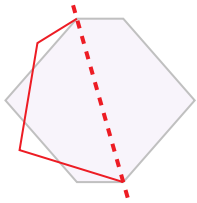
8. ja

9. ja

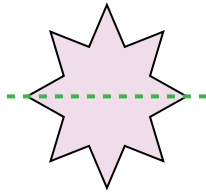
10. ja

11. ja

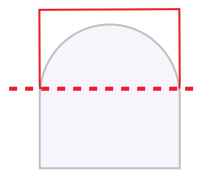
3)



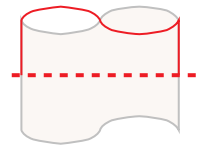
4)



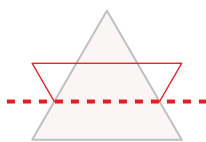
5)



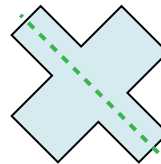
6)



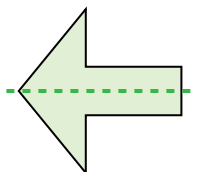
7)



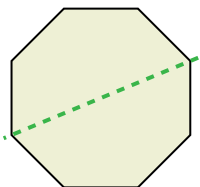
8)



9)



10)



11)

