




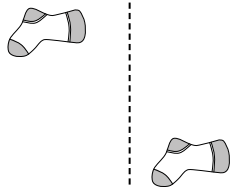
Stelle fest, ob eine Form-Verschiebung, Form-Drehung oder Form-Spiegelung vorliegt.

Antworten

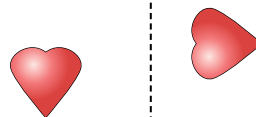
1)



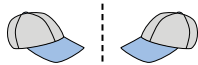
2)



3)




4)



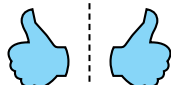
5)




6)




7)



8)



9)



10)



11)



12)



13)



14)



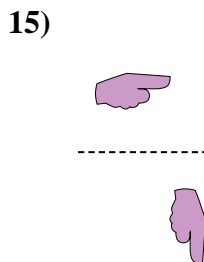
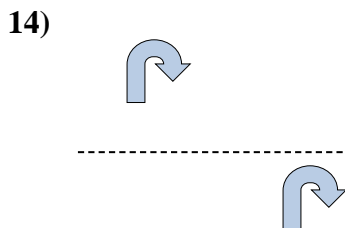
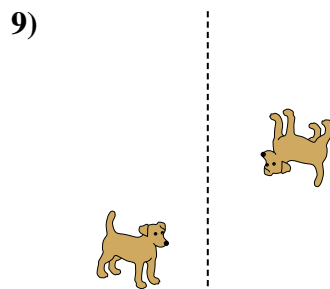
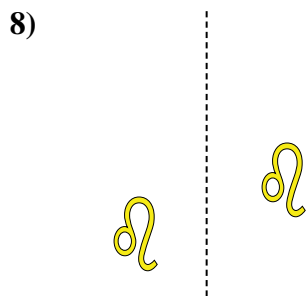
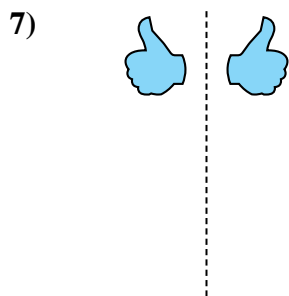
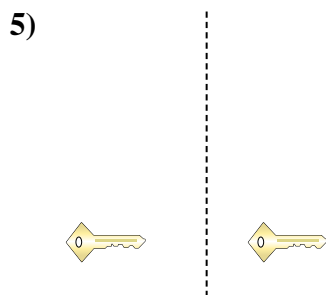
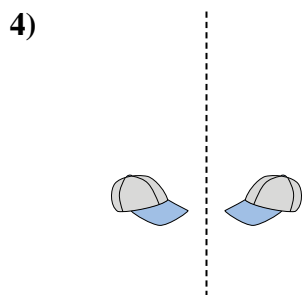
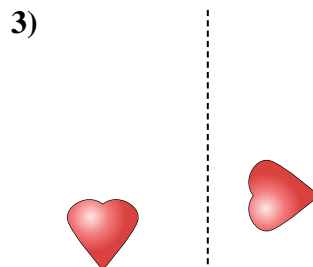
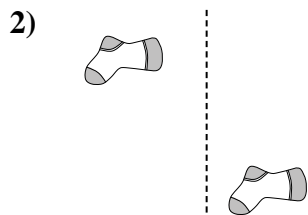

15)



1. _____
2. _____
3. _____
4. _____
5. _____
6. _____
7. _____
8. _____
9. _____
10. _____
11. _____
12. _____
13. _____
14. _____
15. _____



Stelle fest, ob eine Form-Verschiebung, Form-Drehung oder Form-Spiegelung vorliegt.



Antworten

1. Spiegelung
2. Verschiebung
3. Drehung
4. Spiegelung
5. Verschiebung
6. Drehung
7. Spiegelung
8. Verschiebung
9. Drehung
10. Spiegelung
11. Verschiebung
12. Drehung
13. Spiegelung
14. Verschiebung
15. Drehung