



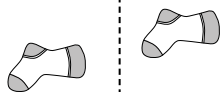
Stelle fest, ob eine Form-Verschiebung, Form-Drehung oder Form-Spiegelung vorliegt.

Antworten

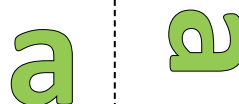
1)



2)



3)




1. _____

2. _____


3. _____

4. _____

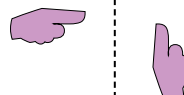
4)



5)



6)

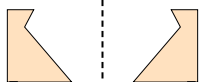


5. _____

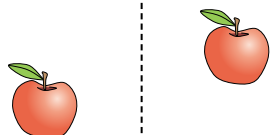
6. _____

7. _____

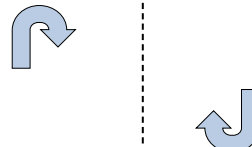
7)



8)



9)



8. _____

9. _____

10. _____

11. _____

10)



11)



12)



12. _____

13. _____

14. _____



15. _____

13)



14)



15)



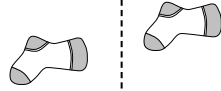


Stelle fest, ob eine Form-Verschiebung, Form-Drehung oder Form-Spiegelung vorliegt.

1)



2)



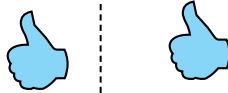
3)



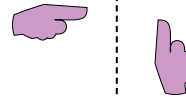
4)



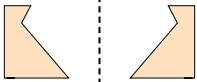
5)



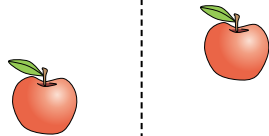
6)



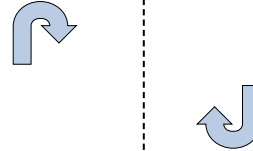
7)



8)



9)



10)



11)



12)



13)



14)



15)



Antworten

1. Spiegelung

2. Verschiebung

3. Drehung

4. Spiegelung

5. Verschiebung

6. Drehung

7. Spiegelung

8. Verschiebung

9. Drehung

10. Spiegelung

11. Verschiebung

12. Drehung

13. Spiegelung

14. Verschiebung

15. Drehung