



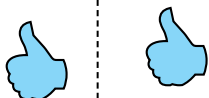
Stelle fest, ob eine Form-Verschiebung, Form-Drehung oder Form-Spiegelung vorliegt.

Antworten

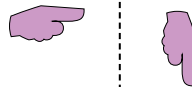
1)



2)



3)




1. \_\_\_\_\_

4)



5)



6)



2. \_\_\_\_\_

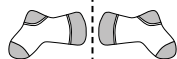
3. \_\_\_\_\_

4. \_\_\_\_\_


5. \_\_\_\_\_

6. \_\_\_\_\_

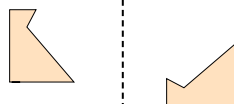
7)



8)



9)



7. \_\_\_\_\_

8. \_\_\_\_\_

9. \_\_\_\_\_

10. \_\_\_\_\_

11. \_\_\_\_\_

10)



11)



12)



12. \_\_\_\_\_

13. \_\_\_\_\_

14. \_\_\_\_\_

15. \_\_\_\_\_



13)



14)



15)



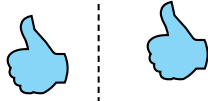


Stelle fest, ob eine Form-Verschiebung, Form-Drehung oder Form-Spiegelung vorliegt.

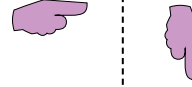
1)



2)




3)



4)



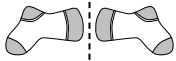
5)




6)



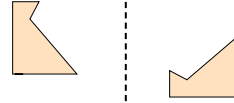
7)



8)



9)



10)



11)



12)



13)



14)



15)



Antworten

1. Spiegelung

2. Verschiebung

3. Drehung

4. Spiegelung

5. Verschiebung

6. Drehung

7. Spiegelung

8. Verschiebung

9. Drehung

10. Spiegelung

11. Verschiebung

12. Drehung

13. Spiegelung

14. Verschiebung

15. Drehung