
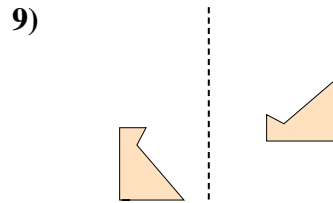
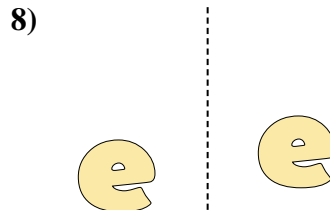
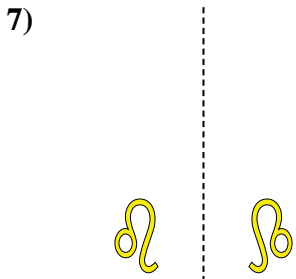



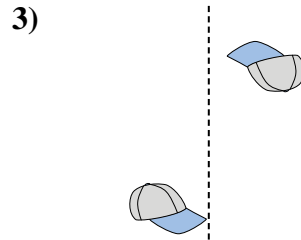
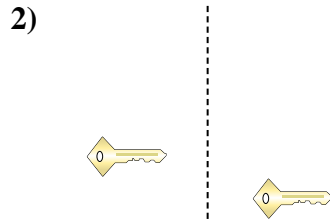





Stelle fest, ob eine Form-Verschiebung, Form-Drehung oder Form-Spiegelung vorliegt.

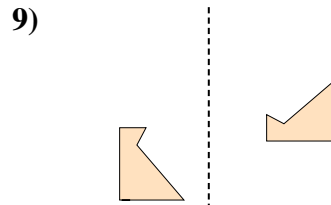
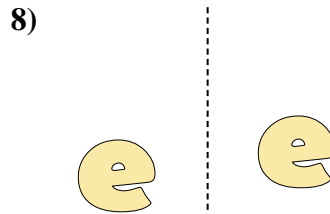
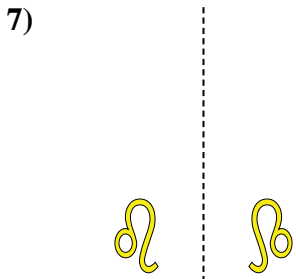



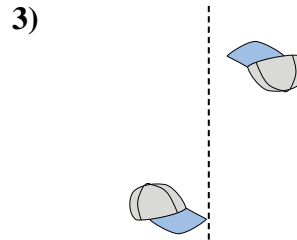
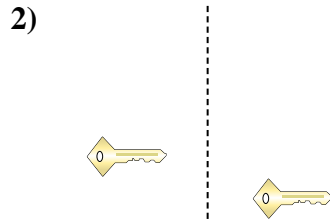

Antworten



1. _____
2. _____
3. _____
4. _____
5. _____
6. _____
7. _____
8. _____
9. _____
10. _____
11. _____
12. _____
13. _____
14. _____
15. _____



Stelle fest, ob eine Form-Verschiebung, Form-Drehung oder Form-Spiegelung vorliegt.



Antworten

1. Spiegelung

2. Verschiebung

3. Drehung

4. Spiegelung

5. Verschiebung

6. Drehung

7. Spiegelung

8. Verschiebung

9. Drehung

10. Spiegelung

11. Verschiebung

12. Drehung

13. Spiegelung

14. Verschiebung

15. Drehung