




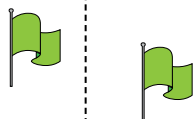
Stelle fest, ob eine Form-Verschiebung, Form-Drehung oder Form-Spiegelung vorliegt.

Antworten

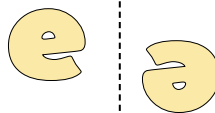
1)



2)



3)

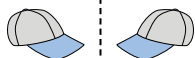


1. _____

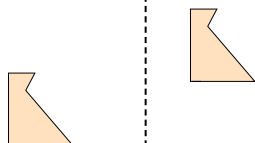
2. _____

3. _____

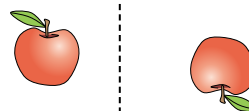
4)



5)



6)



4. _____

5. _____

6. _____

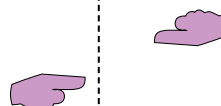
7)



8)



9)



7. _____

8. _____

9. _____

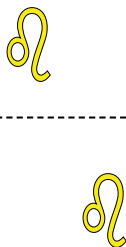
10. _____

11. _____


10)



11)



12)



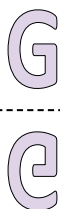
12. _____

13. _____

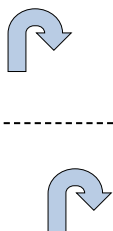
14. _____

15. _____

13)



14)



15)



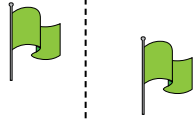


Stelle fest, ob eine Form-Verschiebung, Form-Drehung oder Form-Spiegelung vorliegt.

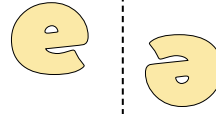
1)



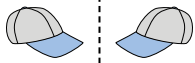
2)



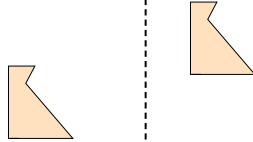
3)



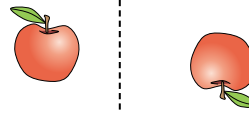
4)




5)




6)



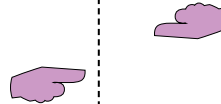
7)



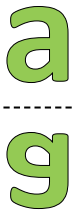
8)



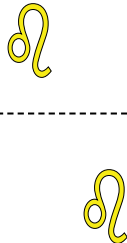
9)



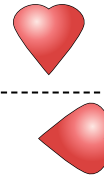
10)



11)



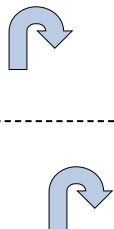
12)



13)



14)



15)



Antworten

1. Spiegelung

2. Verschiebung

3. Drehung

4. Spiegelung

5. Verschiebung

6. Drehung

7. Spiegelung

8. Verschiebung

9. Drehung

10. Spiegelung

11. Verschiebung

12. Drehung

13. Spiegelung

14. Verschiebung

15. Drehung