




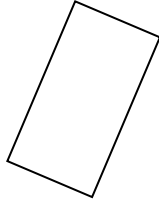
Stelle fest, was die gezeigten Formen sind: Dreieck, Quadrat, Rechteck, Sechseck oder eine andere Figur.

Antworten

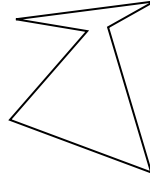
1)



2)



3)



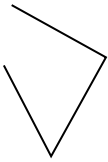
1. _____

2. _____

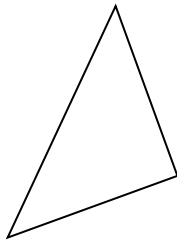
3. _____

4. _____

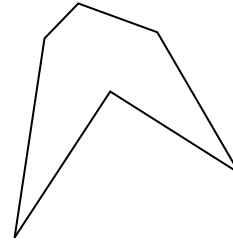
4)



5)



6)



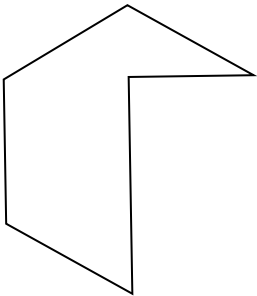
5. _____

6. _____

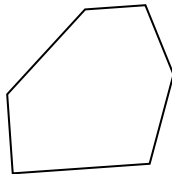
7. _____

8. _____

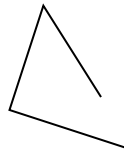
7)



8)



9)




9. _____

10. _____


11. _____

12. _____

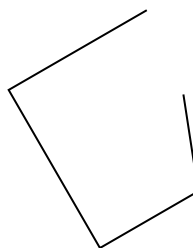
10)



11)



12)

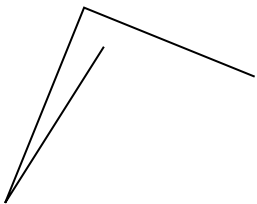


13. _____

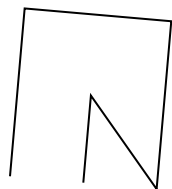
14. _____

15. _____

13)



14)




15)



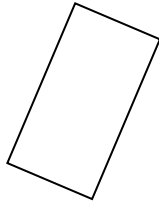


Stelle fest, was die gezeigten Formen sind: Dreieck, Quadrat, Rechteck, Sechseck oder eine andere Figur.

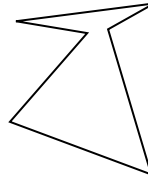
1)



2)



3)



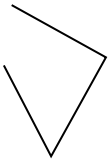
1. andere

2. Rechteck

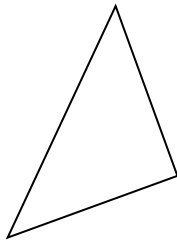
3. Sechseck

4. andere

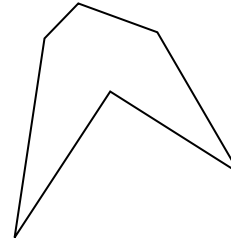
4)



5)



6)



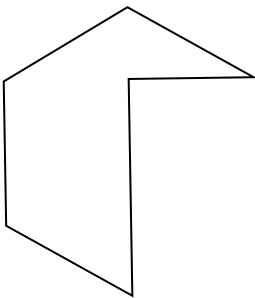
5. Dreieck

6. Sechseck

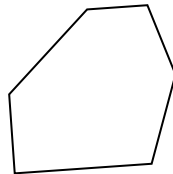
7. Sechseck

8. Sechseck

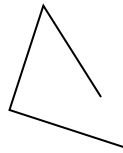
7)



8)



9)




9. andere


10. Quadrat

11. Sechseck

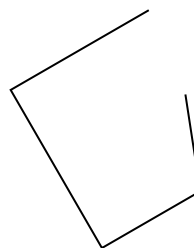
10)



11)



12)



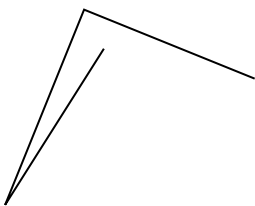
12. andere

13. andere


14. andere

15. andere

13)



14)



15)

