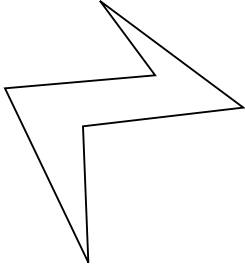


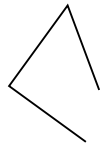


Stelle fest, was die gezeigten Formen sind: Dreieck, Quadrat, Rechteck, Sechseck oder eine andere Figur.

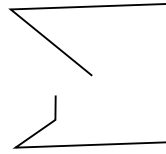
1)



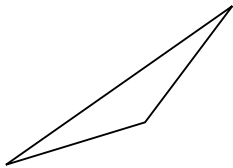
2)



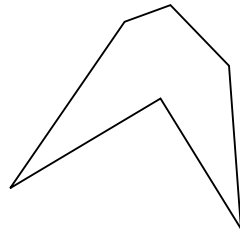
3)



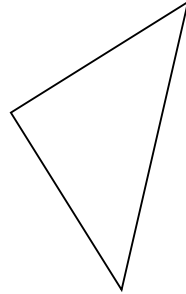
4)



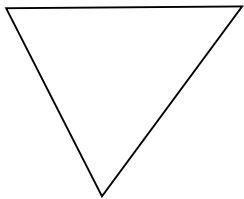
5)




6)



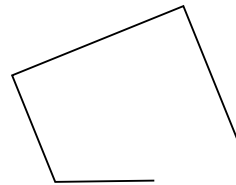
7)



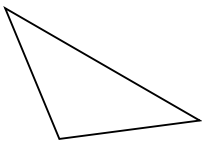
8)



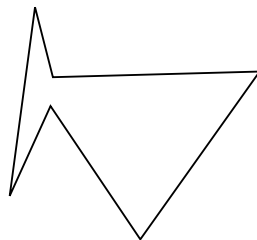
9)



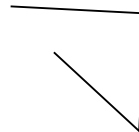
10)



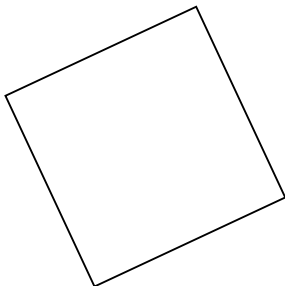
11)



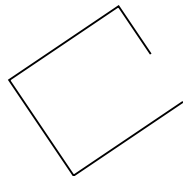
12)



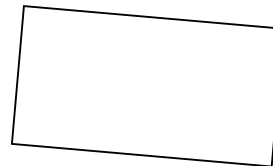
13)



14)



15)



Antworten

1. _____

2. _____

3. _____

4. _____

5. _____

6. _____

7. _____

8. _____

9. _____

10. _____

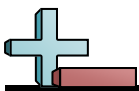
11. _____

12. _____


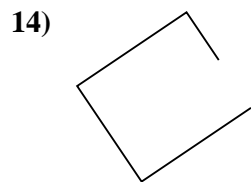
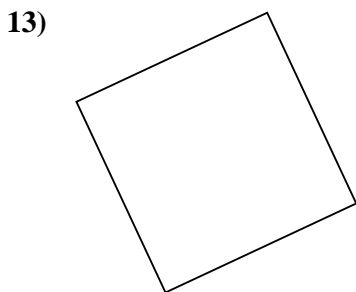
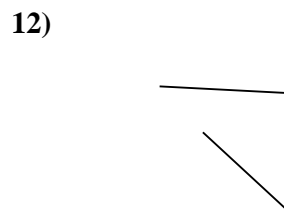
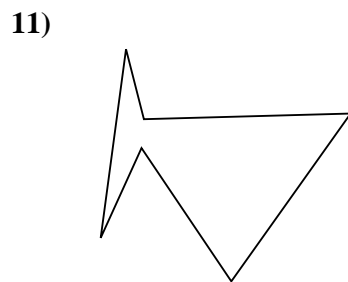
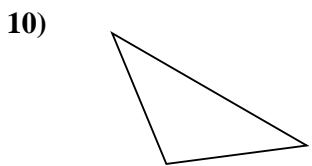
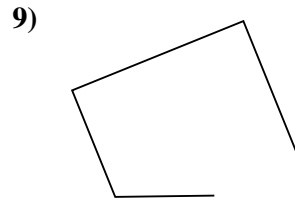
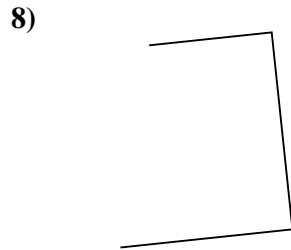
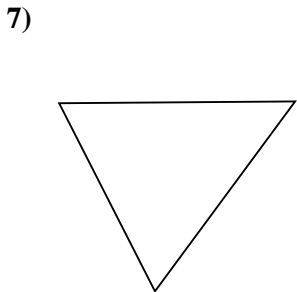
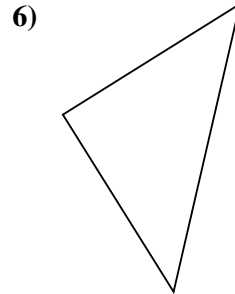
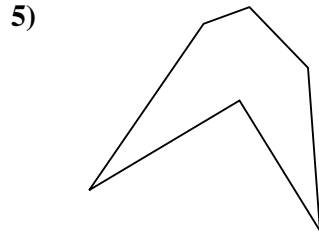
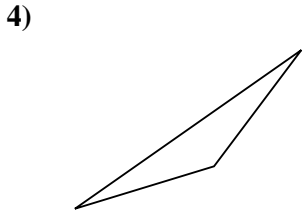
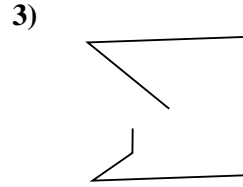
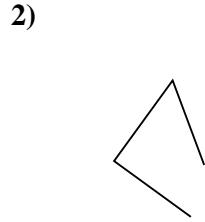
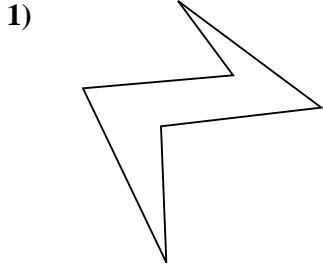
13. _____

14. _____

15. _____



Stelle fest, was die gezeigten Formen sind: Dreieck, Quadrat, Rechteck, Sechseck oder eine andere Figur.



Antworten

1. Sechseck

2. andere

3. andere

4. Dreieck

5. Sechseck

6. Dreieck

7. Dreieck

8. andere

9. andere

10. Dreieck

11. Sechseck

12. andere

13. Quadrat

14. andere

15. Rechteck