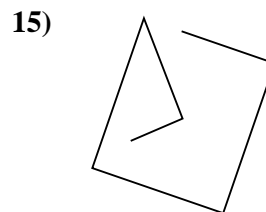
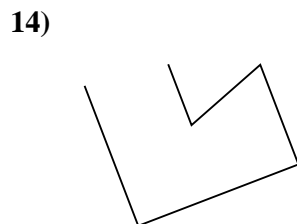
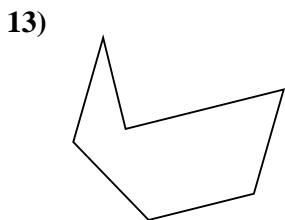
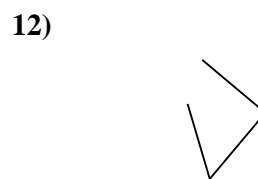

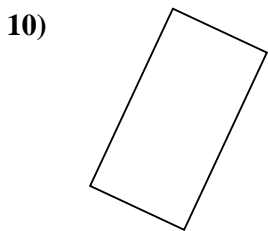
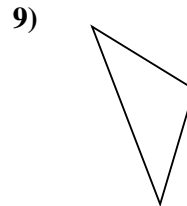
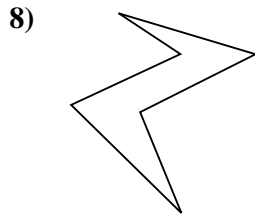
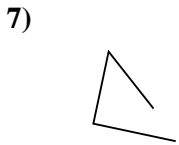
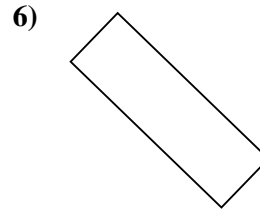
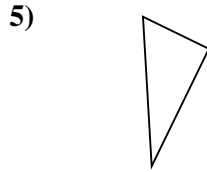
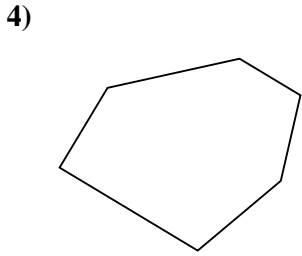
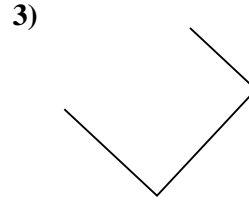
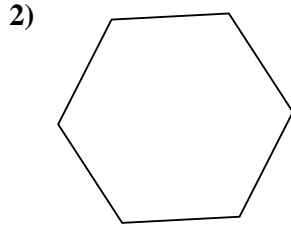
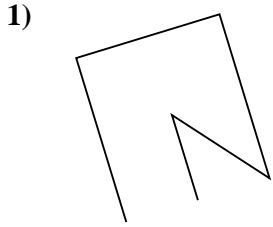




Stelle fest, was die gezeigten Formen sind: Dreieck, Quadrat, Rechteck, Sechseck oder eine andere Figur.

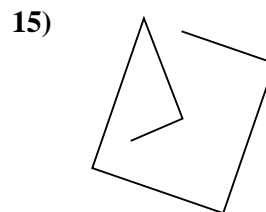
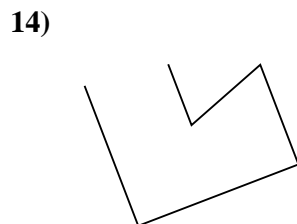
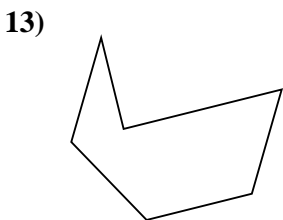
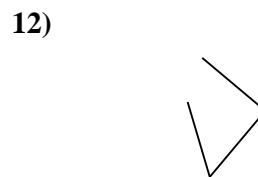
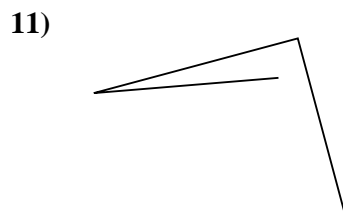
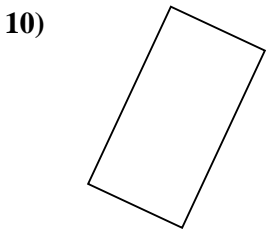
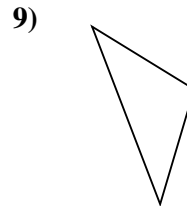
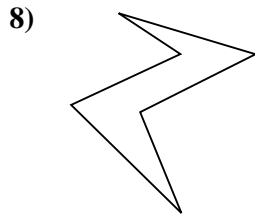
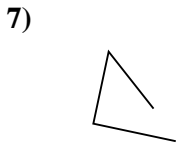
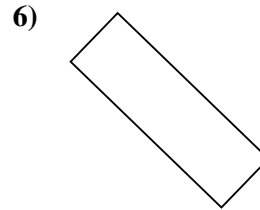
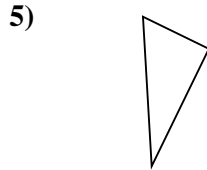
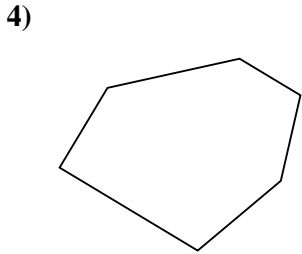
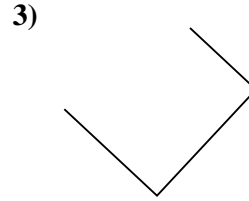
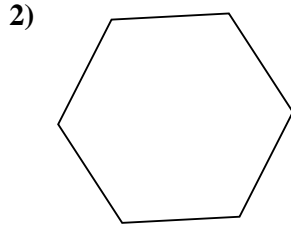
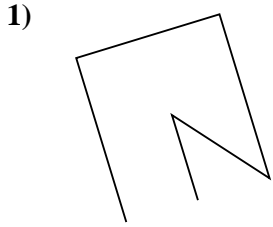


Antworten

- 1. _____
- 2. _____
- 3. _____
- 4. _____
- 5. _____
- 6. _____
- 7. _____
- 8. _____
- 9. _____
- 10. _____
- 11. _____
- 12. _____
- 13. _____
- 14. _____
- 15. _____



Stelle fest, was die gezeigten Formen sind: Dreieck, Quadrat, Rechteck, Sechseck oder eine andere Figur.



Antworten

1. andere

2. Sechseck

3. andere

4. Sechseck

5. Dreieck

6. Rechteck

7. andere

8. Sechseck

9. Dreieck

10. Rechteck

11. andere

12. andere

13. Sechseck

14. andere

15. andere