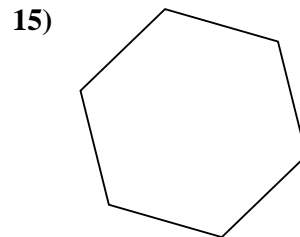
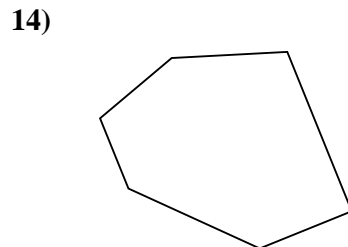
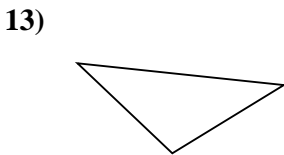
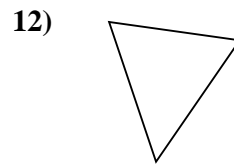
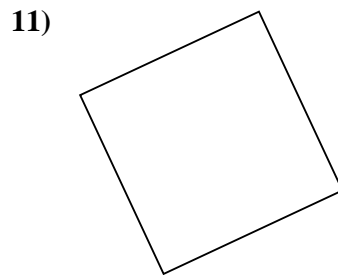
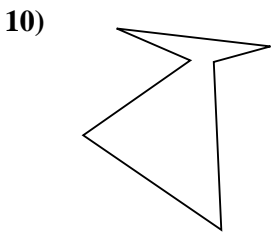
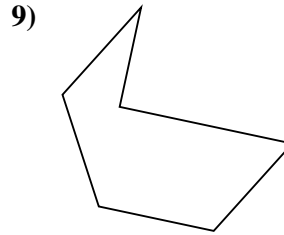
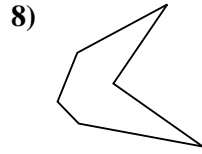
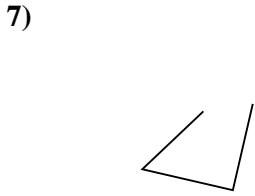
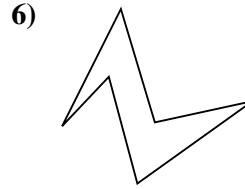
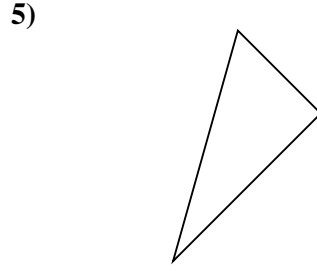
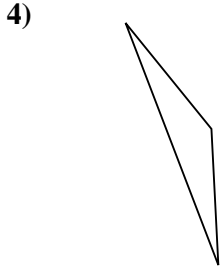
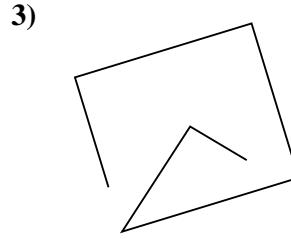
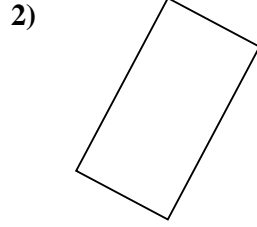
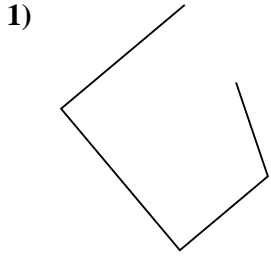




Stelle fest, was die gezeigten Formen sind: Dreieck, Quadrat, Rechteck, Sechseck oder eine andere Figur.

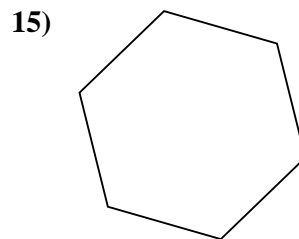
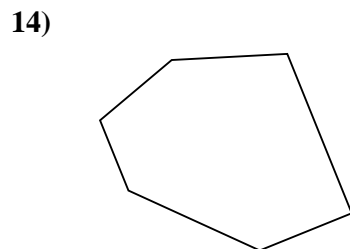
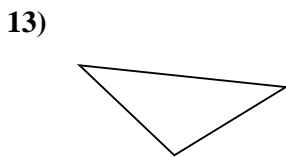
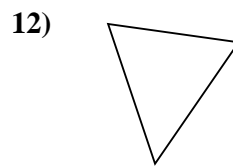
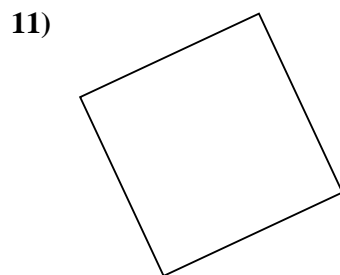
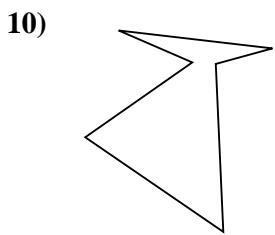
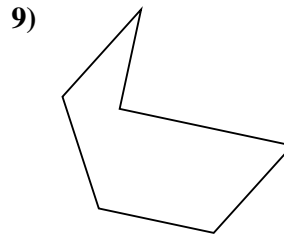
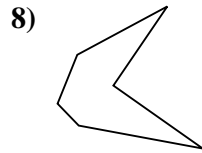
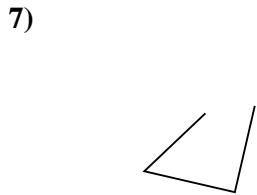
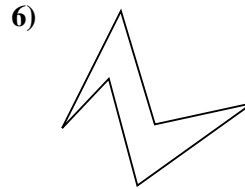
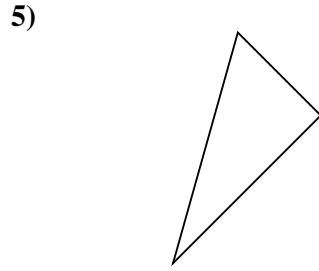
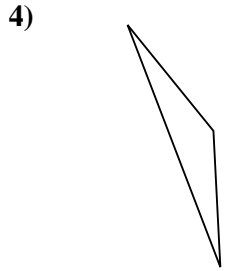
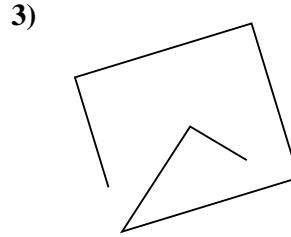
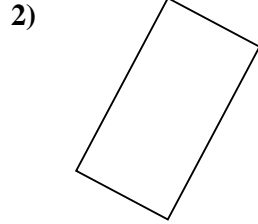
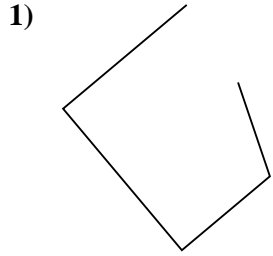


Antworten

- 1. \_\_\_\_\_
- 2. \_\_\_\_\_
- 3. \_\_\_\_\_
- 4. \_\_\_\_\_
- 5. \_\_\_\_\_
- 6. \_\_\_\_\_
- 7. \_\_\_\_\_
- 8. \_\_\_\_\_
- 9. \_\_\_\_\_
- 10. \_\_\_\_\_
- 11. \_\_\_\_\_
- 12. \_\_\_\_\_
- 13. \_\_\_\_\_
- 14. \_\_\_\_\_
- 15. \_\_\_\_\_



Stelle fest, was die gezeigten Formen sind: Dreieck, Quadrat, Rechteck, Sechseck oder eine andere Figur.



Antworten

1. andere

2. Rechteck

3. andere

4. Dreieck

5. Dreieck

6. Sechseck

7. andere

8. Sechseck

9. Sechseck

10. Sechseck

11. Quadrat

12. Dreieck

13. Dreieck

14. Sechseck

15. Sechseck