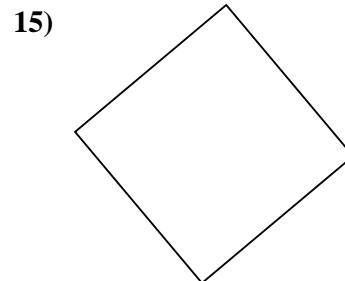
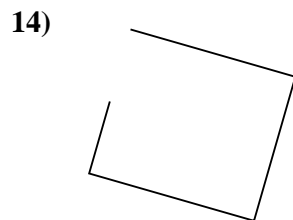
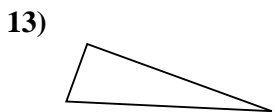
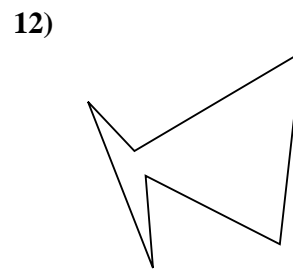
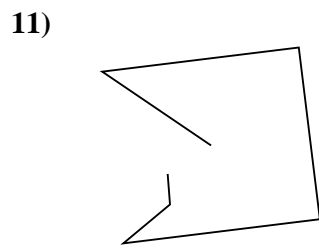

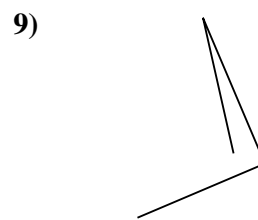
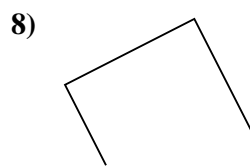
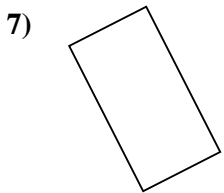
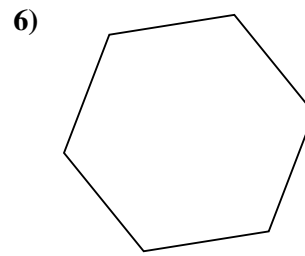
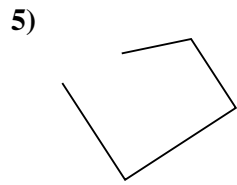
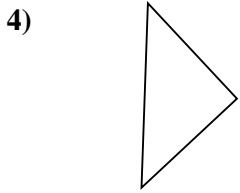
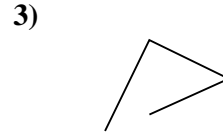
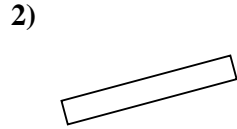
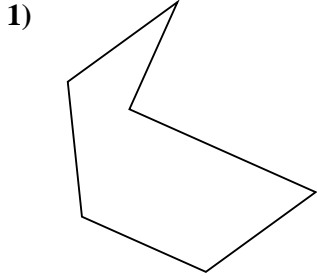




Stelle fest, was die gezeigten Formen sind: Dreieck, Quadrat, Rechteck, Sechseck oder eine andere Figur.

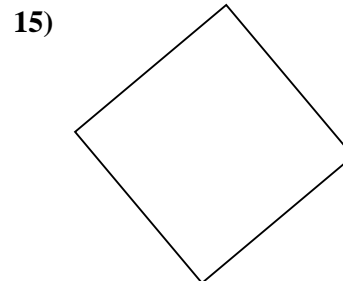
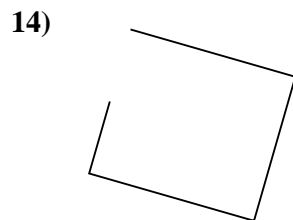
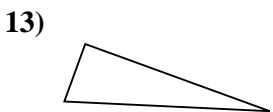
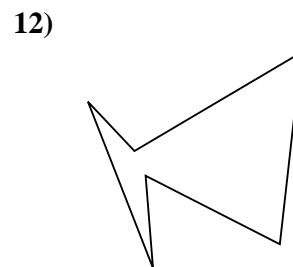
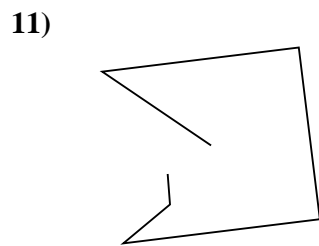

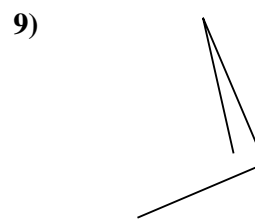
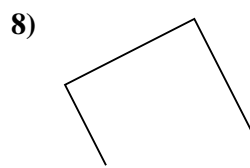
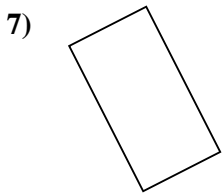
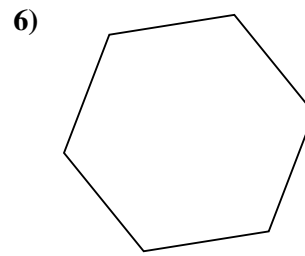
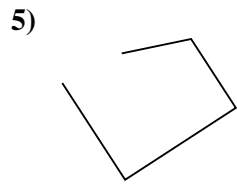
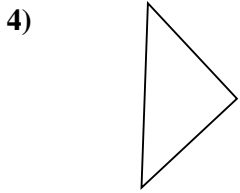
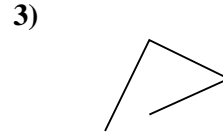
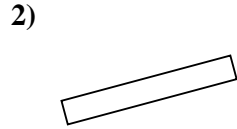
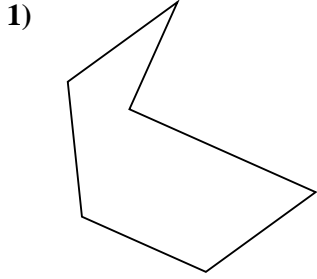


Antworten

- 1. _____
- 2. _____
- 3. _____
- 4. _____
- 5. _____
- 6. _____
- 7. _____
- 8. _____
- 9. _____
- 10. _____
- 11. _____
- 12. _____
- 13. _____
- 14. _____
- 15. _____



Stelle fest, was die gezeigten Formen sind: Dreieck, Quadrat, Rechteck, Sechseck oder eine andere Figur.



Antworten

1. Sechseck

2. Rechteck

3. andere

4. Dreieck

5. andere

6. Sechseck

7. Rechteck

8. andere

9. andere

10. Rechteck

11. andere

12. Sechseck

13. Dreieck

14. andere

15. Quadrat