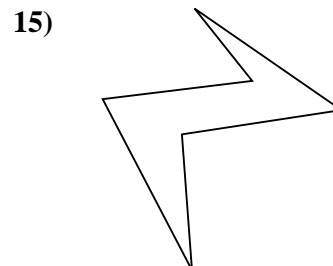
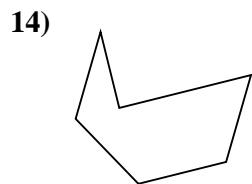
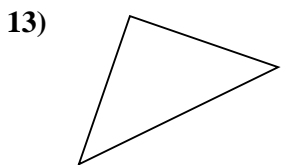
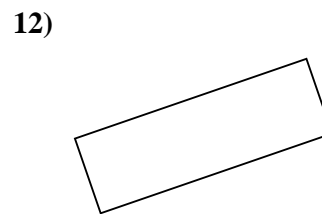
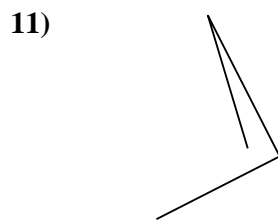
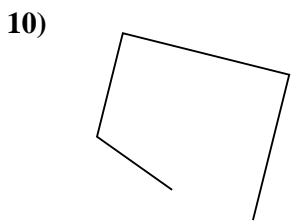
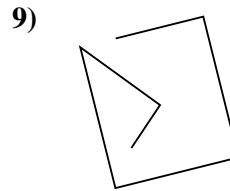
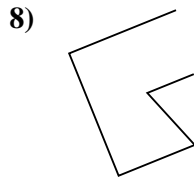
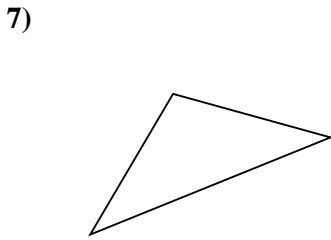
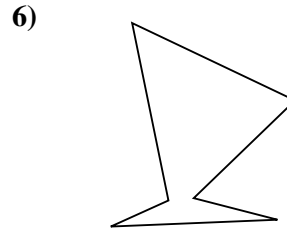
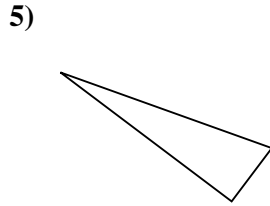
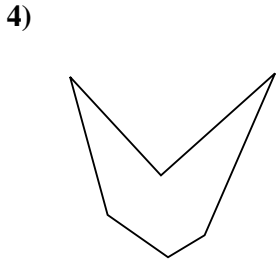
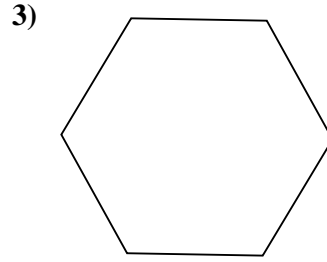
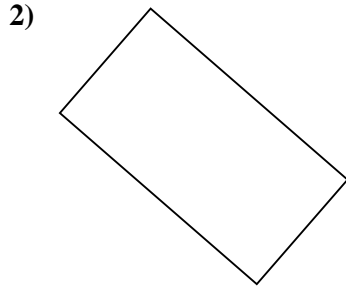
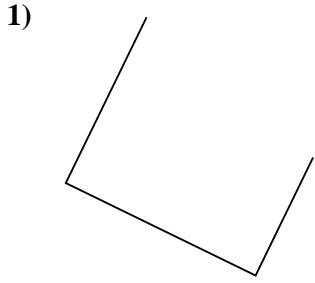




Stelle fest, was die gezeigten Formen sind: Dreieck, Quadrat, Rechteck, Sechseck oder eine andere Figur.

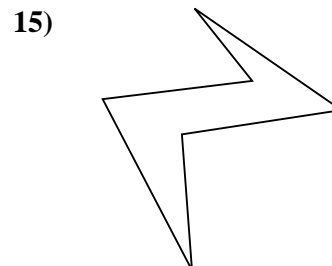
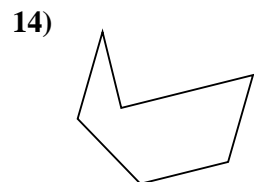
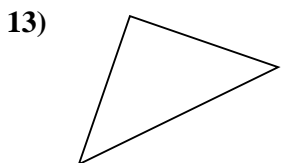
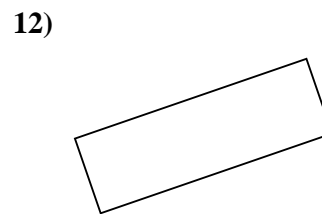
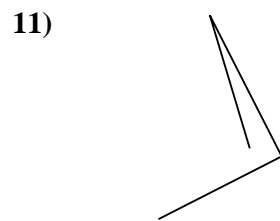
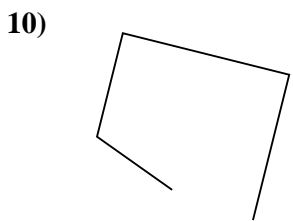
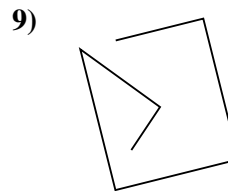
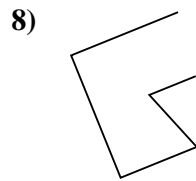
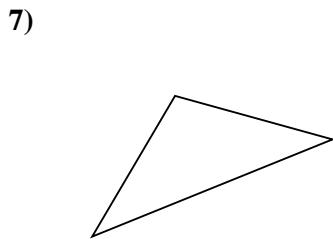
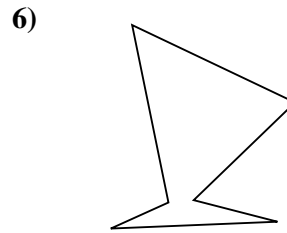
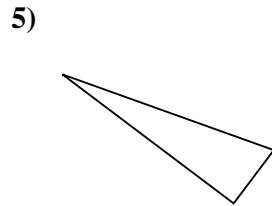
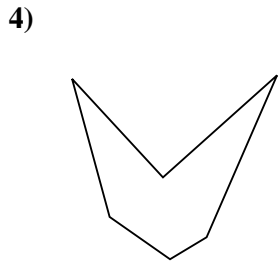
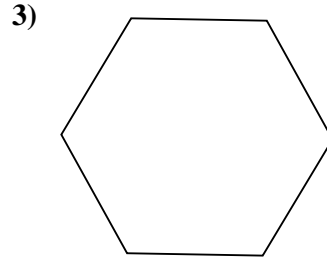
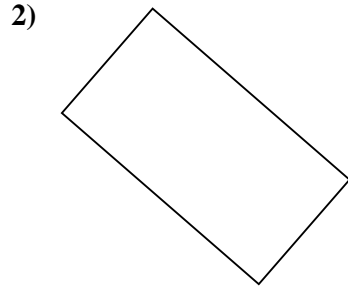
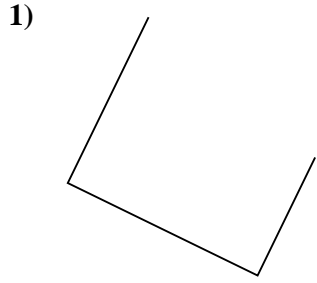


Antworten

- 1. _____
- 2. _____
- 3. _____
- 4. _____
- 5. _____
- 6. _____
- 7. _____
- 8. _____
- 9. _____
- 10. _____
- 11. _____
- 12. _____
- 13. _____
- 14. _____
- 15. _____



Stelle fest, was die gezeigten Formen sind: Dreieck, Quadrat, Rechteck, Sechseck oder eine andere Figur.



Antworten

1. andere

2. Rechteck

3. Sechseck

4. Sechseck

5. Dreieck

6. Sechseck

7. Dreieck

8. andere

9. andere

10. andere

11. andere

12. Rechteck

13. Dreieck

14. Sechseck

15. Sechseck